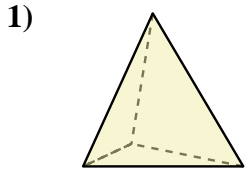


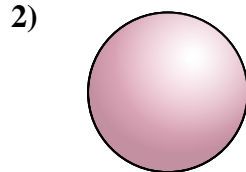


Determine which choice BEST describes the shape shown.

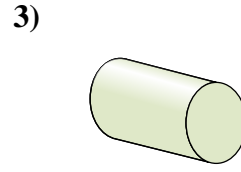
Answers



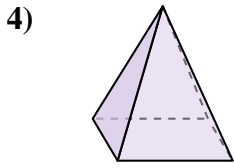
- A. Rectangular Prism
- B. Triangular Pyramid
- C. Cube
- D. Cylinder



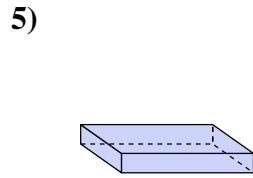
- A. Rectangular Pyramid
- B. Cube
- C. Triangular Pyramid
- D. Sphere



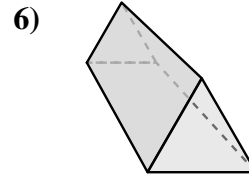
- A. Rectangular Pyramid
- B. Triangular Prism
- C. Cone
- D. Cylinder



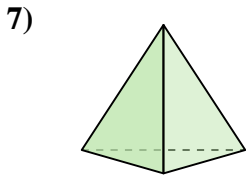
- A. Cone
- B. Rectangular Pyramid
- C. Triangular Pyramid
- D. Cube



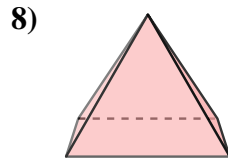
- A. Rectangular Prism
- B. Triangular Pyramid
- C. Cone
- D. Cylinder



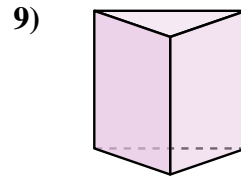
- A. Sphere
- B. Triangular Prism
- C. Triangular Pyramid
- D. Cone



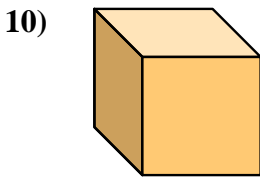
- A. Sphere
- B. Cone
- C. Triangular Pyramid
- D. Cube



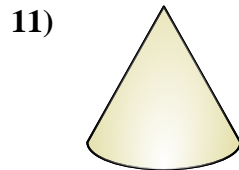
- A. Sphere
- B. Triangular Pyramid
- C. Cube
- D. Rectangular Pyramid



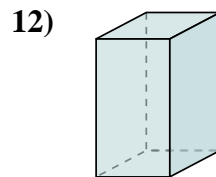
- A. Triangular Prism
- B. Cone
- C. Rectangular Prism
- D. Rectangular Pyramid



- A. Triangular Pyramid
- B. Rectangular Prism
- C. Cube
- D. Triangular Prism



- A. Rectangular Prism
- B. Cube
- C. Cone
- D. Sphere



- A. Rectangular Prism
- B. Rectangular Pyramid
- C. Triangular Pyramid
- D. Cube

1. _____

2. _____

3. _____

4. _____

5. _____

6. _____

7. _____

8. _____

9. _____

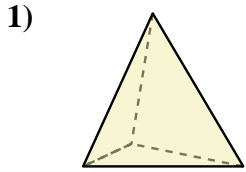
10. _____

11. _____

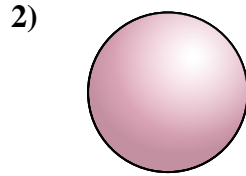
12. _____



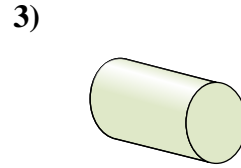
Determine which choice BEST describes the shape shown.



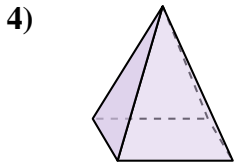
- 1) A. Rectangular Prism
- B. Triangular Pyramid
- C. Cube
- D. Cylinder



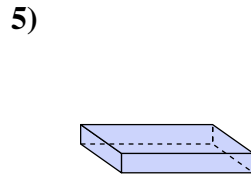
- 2) A. Rectangular Pyramid
- B. Cube
- C. Triangular Pyramid
- D. Sphere



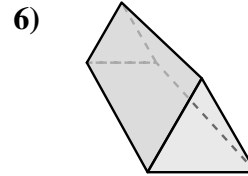
- 3) A. Rectangular Pyramid
- B. Triangular Prism
- C. Cone
- D. Cylinder



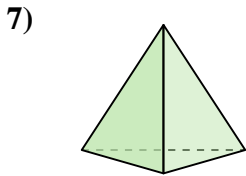
- 4) A. Cone
- B. Rectangular Pyramid
- C. Triangular Pyramid
- D. Cube



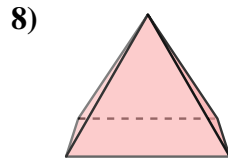
- 5) A. Rectangular Prism
- B. Triangular Pyramid
- C. Cone
- D. Cylinder



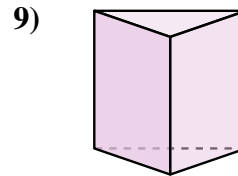
- 6) A. Sphere
- B. Triangular Prism
- C. Triangular Pyramid
- D. Cone



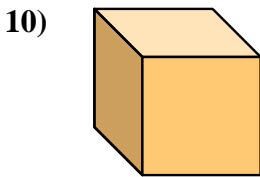
- 7) A. Sphere
- B. Cone
- C. Triangular Pyramid
- D. Cube



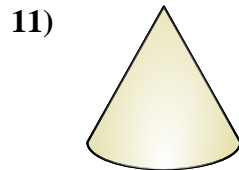
- 8) A. Sphere
- B. Triangular Pyramid
- C. Cube
- D. Rectangular Pyramid



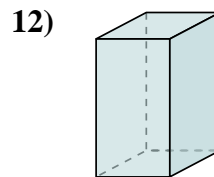
- 9) A. Triangular Prism
- B. Cone
- C. Rectangular Prism
- D. Rectangular Pyramid



- 10) A. Triangular Pyramid
- B. Rectangular Prism
- C. Cube
- D. Triangular Prism



- 11) A. Rectangular Prism
- B. Cube
- C. Cone
- D. Sphere



- 12) A. Rectangular Prism
- B. Rectangular Pyramid
- C. Triangular Pyramid
- D. Cube

Answers

- 1. **B**
- 2. **D**
- 3. **D**
- 4. **B**
- 5. **A**
- 6. **B**
- 7. **C**
- 8. **D**
- 9. **A**
- 10. **C**
- 11. **C**
- 12. **A**