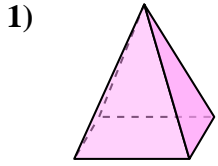


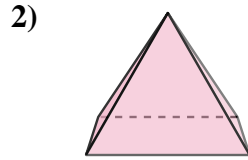


Determine which choice BEST describes the shape shown.

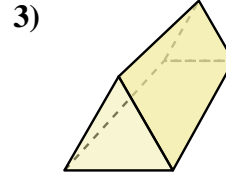
Answers



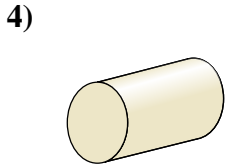
- A. Cube
- B. Sphere
- C. Rectangular Pyramid
- D. Triangular Prism



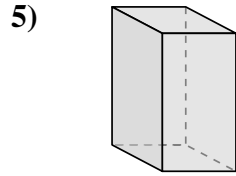
- A. Rectangular Pyramid
- B. Triangular Pyramid
- C. Rectangular Prism
- D. Cone



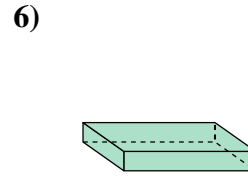
- A. Cone
- B. Cylinder
- C. Triangular Pyramid
- D. Triangular Prism



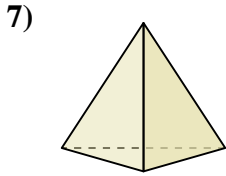
- A. Rectangular Pyramid
- B. Sphere
- C. Cylinder
- D. Triangular Pyramid



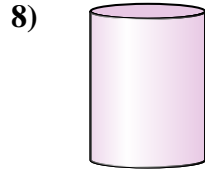
- A. Rectangular Prism
- B. Triangular Prism
- C. Rectangular Pyramid
- D. Cone



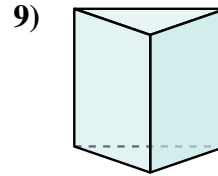
- A. Sphere
- B. Cylinder
- C. Cube
- D. Rectangular Prism



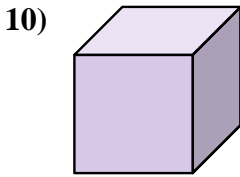
- A. Cone
- B. Rectangular Prism
- C. Triangular Pyramid
- D. Sphere



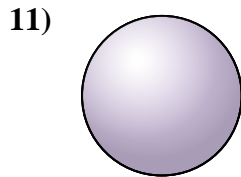
- A. Sphere
- B. Triangular Prism
- C. Cube
- D. Cylinder



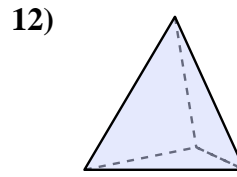
- A. Cube
- B. Triangular Prism
- C. Rectangular Prism
- D. Cylinder



- A. Triangular Prism
- B. Cube
- C. Rectangular Pyramid
- D. Sphere



- A. Cube
- B. Cylinder
- C. Triangular Pyramid
- D. Sphere

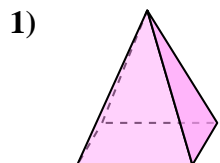


- A. Triangular Pyramid
- B. Rectangular Pyramid
- C. Cylinder
- D. Rectangular Prism

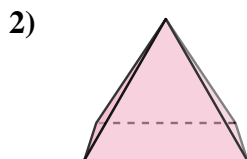
- 1. _____
- 2. _____
- 3. _____
- 4. _____
- 5. _____
- 6. _____
- 7. _____
- 8. _____
- 9. _____
- 10. _____
- 11. _____
- 12. _____



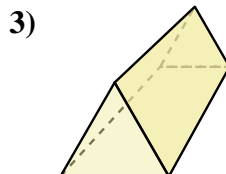
Determine which choice BEST describes the shape shown.



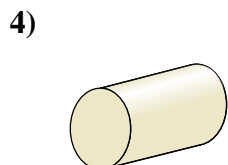
- A. Cube
- B. Sphere
- C. Rectangular Pyramid
- D. Triangular Prism



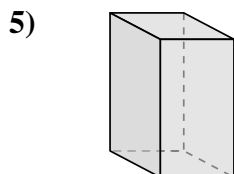
- A. Rectangular Pyramid
- B. Triangular Pyramid
- C. Rectangular Prism
- D. Cone



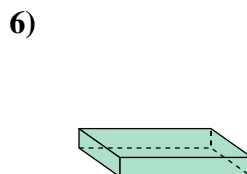
- A. Cone
- B. Cylinder
- C. Triangular Pyramid
- D. Triangular Prism



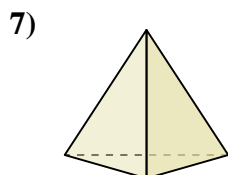
- A. Rectangular Pyramid
- B. Sphere
- C. Cylinder
- D. Triangular Pyramid



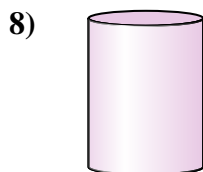
- A. Rectangular Prism
- B. Triangular Prism
- C. Rectangular Pyramid
- D. Cone



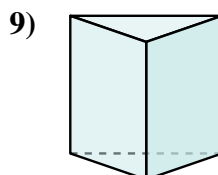
- A. Sphere
- B. Cylinder
- C. Cube
- D. Rectangular Prism



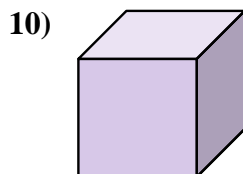
- A. Cone
- B. Rectangular Prism
- C. Triangular Pyramid
- D. Sphere



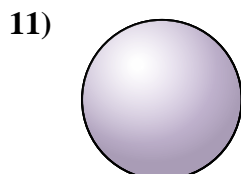
- A. Sphere
- B. Triangular Prism
- C. Cube
- D. Cylinder



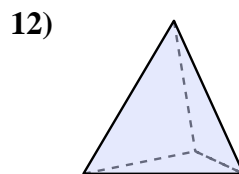
- A. Cube
- B. Triangular Prism
- C. Rectangular Prism
- D. Cylinder



- A. Triangular Prism
- B. Cube
- C. Rectangular Pyramid
- D. Sphere



- A. Cube
- B. Cylinder
- C. Triangular Pyramid
- D. Sphere



- A. Triangular Pyramid
- B. Rectangular Pyramid
- C. Cylinder
- D. Rectangular Prism

Answers

1. C

2. A

3. D

4. C

5. A

6. D

7. C

8. D

9. B

10. B

11. D

12. A