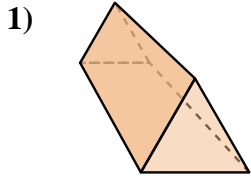


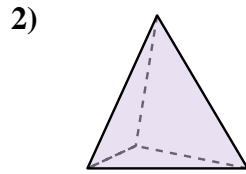


Determine which choice BEST describes the shape shown.

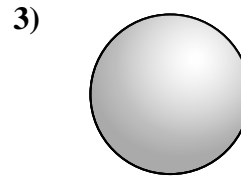
Answers



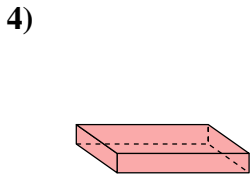
- 1) A. Cube
- B. Cone
- C. Sphere
- D. Triangular Prism



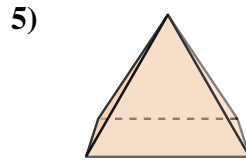
- 2) A. Cylinder
- B. Triangular Prism
- C. Rectangular Pyramid
- D. Triangular Pyramid



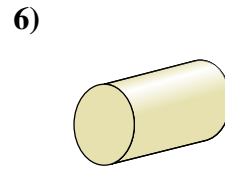
- 3) A. Cone
- B. Triangular Pyramid
- C. Sphere
- D. Rectangular Pyramid



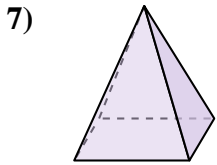
- 4) A. Triangular Pyramid
- B. Cylinder
- C. Rectangular Pyramid
- D. Rectangular Prism



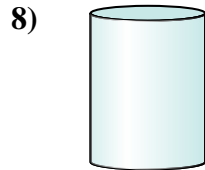
- 5) A. Rectangular Pyramid
- B. Cylinder
- C. Cube
- D. Triangular Pyramid



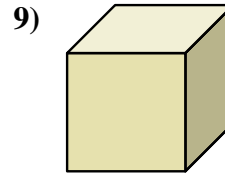
- 6) A. Rectangular Pyramid
- B. Cylinder
- C. Rectangular Prism
- D. Triangular Prism



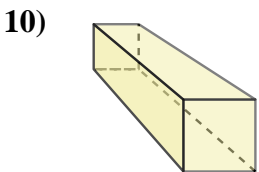
- 7) A. Rectangular Pyramid
- B. Sphere
- C. Rectangular Prism
- D. Cone



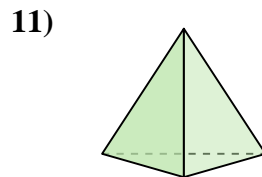
- 8) A. Cube
- B. Rectangular Pyramid
- C. Triangular Prism
- D. Cylinder



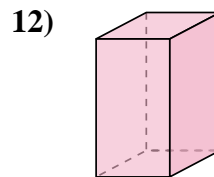
- 9) A. Sphere
- B. Cube
- C. Cylinder
- D. Cone



- 10) A. Rectangular Prism
- B. Cube
- C. Rectangular Pyramid
- D. Triangular Pyramid



- 11) A. Cone
- B. Rectangular Pyramid
- C. Triangular Pyramid
- D. Rectangular Prism



- 12) A. Cone
- B. Rectangular Prism
- C. Triangular Pyramid
- D. Triangular Prism

1. \_\_\_\_\_

2. \_\_\_\_\_

3. \_\_\_\_\_

4. \_\_\_\_\_

5. \_\_\_\_\_

6. \_\_\_\_\_

7. \_\_\_\_\_

8. \_\_\_\_\_

9. \_\_\_\_\_

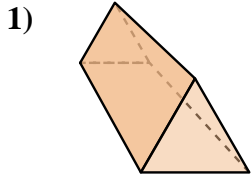
10. \_\_\_\_\_

11. \_\_\_\_\_

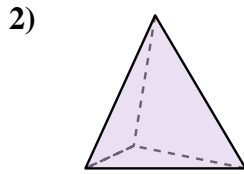
12. \_\_\_\_\_



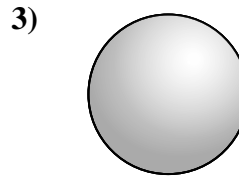
Determine which choice BEST describes the shape shown.



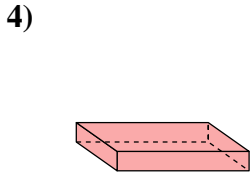
- A. Cube
- B. Cone
- C. Sphere
- D. Triangular Prism



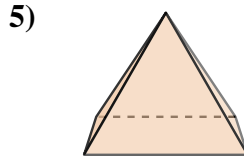
- A. Cylinder
- B. Triangular Prism
- C. Rectangular Pyramid
- D. Triangular Pyramid



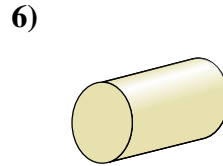
- A. Cone
- B. Triangular Pyramid
- C. Sphere
- D. Rectangular Pyramid



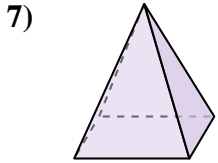
- A. Triangular Pyramid
- B. Cylinder
- C. Rectangular Pyramid
- D. Rectangular Prism



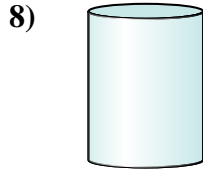
- A. Rectangular Pyramid
- B. Cylinder
- C. Cube
- D. Triangular Pyramid



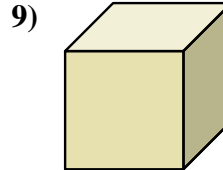
- A. Rectangular Pyramid
- B. Cylinder
- C. Rectangular Prism
- D. Triangular Prism



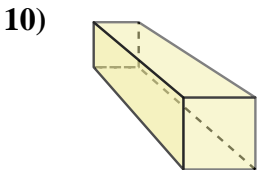
- A. Rectangular Pyramid
- B. Sphere
- C. Rectangular Prism
- D. Cone



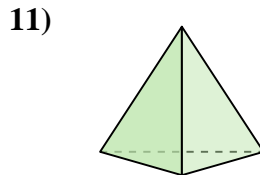
- A. Cube
- B. Rectangular Pyramid
- C. Triangular Prism
- D. Cylinder



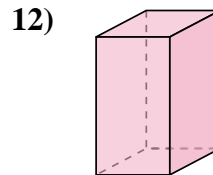
- A. Sphere
- B. Cube
- C. Cylinder
- D. Cone



- A. Rectangular Prism
- B. Cube
- C. Rectangular Pyramid
- D. Triangular Pyramid



- A. Cone
- B. Rectangular Pyramid
- C. Triangular Pyramid
- D. Rectangular Prism



- A. Cone
- B. Rectangular Prism
- C. Triangular Pyramid
- D. Triangular Prism

Answers

1. D

2. D

3. C

4. D

5. A

6. B

7. A

8. D

9. B

10. A

11. C

12. B