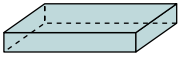




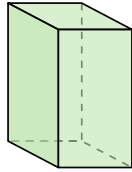
Determine which choice BEST describes the shape shown.

1)



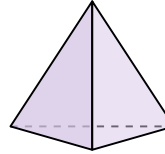
- A. Triangular Pyramid
- B. Cone
- C. Rectangular Prism
- D. Cylinder

2)




- A. Cone
- B. Rectangular Prism
- C. Triangular Pyramid
- D. Rectangular Pyramid

3)



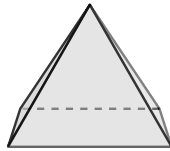
- A. Triangular Prism
- B. Cone
- C. Triangular Pyramid
- D. Sphere

4)



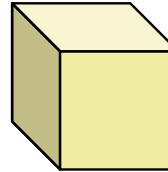
- A. Cylinder
- B. Triangular Prism
- C. Triangular Pyramid
- D. Rectangular Pyramid

5)



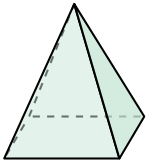
- A. Cone
- B. Rectangular Pyramid
- C. Sphere
- D. Cylinder

6)




- A. Cube
- B. Rectangular Prism
- C. Triangular Prism
- D. Cylinder

7)



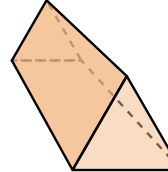
- A. Cone
- B. Rectangular Pyramid
- C. Sphere
- D. Rectangular Prism

8)



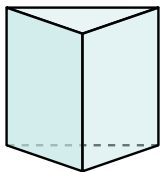
- A. Cone
- B. Rectangular Pyramid
- C. Triangular Pyramid
- D. Cube

9)



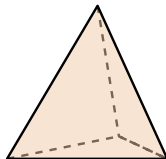
- A. Triangular Pyramid
- B. Sphere
- C. Triangular Prism
- D. Rectangular Pyramid

10)



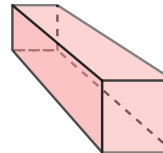
- A. Triangular Prism
- B. Sphere
- C. Cube
- D. Cone

11)



- A. Triangular Pyramid
- B. Triangular Prism
- C. Cylinder
- D. Cone

12)



- A. Triangular Prism
- B. Triangular Pyramid
- C. Rectangular Prism
- D. Cone

Answers

1. _____

2. _____

3. _____

4. _____

5. _____

6. _____

7. _____

8. _____

9. _____

10. _____

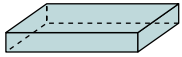
11. _____

12. _____



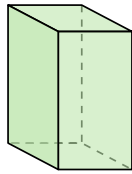
Determine which choice BEST describes the shape shown.

1)



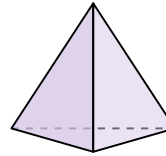
- A. Triangular Pyramid
- B. Cone
- C. Rectangular Prism
- D. Cylinder

2)




- A. Cone
- B. Rectangular Prism
- C. Triangular Pyramid
- D. Rectangular Pyramid

3)



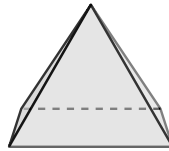
- A. Triangular Prism
- B. Cone
- C. Triangular Pyramid
- D. Sphere

4)



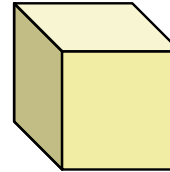
- A. Cylinder
- B. Triangular Prism
- C. Triangular Pyramid
- D. Rectangular Pyramid

5)



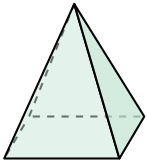
- A. Cone
- B. Rectangular Pyramid
- C. Sphere
- D. Cylinder

6)




- A. Cube
- B. Rectangular Prism
- C. Triangular Prism
- D. Cylinder

7)



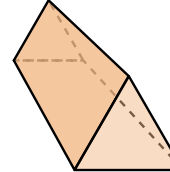
- A. Cone
- B. Rectangular Pyramid
- C. Sphere
- D. Rectangular Prism

8)



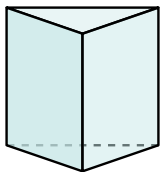
- A. Cone
- B. Rectangular Pyramid
- C. Triangular Pyramid
- D. Cube

9)



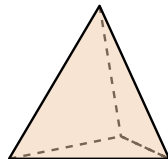
- A. Triangular Pyramid
- B. Sphere
- C. Triangular Prism
- D. Rectangular Pyramid

10)



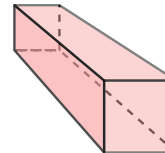
- A. Triangular Prism
- B. Sphere
- C. Cube
- D. Cone

11)



- A. Triangular Pyramid
- B. Triangular Prism
- C. Cylinder
- D. Cone

12)



- A. Triangular Prism
- B. Triangular Pyramid
- C. Rectangular Prism
- D. Cone

Answers

1. **C**

2. **B**

3. **C**

4. **A**

5. **B**

6. **A**

7. **B**

8. **A**

9. **C**

10. **A**

11. **A**

12. **C**