



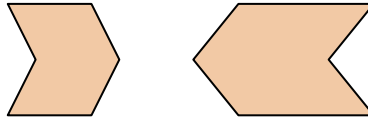
Determine if the shapes shown are 'similar', 'congruent' or 'neither'.

Answers

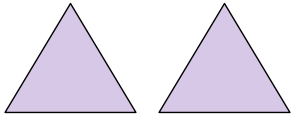
1)



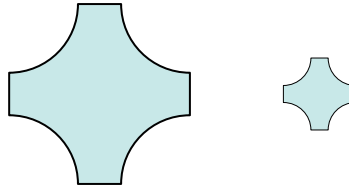
2)




3)



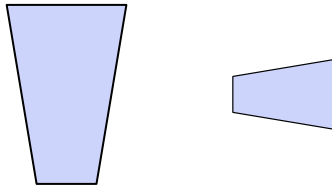
4)




5)



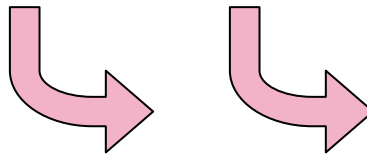
6)




7)



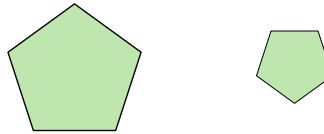
8)




9)



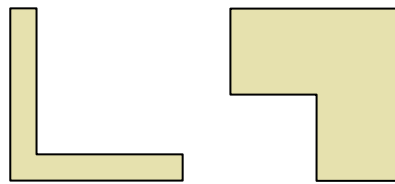
10)




11)



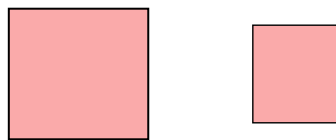
12)



13)



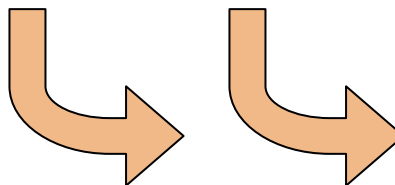
14)



15)



16)



1. _____

2. _____

3. _____

4. _____

5. _____

6. _____

7. _____

8. _____

9. _____

10. _____

11. _____

12. _____

13. _____

14. _____

15. _____

16. _____

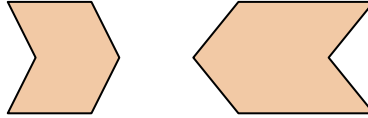


Determine if the shapes shown are 'similar', 'congruent' or 'neither'.

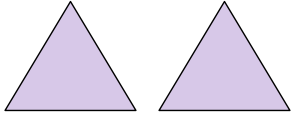
1)



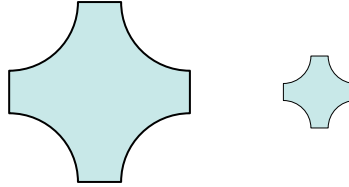
2)




3)



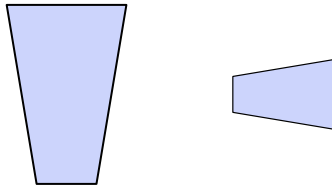
4)




5)



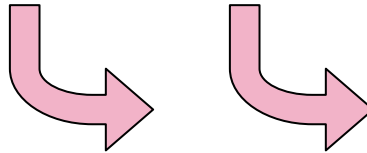
6)



7)



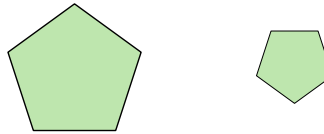
8)




9)



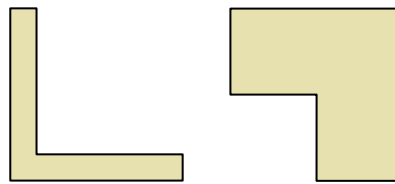
10)



11)



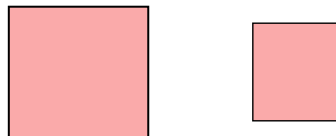
12)



13)



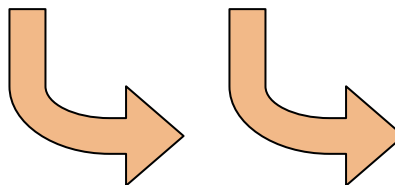
14)



15)



16)



Answers

1. congruent

2. neither

3. congruent

4. similar

5. neither

6. similar

7. congruent

8. congruent

9. neither

10. similar

11. neither

12. neither

13. similar

14. similar

15. neither

16. congruent