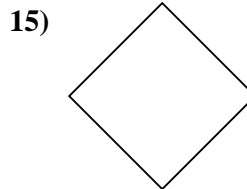
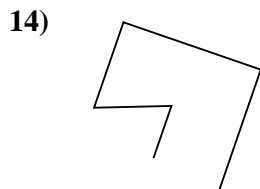
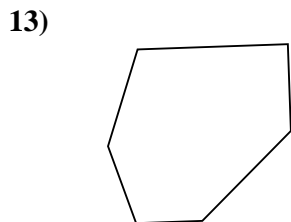
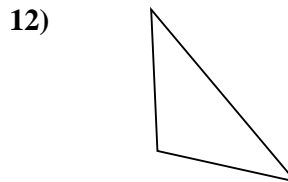
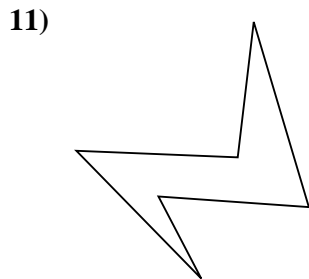
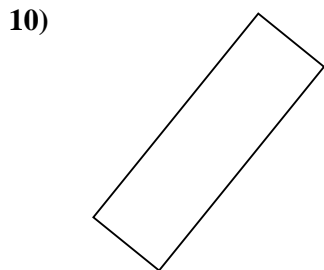
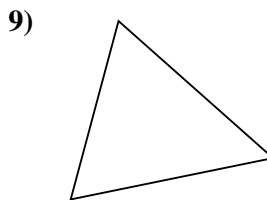
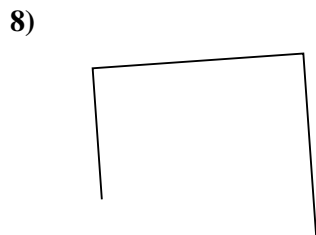
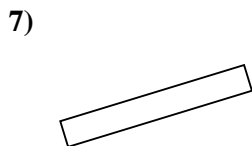
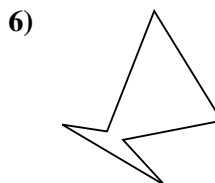
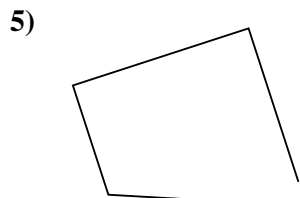
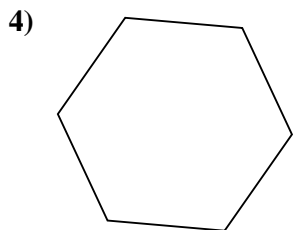
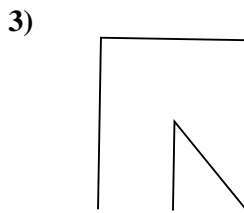
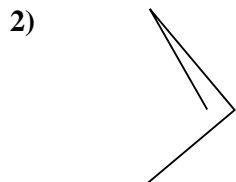
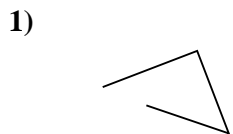




Determine if the figure shown is a 'Triangle', 'Square', 'Rectangle', 'Hexagon' or 'Other'.

Answers

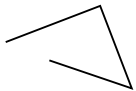


- 1. \_\_\_\_\_
- 2. \_\_\_\_\_
- 3. \_\_\_\_\_
- 4. \_\_\_\_\_
- 5. \_\_\_\_\_
- 6. \_\_\_\_\_
- 7. \_\_\_\_\_
- 8. \_\_\_\_\_
- 9. \_\_\_\_\_
- 10. \_\_\_\_\_
- 11. \_\_\_\_\_
- 12. \_\_\_\_\_
- 13. \_\_\_\_\_
- 14. \_\_\_\_\_
- 15. \_\_\_\_\_

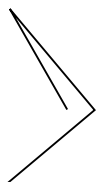


Determine if the figure shown is a 'Triangle', 'Square', 'Rectangle', 'Hexagon' or 'Other'.

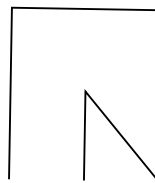
1)



2)



3)



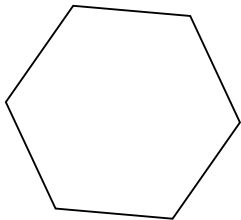
Answers

1. Other

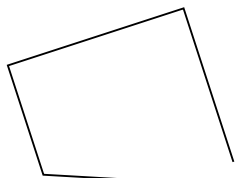
2. Other

3. Other

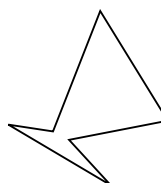
4)



5)



6)

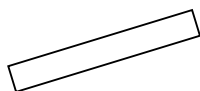


4. Hexagon

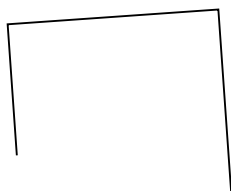
5. Other

6. Hexagon

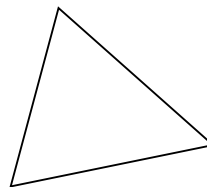
7)



8)



9)

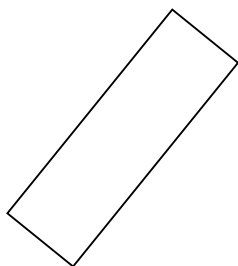


7. Rectangle


8. Other

9. Triangle

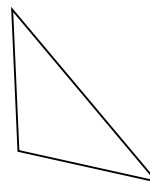
10)



11)



12)

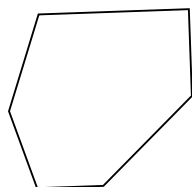


10. Rectangle

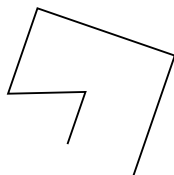
11. Hexagon

12. Triangle

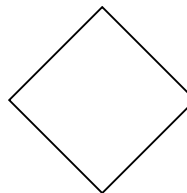
13)



14)



15)



13. Hexagon

14. Other

15. Square