



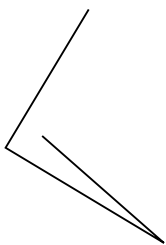
Determine if the figure shown is a 'Triangle', 'Square', 'Rectangle', 'Hexagon' or 'Other'.

Answers

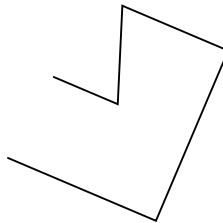
1)



2)



3)

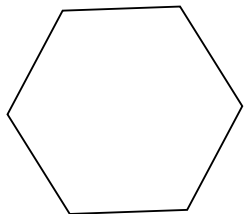


1. _____

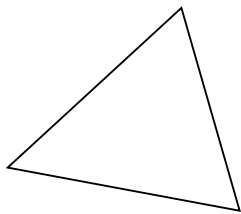
2. _____

3. _____

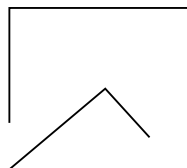
4)



5)



6)

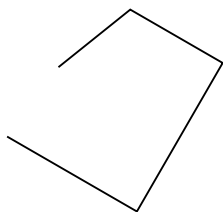


4. _____

5. _____

6. _____

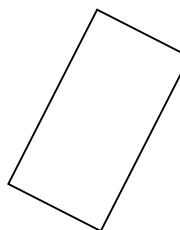
7)



8)



9)



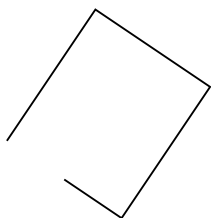
7. _____

8. _____


9. _____

10. _____

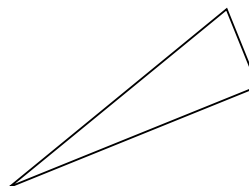
10)



11)



12)



11. _____

12. _____

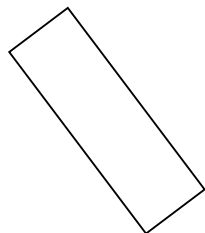
13. _____

14. _____


13)



14)



15)



15. _____

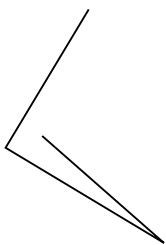


Determine if the figure shown is a 'Triangle', 'Square', 'Rectangle', 'Hexagon' or 'Other'.

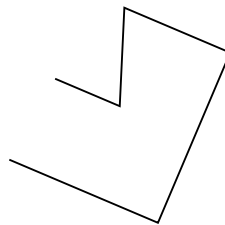
1)



2)



3)



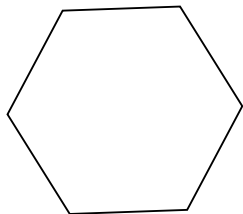
Answers

1. Other

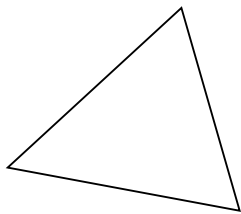
2. Other

3. Other

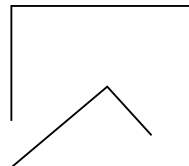
4)



5)



6)

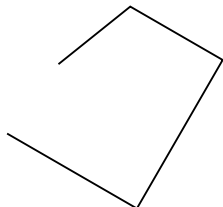


4. Hexagon

5. Triangle

6. Other

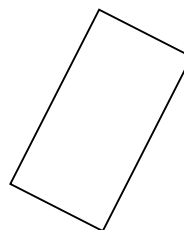
7)



8)



9)

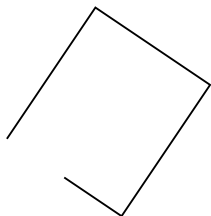


7. Other


8. Triangle

9. Rectangle

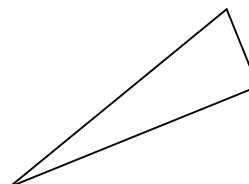
10)



11)



12)



10. Other

11. Triangle

12. Triangle

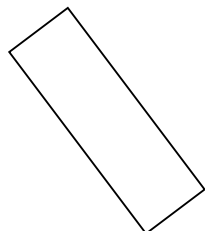
13. Rectangle

14. Rectangle


13)



14)



15)



15. Other