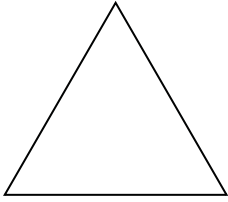


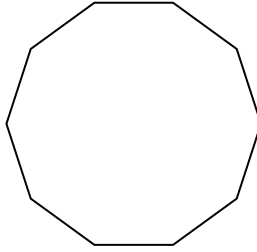


Identifying the type of shape shown.

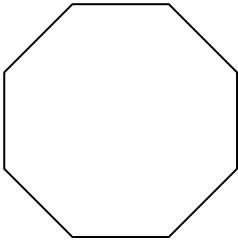
1)



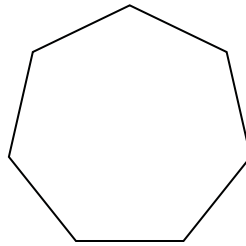
2)



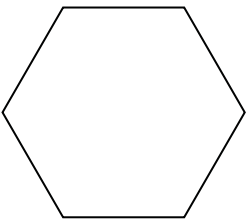
3)



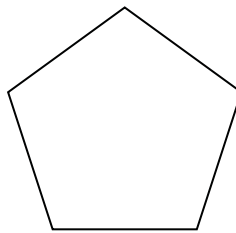
4)



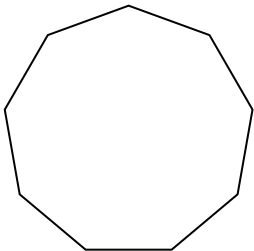
5)




6)



7)



8)



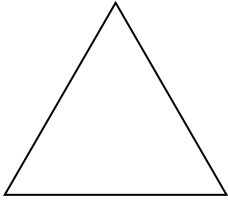
Answers

- 1. _____
- 2. _____
- 3. _____
- 4. _____
- 5. _____
- 6. _____
- 7. _____
- 8. _____

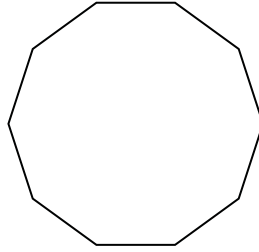


Identifying the type of shape shown.

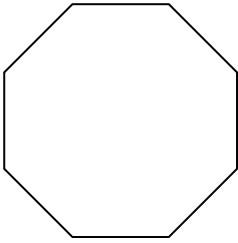
1)



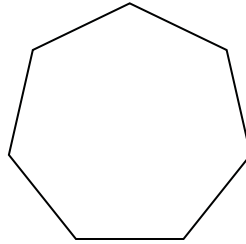
2)



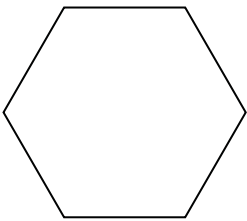
3)



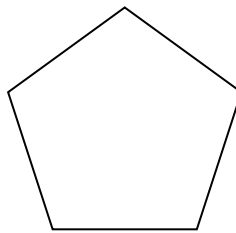
4)



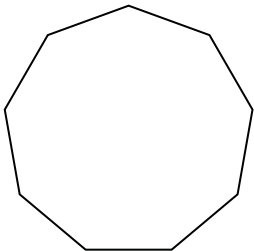
5)




6)



7)



8)



Answers

- 1. triangle
- 2. decagon
- 3. octagon
- 4. heptagon
- 5. hexagon
- 6. pentagon
- 7. nonagon
- 8. quadrilateral