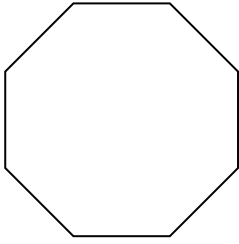


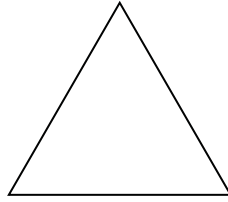


Identifying the type of shape shown.

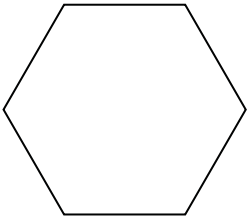
1)



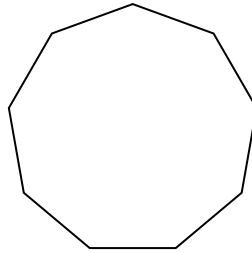
2)



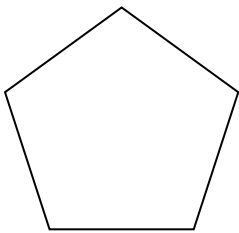
3)



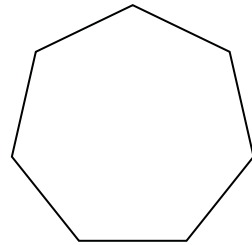
4)




5)



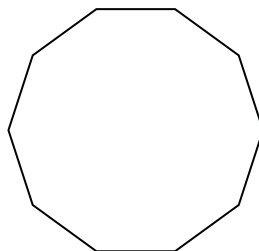
6)



7)



8)



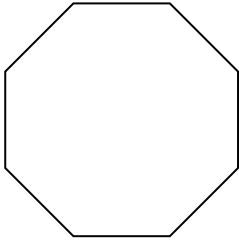
Answers

- 1. _____
- 2. _____
- 3. _____
- 4. _____
- 5. _____
- 6. _____
- 7. _____
- 8. _____

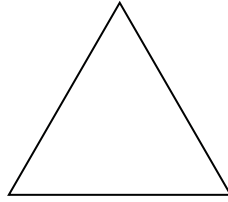


Identifying the type of shape shown.

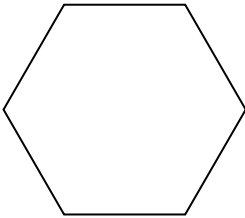
1)



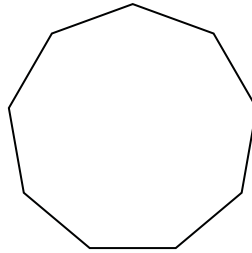
2)



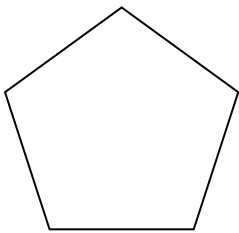
3)



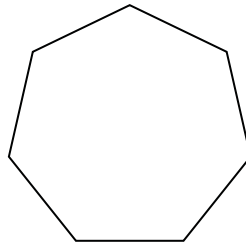
4)




5)



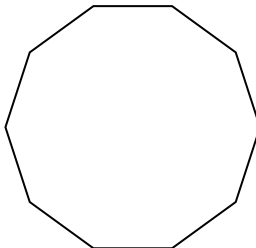
6)



7)



8)



Answers

- 1. octagon
- 2. triangle
- 3. hexagon
- 4. nonagon
- 5. pentagon
- 6. heptagon
- 7. quadrilateral
- 8. decagon