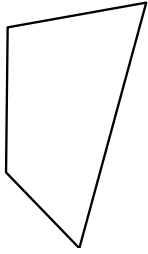




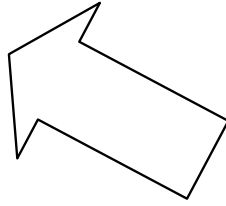
Identify the type of shape shown.

Answers

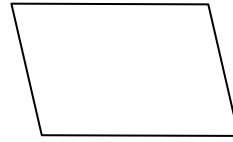
1)



2)



3)



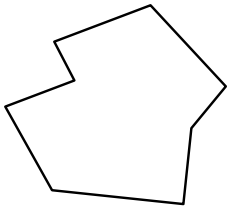
1. _____

2. _____

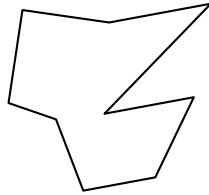
3. _____

4. _____

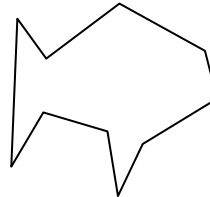
4)



5)



6)



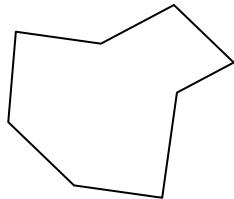
5. _____

6. _____

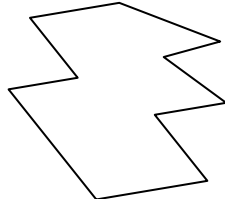
7. _____

8. _____

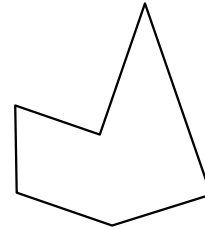
7)



8)



9)




9. _____

10. _____

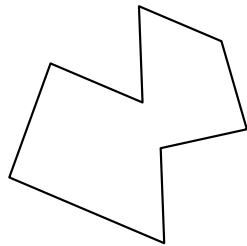
11. _____

12. _____

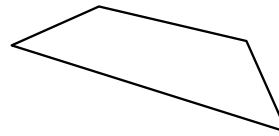
10)



11)



12)

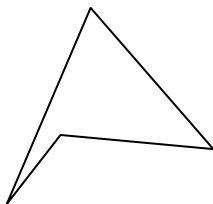


13. _____

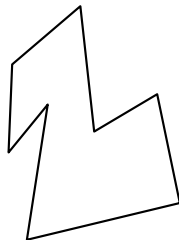
14. _____

15. _____

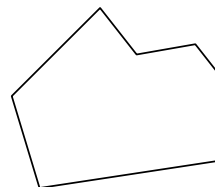
13)



14)



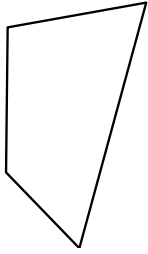
15)



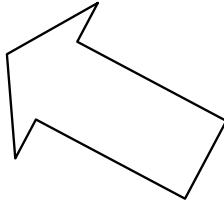


Identify the type of shape shown.

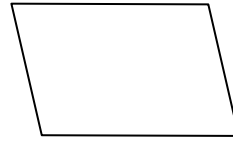
1)



2)



3)



Answers

1. quadrilateral

2. heptagon

3. quadrilateral

4. octagon

5. nonagon

6. decagon

7. octagon

8. decagon

9. hexagon

10. octagon

11. octagon

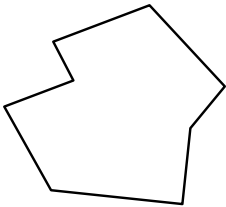
12. quadrilateral

13. quadrilateral

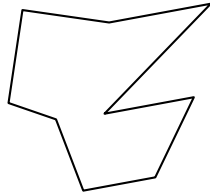
14. octagon

15. heptagon

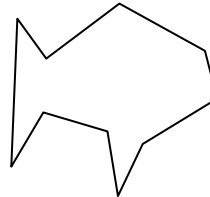
4)



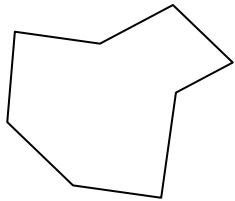
5)



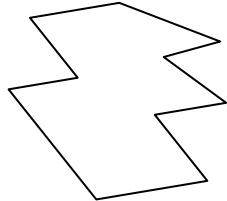
6)



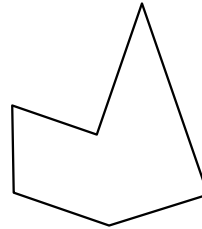
7)




8)



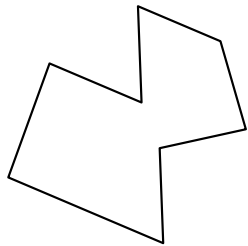
9)



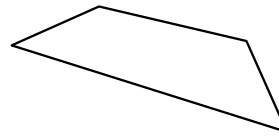
10)



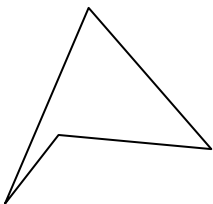
11)



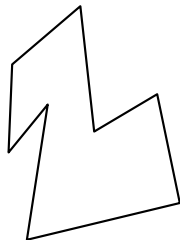
12)



13)



14)



15)

