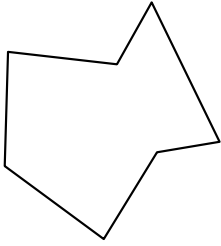




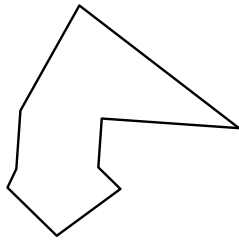
Identify the type of shape shown.

Answers

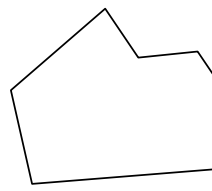
1)



2)



3)



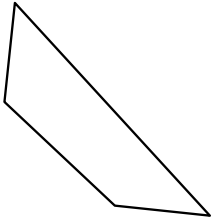
1. \_\_\_\_\_

2. \_\_\_\_\_

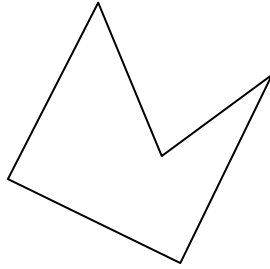
3. \_\_\_\_\_

4. \_\_\_\_\_

4)



5)



6)



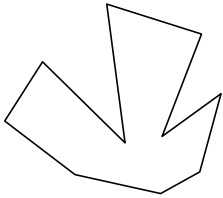
5. \_\_\_\_\_

6. \_\_\_\_\_

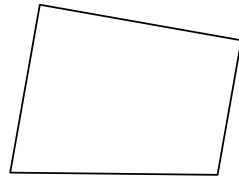
7. \_\_\_\_\_

8. \_\_\_\_\_

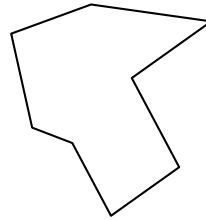
7)



8)



9)



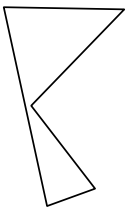
9. \_\_\_\_\_

10. \_\_\_\_\_

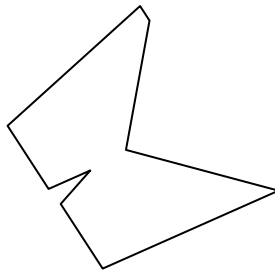
11. \_\_\_\_\_

12. \_\_\_\_\_

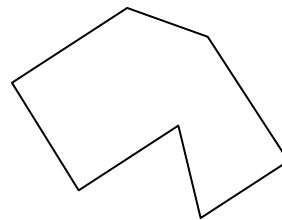
10)



11)



12)

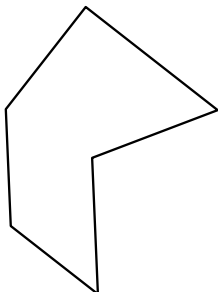


13. \_\_\_\_\_

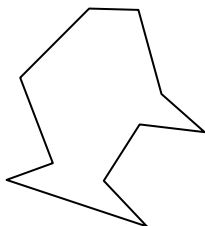
14. \_\_\_\_\_

15. \_\_\_\_\_

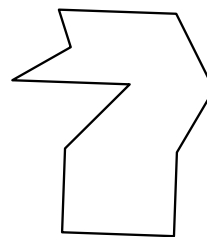
13)



14)

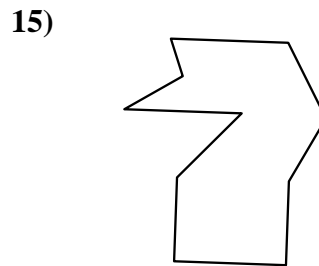
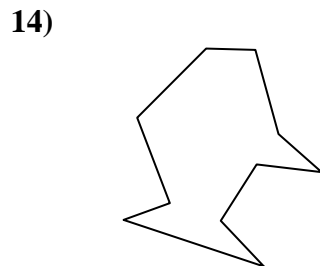
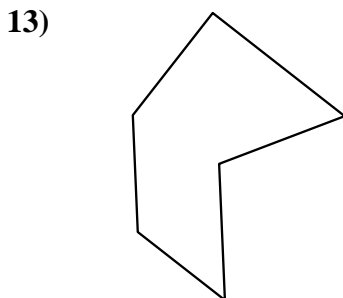
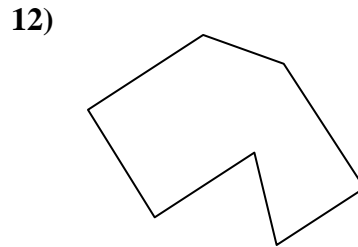
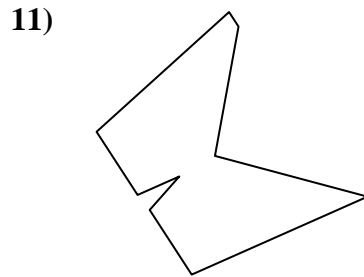
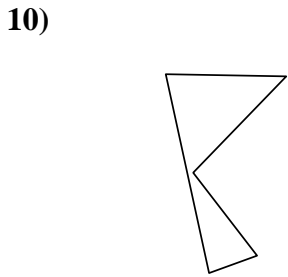
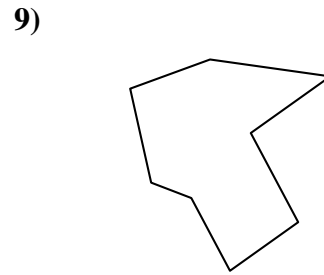
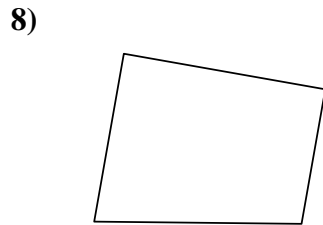
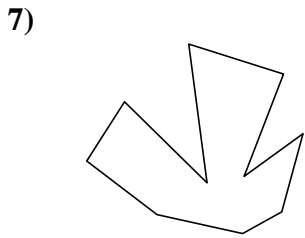
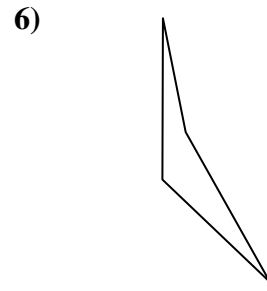
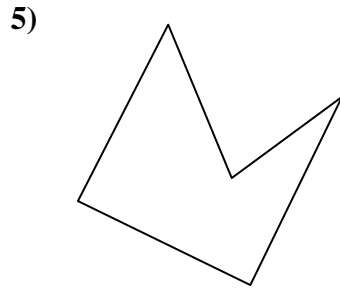
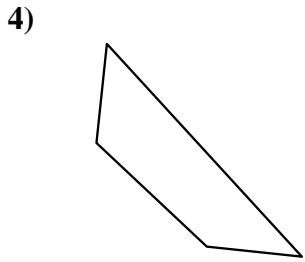
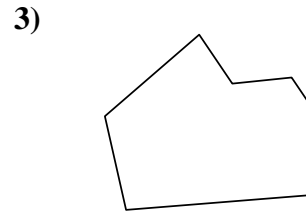
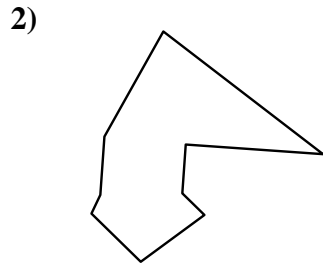
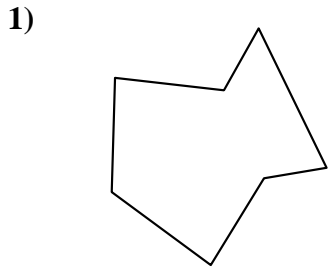


15)





Identify the type of shape shown.



Answers

1. heptagon

2. nonagon

3. heptagon

4. quadrilateral

5. pentagon

6. quadrilateral

7. decagon

8. quadrilateral

9. octagon

10. pentagon

11. nonagon

12. heptagon

13. hexagon

14. decagon

15. decagon