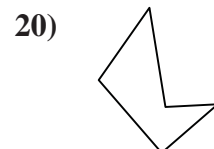
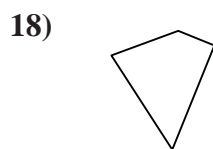
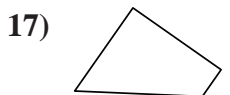
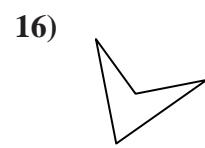
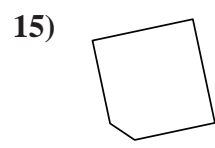
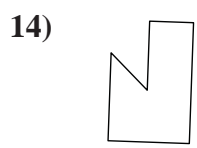
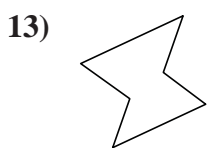
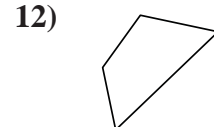
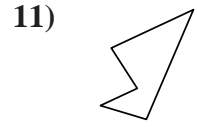
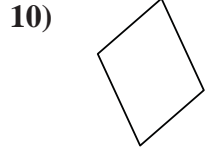
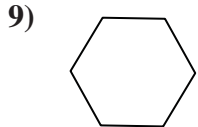
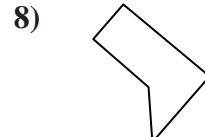
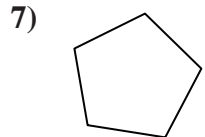
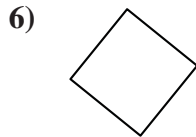
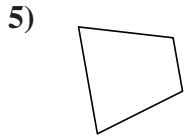
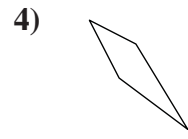
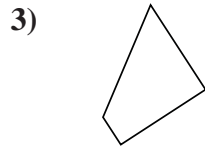
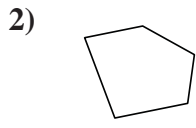
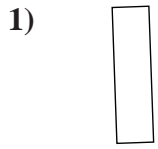




Determine if the shape shown is a quadrilateral (yes) or not (no).

Answers

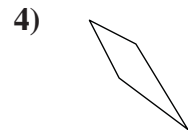
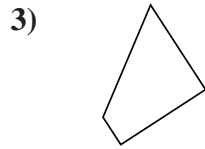
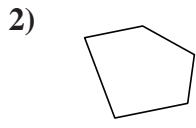
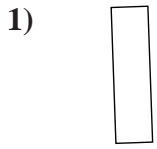


- 1. _____
- 2. _____
- 3. _____
- 4. _____
- 5. _____
- 6. _____
- 7. _____
- 8. _____
- 9. _____
- 10. _____
- 11. _____
- 12. _____
- 13. _____
- 14. _____
- 15. _____
- 16. _____
- 17. _____
- 18. _____
- 19. _____
- 20. _____



Determine if the shape shown is a quadrilateral (yes) or not (no).

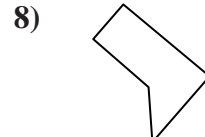
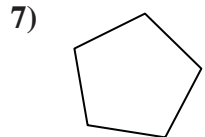
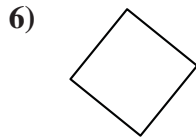
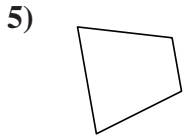
Answers



1. yes

2. no

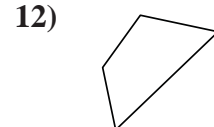
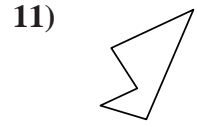
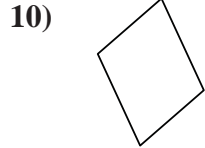
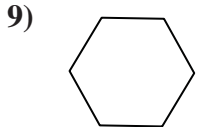
3. yes



4. yes

5. yes

6. yes



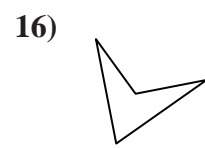
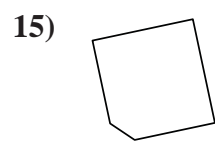
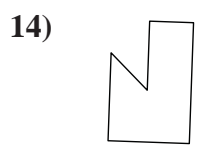
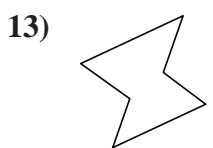
7. no

8. no

9. no

10. yes

11. no

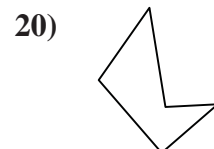
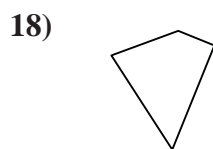
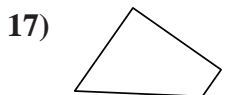


12. yes

13. no

14. no

15. no



16. yes

17. yes

18. yes

19. no

20. no