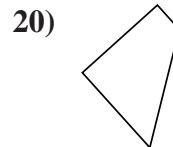
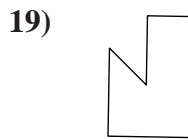
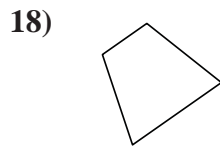
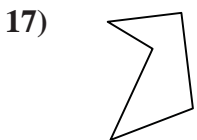
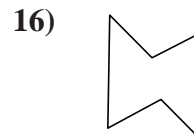
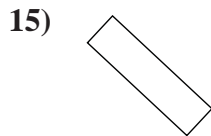
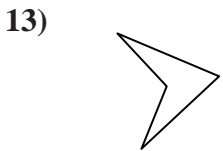
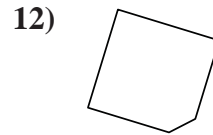
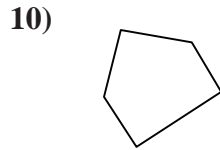
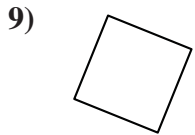
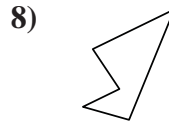
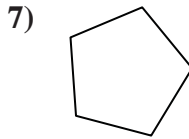
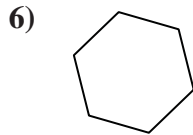
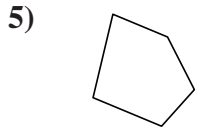
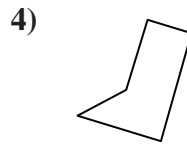
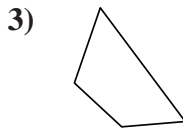
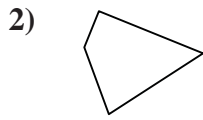
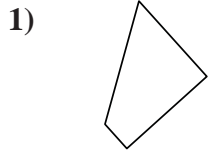




Determine if the shape shown is a quadrilateral (yes) or not (no).

Answers



1. \_\_\_\_\_

2. \_\_\_\_\_

3. \_\_\_\_\_

4. \_\_\_\_\_

5. \_\_\_\_\_

6. \_\_\_\_\_

7. \_\_\_\_\_

8. \_\_\_\_\_

9. \_\_\_\_\_

10. \_\_\_\_\_

11. \_\_\_\_\_

12. \_\_\_\_\_

13. \_\_\_\_\_

14. \_\_\_\_\_

15. \_\_\_\_\_

16. \_\_\_\_\_

17. \_\_\_\_\_

18. \_\_\_\_\_

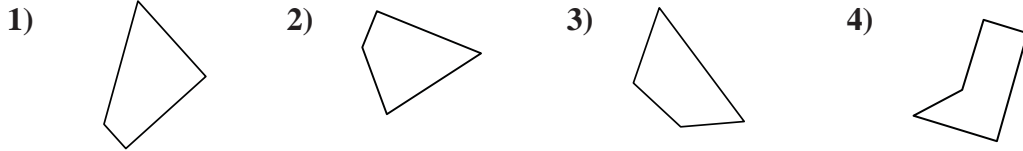
19. \_\_\_\_\_

20. \_\_\_\_\_



Determine if the shape shown is a quadrilateral (yes) or not (no).

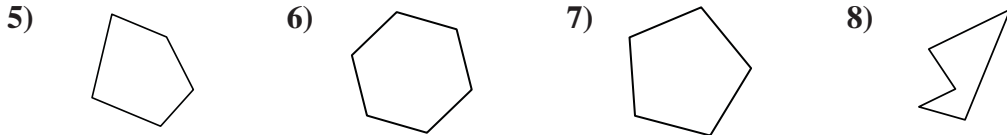
Answers



1. yes

2. yes

3. yes



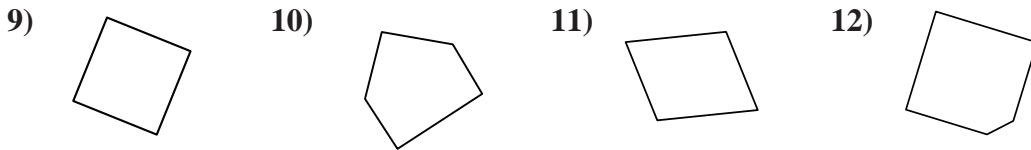
4. no

5. no

6. no

7. no

8. no

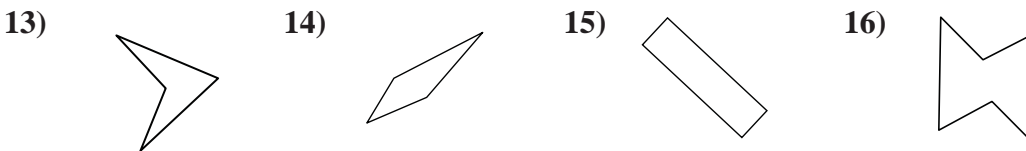


9. yes

10. no

11. yes

12. no

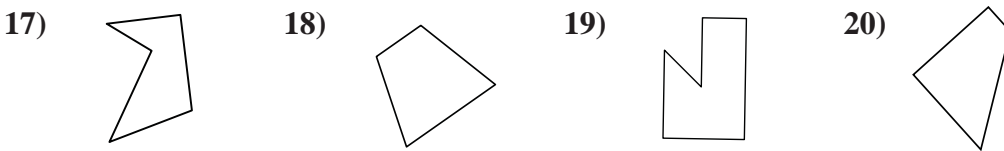


13. yes

14. yes

15. yes

16. no



17. no

18. yes

19. no

20. yes