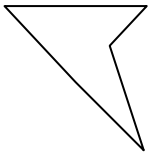




Determine which letter BEST represents the shapes that were used to create the figure shown.

Answers

1)



- A. A Square and a Quadrilateral
- B. A Triangle and a Triangle
- C. A Quadrilateral and a Hexagon
- D. A Hexagon and a Heptagon

2)



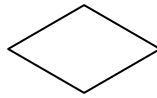
- A. A Quadrilateral and a Pentagon
- B. A Heptagon and an Octagon
- C. A Rectangle and a Heptagon
- D. A Quadrilateral and a Quadrilateral

3)



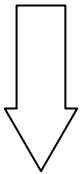
- A. A Quadrilateral and a Triangle
- B. A Square and a Rectangle
- C. A Pentagon and a Heptagon
- D. A Triangle and an Octagon

4)



- A. A Quadrilateral and a Heptagon
- B. A Quadrilateral and a Pentagon
- C. A Triangle and a Triangle
- D. A Triangle and a Square

5)




- A. A Rectangle and a Hexagon
- B. A Triangle and a Pentagon
- C. A Rectangle and a Triangle
- D. A Square and an Octagon

6)



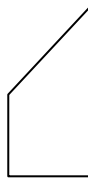
- A. A Quadrilateral and an Octagon
- B. A Triangle and a Quadrilateral
- C. A Triangle and a Pentagon
- D. A Triangle and a Heptagon

7)



- A. A Triangle and a Quadrilateral
- B. A Square and an Octagon
- C. A Square and a Heptagon
- D. A Square and a Hexagon

8)



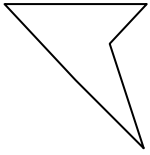
- A. A Rectangle and a Heptagon
- B. A Quadrilateral and a Heptagon
- C. A Rectangle and a Hexagon
- D. A Square and a Triangle

- 1. _____
- 2. _____
- 3. _____
- 4. _____
- 5. _____
- 6. _____
- 7. _____
- 8. _____



Determine which letter **BEST** represents the shapes that were used to create the figure shown.

1)



- A. A Square and a Quadrilateral
- B. A Triangle and a Triangle
- C. A Quadrilateral and a Hexagon
- D. A Hexagon and a Heptagon

2)



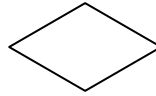
- A. A Quadrilateral and a Pentagon
- B. A Heptagon and an Octagon
- C. A Rectangle and a Heptagon
- D. A Quadrilateral and a Quadrilateral

3)



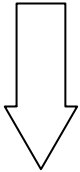
- A. A Quadrilateral and a Triangle
- B. A Square and a Rectangle
- C. A Pentagon and a Heptagon
- D. A Triangle and an Octagon

4)



- A. A Quadrilateral and a Heptagon
- B. A Quadrilateral and a Pentagon
- C. A Triangle and a Triangle
- D. A Triangle and a Square

5)




- A. A Rectangle and a Hexagon
- B. A Triangle and a Pentagon
- C. A Rectangle and a Triangle
- D. A Square and an Octagon

6)



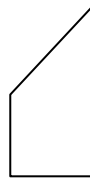
- A. A Quadrilateral and an Octagon
- B. A Triangle and a Quadrilateral
- C. A Triangle and a Pentagon
- D. A Triangle and a Heptagon

7)



- A. A Triangle and a Quadrilateral
- B. A Square and an Octagon
- C. A Square and a Heptagon
- D. A Square and a Hexagon

8)



- A. A Rectangle and a Heptagon
- B. A Quadrilateral and a Heptagon
- C. A Rectangle and a Hexagon
- D. A Square and a Triangle

Answers

- 1. **B**
- 2. **D**
- 3. **A**
- 4. **C**
- 5. **C**
- 6. **B**
- 7. **A**
- 8. **D**