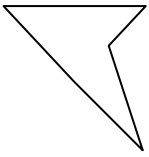




Determine which letter BEST represents the shapes that were used to create the figure shown.

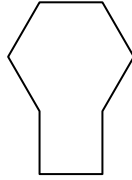
Answers

1)



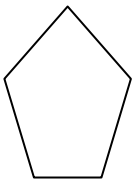
- A. A Square and a Heptagon
- B. A Rectangle and a Quadrilateral
- C. A Triangle and a Triangle
- D. A Hexagon and a Heptagon

2)



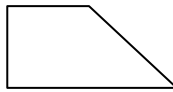
- A. A Quadrilateral and an Octagon
- B. A Triangle and a Quadrilateral
- C. A Rectangle and a Hexagon
- D. A Triangle and a Heptagon

3)



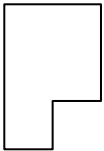
- A. A Triangle and a Hexagon
- B. A Triangle and a Quadrilateral
- C. A Triangle and a Rectangle
- D. A Pentagon and a Heptagon

4)



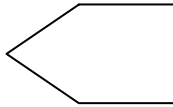
- A. A Triangle and a Square
- B. A Square and a Heptagon
- C. A Rectangle and a Pentagon
- D. A Triangle and a Heptagon

5)



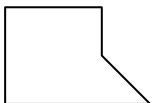
- A. A Quadrilateral and a Quadrilateral
- B. A Triangle and a Hexagon
- C. A Quadrilateral and a Hexagon
- D. A Triangle and an Octagon

6)



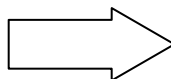
- A. A Pentagon and an Octagon
- B. A Triangle and a Quadrilateral
- C. A Rectangle and a Quadrilateral
- D. A Quadrilateral and a Hexagon

7)



- A. A Triangle and an Octagon
- B. A Hexagon and an Octagon
- C. A Square and a Rectangle
- D. A Triangle and a Square

8)

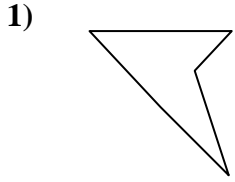


- A. A Triangle and a Hexagon
- B. A Pentagon and an Octagon
- C. A Rectangle and a Hexagon
- D. A Triangle and a Quadrilateral

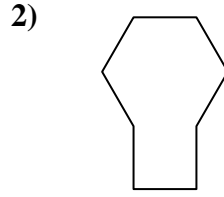
- 1. _____
- 2. _____
- 3. _____
- 4. _____
- 5. _____
- 6. _____
- 7. _____
- 8. _____



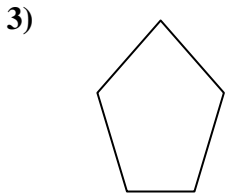
Determine which letter **BEST** represents the shapes that were used to create the figure shown.



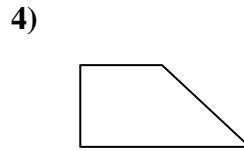
- A. A Square and a Heptagon
- B. A Rectangle and a Quadrilateral
- C. A Triangle and a Triangle
- D. A Hexagon and a Heptagon



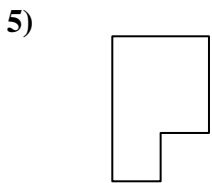
- A. A Quadrilateral and an Octagon
- B. A Triangle and a Quadrilateral
- C. A Rectangle and a Hexagon
- D. A Triangle and a Heptagon



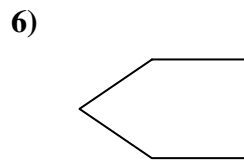
- A. A Triangle and a Hexagon
- B. A Triangle and a Quadrilateral
- C. A Triangle and a Rectangle
- D. A Pentagon and a Heptagon



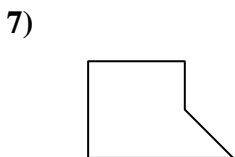
- A. A Triangle and a Square
- B. A Square and a Heptagon
- C. A Rectangle and a Pentagon
- D. A Triangle and a Heptagon



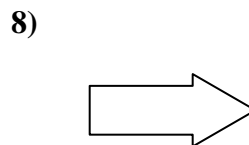
- A. A Quadrilateral and a Quadrilateral
- B. A Triangle and a Hexagon
- C. A Quadrilateral and a Hexagon
- D. A Triangle and an Octagon



- A. A Pentagon and an Octagon
- B. A Triangle and a Quadrilateral
- C. A Rectangle and a Quadrilateral
- D. A Quadrilateral and a Hexagon



- A. A Triangle and an Octagon
- B. A Hexagon and an Octagon
- C. A Square and a Rectangle
- D. A Triangle and a Square



- A. A Triangle and a Hexagon
- B. A Pentagon and an Octagon
- C. A Rectangle and a Hexagon
- D. A Triangle and a Quadrilateral

Answers

- 1. **C**
- 2. **C**
- 3. **B**
- 4. **A**
- 5. **A**
- 6. **B**
- 7. **D**
- 8. **D**