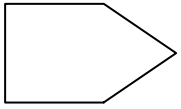




Determine which letter BEST represents the shapes that were used to create the figure shown.

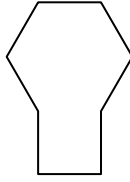
Answers

1)



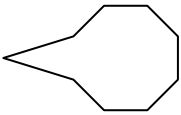
- A. A Rectangle and a Pentagon
- B. A Square and an Octagon
- C. A Pentagon and a Hexagon
- D. A Rectangle and a Triangle

2)




- A. A Square and a Hexagon
- B. A Quadrilateral and an Octagon
- C. A Square and an Octagon
- D. A Pentagon and an Octagon

3)



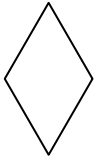
- A. A Triangle and an Octagon
- B. A Heptagon and an Octagon
- C. A Triangle and a Square
- D. A Rectangle and a Hexagon

4)



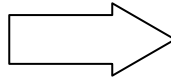
- A. A Square and a Hexagon
- B. A Triangle and a Square
- C. A Rectangle and a Triangle
- D. A Quadrilateral and a Heptagon

5)



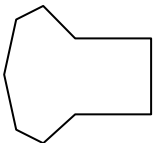
- A. A Triangle and a Triangle
- B. A Triangle and an Octagon
- C. A Rectangle and a Hexagon
- D. A Rectangle and a Pentagon

6)



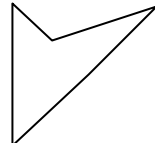
- A. A Hexagon and a Heptagon
- B. A Square and a Rectangle
- C. A Square and a Hexagon
- D. A Triangle and a Rectangle

7)



- A. A Quadrilateral and an Octagon
- B. A Quadrilateral and a Heptagon
- C. A Square and a Quadrilateral
- D. A Rectangle and a Quadrilateral

8)



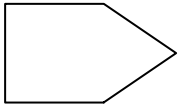
- A. A Triangle and a Hexagon
- B. A Rectangle and a Quadrilateral
- C. A Hexagon and an Octagon
- D. A Triangle and a Triangle

- 1. _____
- 2. _____
- 3. _____
- 4. _____
- 5. _____
- 6. _____
- 7. _____
- 8. _____



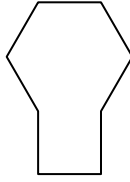
Determine which letter **BEST** represents the shapes that were used to create the figure shown.

1)



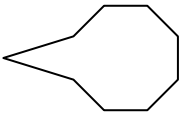
- A. A Rectangle and a Pentagon
- B. A Square and an Octagon
- C. A Pentagon and a Hexagon
- D. A Rectangle and a Triangle

2)




- A. A Square and a Hexagon
- B. A Quadrilateral and an Octagon
- C. A Square and an Octagon
- D. A Pentagon and an Octagon

3)



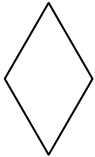
- A. A Triangle and an Octagon
- B. A Heptagon and an Octagon
- C. A Triangle and a Square
- D. A Rectangle and a Hexagon

4)



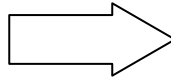
- A. A Square and a Hexagon
- B. A Triangle and a Square
- C. A Rectangle and a Triangle
- D. A Quadrilateral and a Heptagon

5)



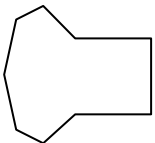
- A. A Triangle and a Triangle
- B. A Triangle and an Octagon
- C. A Rectangle and a Hexagon
- D. A Rectangle and a Pentagon

6)



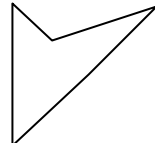
- A. A Hexagon and a Heptagon
- B. A Square and a Rectangle
- C. A Square and a Hexagon
- D. A Triangle and a Rectangle

7)



- A. A Quadrilateral and an Octagon
- B. A Quadrilateral and a Heptagon
- C. A Square and a Quadrilateral
- D. A Rectangle and a Quadrilateral

8)



- A. A Triangle and a Hexagon
- B. A Rectangle and a Quadrilateral
- C. A Hexagon and an Octagon
- D. A Triangle and a Triangle

Answers

- 1. **D**
- 2. **A**
- 3. **A**
- 4. **C**
- 5. **A**
- 6. **D**
- 7. **B**
- 8. **D**