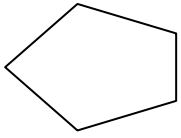




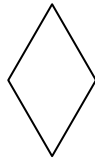
Determine which letter BEST represents the shapes that were used to create the figure shown.

1)



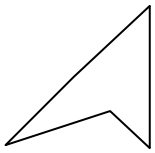
- A. A Quadrilateral and a Heptagon
- B. A Pentagon and a Hexagon
- C. A Quadrilateral and a Triangle
- D. A Square and a Rectangle

2)



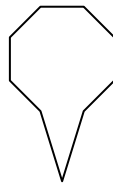
- A. A Triangle and an Octagon
- B. A Triangle and a Triangle
- C. A Pentagon and a Hexagon
- D. A Square and a Pentagon

3)



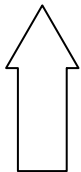
- A. A Triangle and a Triangle
- B. A Quadrilateral and a Hexagon
- C. A Rectangle and a Quadrilateral
- D. A Heptagon and an Octagon

4)



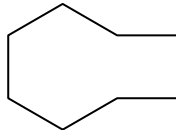
- A. An Octagon and a Triangle
- B. A Quadrilateral and a Hexagon
- C. A Triangle and a Quadrilateral
- D. A Triangle and a Rectangle

5)



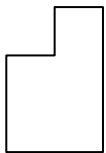
- A. A Quadrilateral and a Hexagon
- B. A Hexagon and an Octagon
- C. A Quadrilateral and a Triangle
- D. A Triangle and a Square

6)



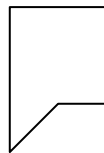
- A. A Pentagon and a Heptagon
- B. A Square and a Heptagon
- C. A Rectangle and a Hexagon
- D. A Square and a Pentagon

7)



- A. A Heptagon and an Octagon
- B. A Square and a Heptagon
- C. A Quadrilateral and a Quadrilateral
- D. A Triangle and a Pentagon

8)



- A. A Square and a Pentagon
- B. A Quadrilateral and a Triangle
- C. A Rectangle and a Quadrilateral
- D. A Square and a Heptagon

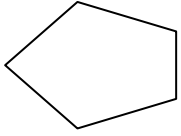
Answers

- 1. _____
- 2. _____
- 3. _____
- 4. _____
- 5. _____
- 6. _____
- 7. _____
- 8. _____



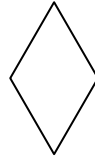
Determine which letter **BEST** represents the shapes that were used to create the figure shown.

1)



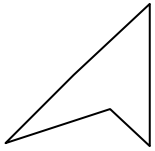
- A. A Quadrilateral and a Heptagon
- B. A Pentagon and a Hexagon
- C. A Quadrilateral and a Triangle
- D. A Square and a Rectangle

2)



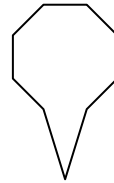
- A. A Triangle and an Octagon
- B. A Triangle and a Triangle
- C. A Pentagon and a Hexagon
- D. A Square and a Pentagon

3)



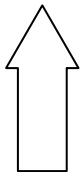
- A. A Triangle and a Triangle
- B. A Quadrilateral and a Hexagon
- C. A Rectangle and a Quadrilateral
- D. A Heptagon and an Octagon

4)



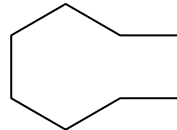
- A. An Octagon and a Triangle
- B. A Quadrilateral and a Hexagon
- C. A Triangle and a Quadrilateral
- D. A Triangle and a Rectangle

5)



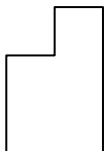
- A. A Quadrilateral and a Hexagon
- B. A Hexagon and an Octagon
- C. A Quadrilateral and a Triangle
- D. A Triangle and a Square

6)



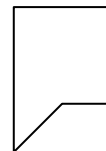
- A. A Pentagon and a Heptagon
- B. A Square and a Heptagon
- C. A Rectangle and a Hexagon
- D. A Square and a Pentagon

7)



- A. A Heptagon and an Octagon
- B. A Square and a Heptagon
- C. A Quadrilateral and a Quadrilateral
- D. A Triangle and a Pentagon

8)



- A. A Square and a Pentagon
- B. A Quadrilateral and a Triangle
- C. A Rectangle and a Quadrilateral
- D. A Square and a Heptagon

Answers

- 1. **C**
- 2. **B**
- 3. **A**
- 4. **A**
- 5. **C**
- 6. **C**
- 7. **C**
- 8. **B**