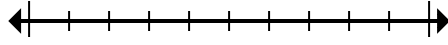




Mark the location (approximate) on the numberline and then solve.

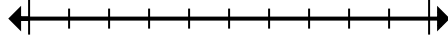
Answers

1) Round 2,529,571 to the nearest hundred.



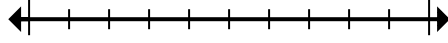
1. _____

2) Round 55,983 to the nearest ten thousand.



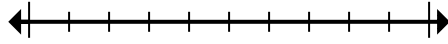
2. _____

3) Round 58,746 to the nearest thousand.



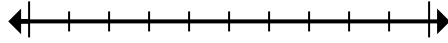
3. _____

4) Round 641,323 to the nearest hundred thousand.



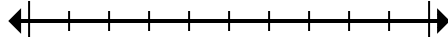
4. _____

5) Round 198 to the nearest hundred.



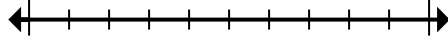
5. _____

6) Round 7,943,359 to the nearest ten thousand.



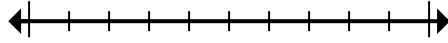
6. _____

7) Round 52,168 to the nearest ten thousand.



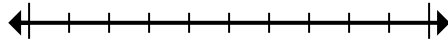
7. _____

8) Round 263 to the nearest hundred.



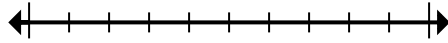
8. _____

9) Round 8,517,944 to the nearest hundred.



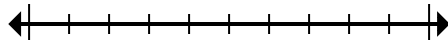
9. _____

10) Round 3,159 to the nearest thousand.



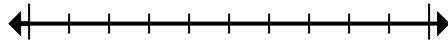
10. _____

11) Round 840,313 to the nearest hundred thousand.



11. _____

12) Round 6,192,138 to the nearest hundred thousand.

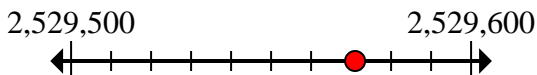


12. _____

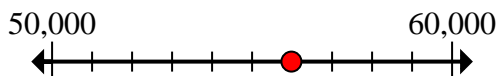


Mark the location (approximate) on the numberline and then solve.

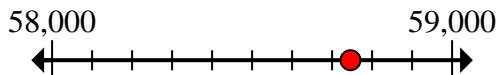
1) Round 2,529,571 to the nearest hundred.



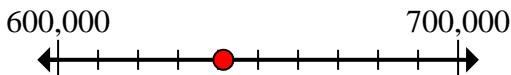
2) Round 55,983 to the nearest ten thousand.



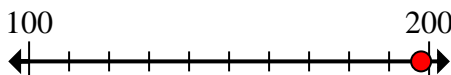
3) Round 58,746 to the nearest thousand.



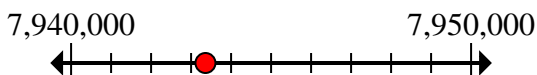
4) Round 641,323 to the nearest hundred thousand.



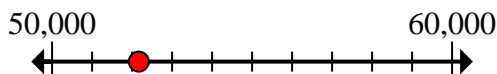
5) Round 198 to the nearest hundred.



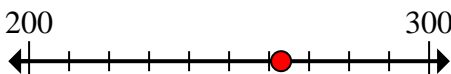
6) Round 7,943,359 to the nearest ten thousand.



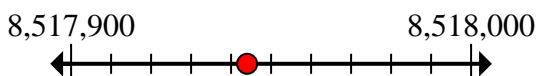
7) Round 52,168 to the nearest ten thousand.



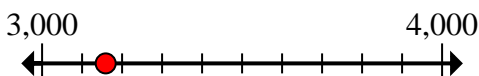
8) Round 263 to the nearest hundred.



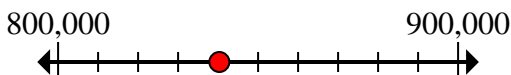
9) Round 8,517,944 to the nearest hundred.



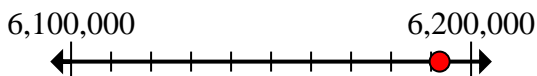
10) Round 3,159 to the nearest thousand.



11) Round 840,313 to the nearest hundred thousand.



12) Round 6,192,138 to the nearest hundred thousand.



Answers

1. **2,529,600**

2. **60,000**

3. **59,000**

4. **600,000**

5. **200**

6. **7,940,000**

7. **50,000**

8. **300**

9. **8,517,900**

10. **3,000**

11. **800,000**

12. **6,200,000**



Mark the location (approximate) on the numberline and then solve.

Answers

1) Round 2,529,571 to the nearest hundred.	$2,529,500$ $2,529,600$ 	1. _____
2) Round 55,983 to the nearest ten thousand.	$50,000$ $60,000$ 	2. _____
3) Round 58,746 to the nearest thousand.	$58,000$ $59,000$ 	3. _____
4) Round 641,323 to the nearest hundred thousand.	$600,000$ $700,000$ 	4. _____
5) Round 198 to the nearest hundred.	100 200 	5. _____
6) Round 7,943,359 to the nearest ten thousand.	$7,940,000$ $7,950,000$ 	6. _____
7) Round 52,168 to the nearest ten thousand.	$50,000$ $60,000$ 	7. _____
8) Round 263 to the nearest hundred.	200 300 	8. _____
9) Round 8,517,944 to the nearest hundred.	$8,517,900$ $8,518,000$ 	9. _____
10) Round 3,159 to the nearest thousand.	$3,000$ $4,000$ 	10. _____
11) Round 840,313 to the nearest hundred thousand.	$800,000$ $900,000$ 	11. _____
12) Round 6,192,138 to the nearest hundred thousand.	$6,100,000$ $6,200,000$ 	12. _____