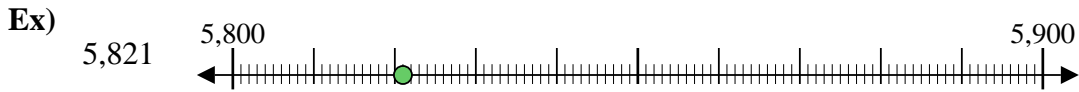




Use the numberlines to round each number to the nearest 100.

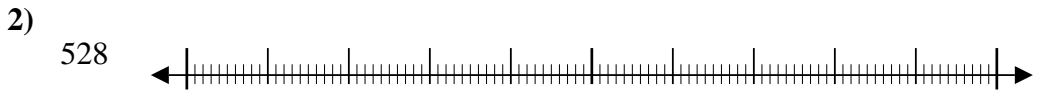


**Answers**

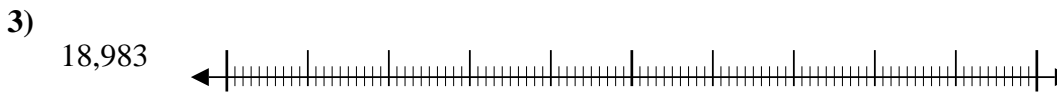
Ex. 5,800



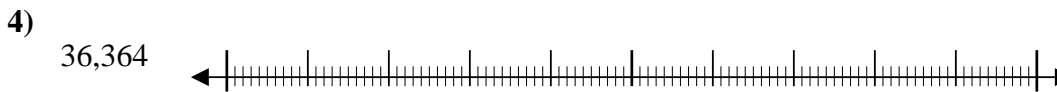
1. \_\_\_\_\_



2. \_\_\_\_\_



3. \_\_\_\_\_



4. \_\_\_\_\_




5. \_\_\_\_\_



6. \_\_\_\_\_




7. \_\_\_\_\_



8. \_\_\_\_\_



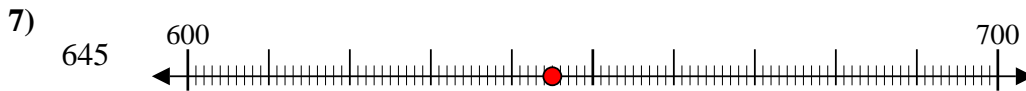
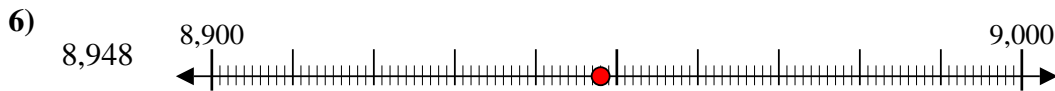
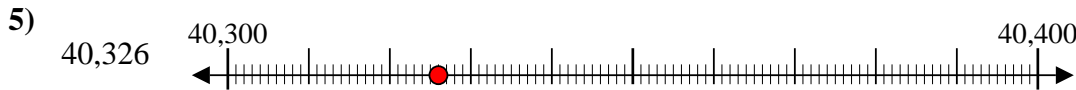
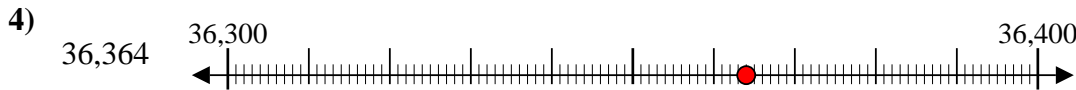
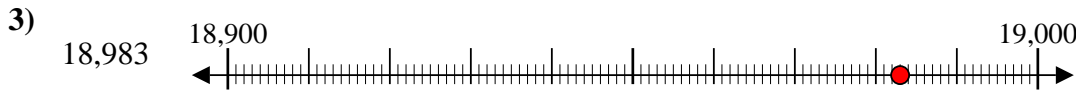
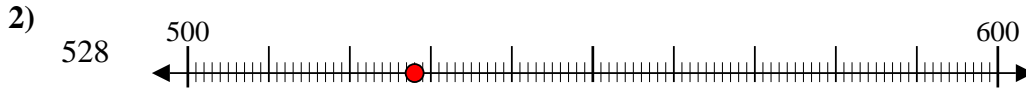
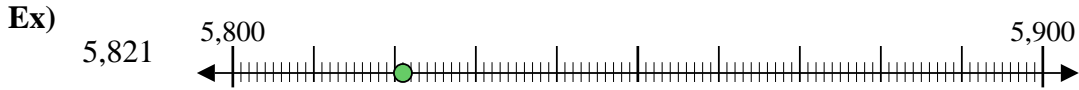
9. \_\_\_\_\_



10. \_\_\_\_\_



Use the numberlines to round each number to the nearest 100.



Answers

Ex. 5,800

1. 14,100

2. 500

3. 19,000

4. 36,400

5. 40,300

6. 8,900

7. 600

8. 700

9. 2,900

10. 500