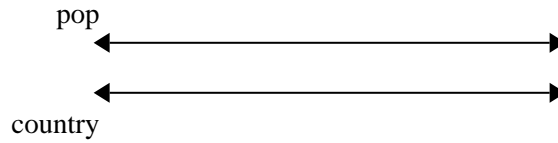




Use the double numberline to solve the problems.

Answers

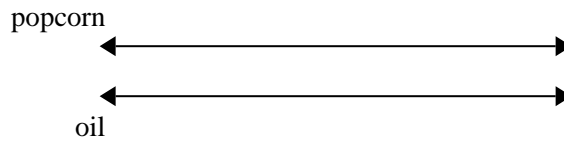
- 1) On her MP3 player for every 9 pop song %GIRL had she also had 7 country song. If she has 54 pop songs on her MP3 player, how many country songs does she have?



1. _____

2. _____

- 2) A movie theater put 8 cups of oil for every 2 batches of popcorn they made. After they had made 8 batches of popcorn, how much oil would they have used?

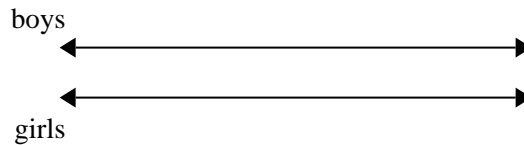


3. _____

4. _____

5. _____

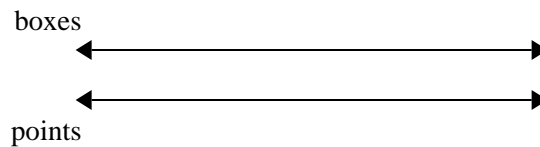
- 3) The ratio of boys to girls at the park was 5 to 10. If there were 35 boys, how many girls were there?



6. _____

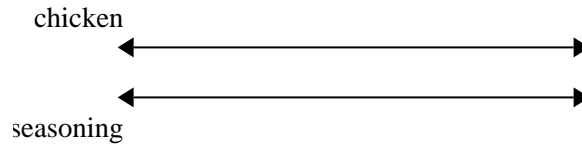
7. _____

- 4) At a school fundraiser for every 7 boxes of chocolate sold you earn 9 points. If you were to sell 49 boxes, how many points would you have earned?

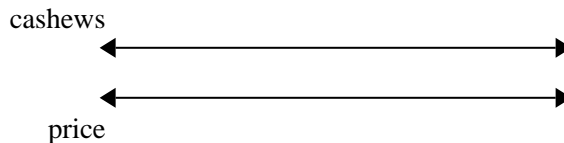


8. _____

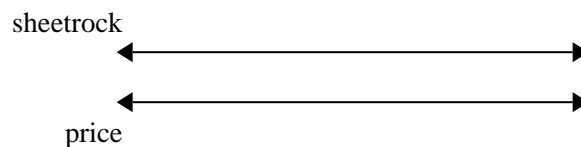
- 5) A recipe call for 5 teaspoons of seasoning for every 9 batches of chicken. If you have 81 batches of chicken, how many teaspoons of seasoning will you need?




- 6) A store had a sale where you could get 10 bags of cashews for \$9. If you wanted to buy 100 bags, how much would it cost?



- 7) A builder could get 10 sheets of sheetrock for \$2. If he bought 40 sheets, how much money would he have spent?



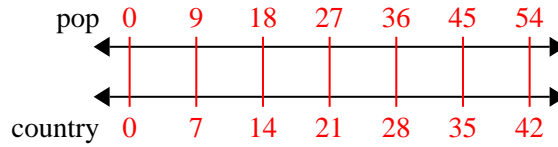
- 8) A box of candy had 9 cherry pieces for every 5 lemon pieces. If the box had 25 lemon pieces, how many cherry pieces would there be?



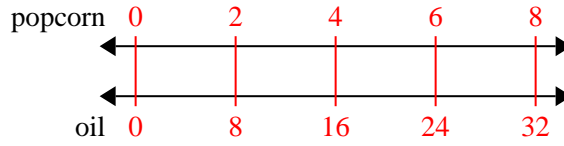


Use the double numberline to solve the problems.

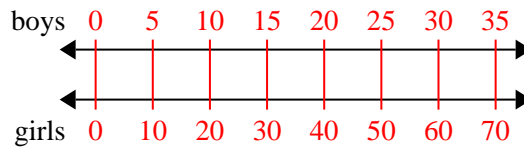
- 1) On her MP3 player for every 9 pop song %GIRL had she also had 7 country song. If she has 54 pop songs on her MP3 player, how many country songs does she have?



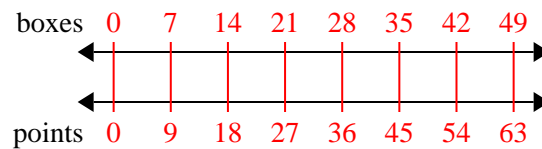
- 2) A movie theater put 8 cups of oil for every 2 batches of popcorn they made. After they had made 8 batches of popcorn, how much oil would they have used?



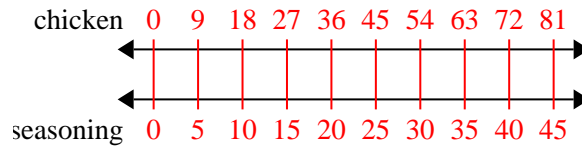
- 3) The ratio of boys to girls at the park was 5 to 10. If there were 35 boys, how many girls were there?



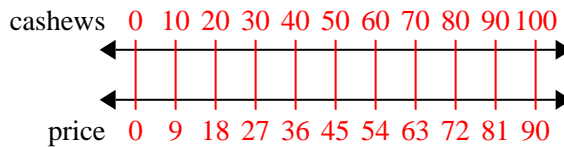
- 4) At a school fundraiser for every 7 boxes of chocolate sold you earn 9 points. If you were to sell 49 boxes, how many points would you have earned?



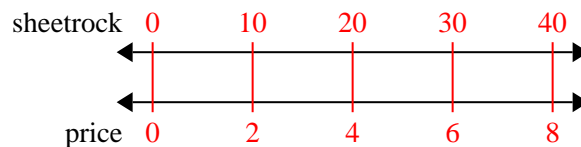
- 5) A recipe call for 5 teaspoons of seasoning for every 9 batches of chicken. If you have 81 batches of chicken, how many teaspoons of seasoning will you need?



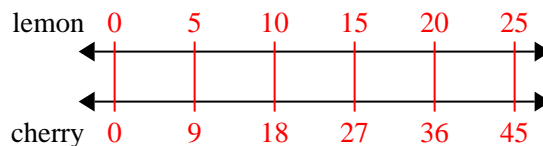
- 6) A store had a sale where you could get 10 bags of cashews for \$9. If you wanted to buy 100 bags, how much would it cost?



- 7) A builder could get 10 sheets of sheetrock for \$2. If he bought 40 sheets, how much money would he have spent?



- 8) A box of candy had 9 cherry pieces for every 5 lemon pieces. If the box had 25 lemon pieces, how many cherry pieces would there be?

Answers

1. 42
2. 32
3. 70
4. 63
5. 45
6. 90
7. 8
8. 45