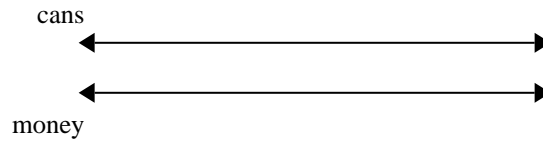




Use the double numberline to solve the problems.

Answers

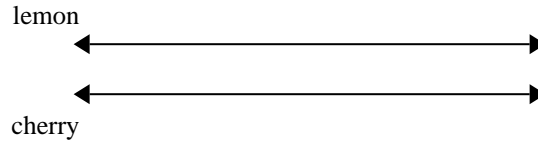
- 1) For every 6 cans Tom collected for recycling he earned 9 cents. After he collected 42 cans, how much money would he have earned?



1. _____

2. _____

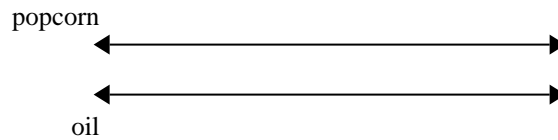
- 2) A box of candy had 4 cherry pieces for every 5 lemon pieces. If the box had 40 lemon pieces, how many cherry pieces would there be?



3. _____

4. _____

- 3) A movie theater put 5 cups of oil for every 4 batches of popcorn they made. After they had made 40 batches of popcorn, how much oil would they have used?

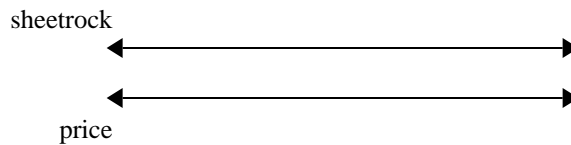


5. _____

6. _____

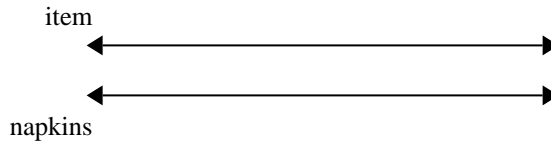
7. _____

- 4) A builder could get 10 sheets of sheetrock for \$8. If he bought 50 sheets, how much money would he have spent?

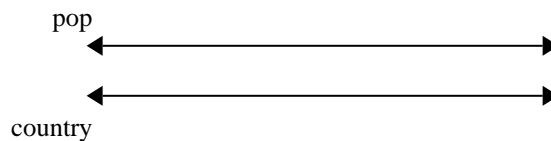


8. _____

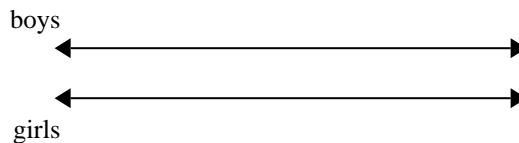
- 5) A sloppy joe restaurant gave 9 napkins for every 10 items ordered. If someone bought 60 items, how many napkins should they get?




- 6) On her MP3 player for every 6 pop song Tiffany had she also had 4 country song. If she has 36 pop songs on her MP3 player, how many country songs does she have?



- 7) The ratio of boys to girls at the park was 9 to 2. If there were 45 boys, how many girls were there?



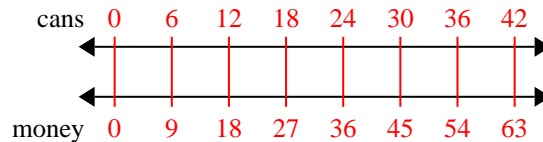
- 8) In a video game for every 2 enemies defeat, you earned 8 points. If you defeated 12 enemies, how many points would you have earned?



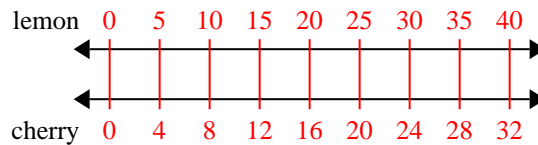


Use the double numberline to solve the problems.

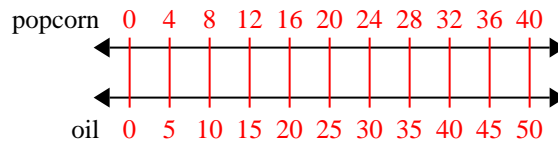
- 1) For every 6 cans Tom collected for recycling he earned 9 cents. After he collected 42 cans, how much money would he have earned?



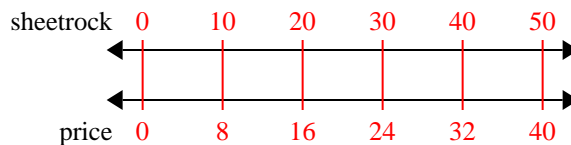
- 2) A box of candy had 4 cherry pieces for every 5 lemon pieces. If the box had 40 lemon pieces, how many cherry pieces would there be?



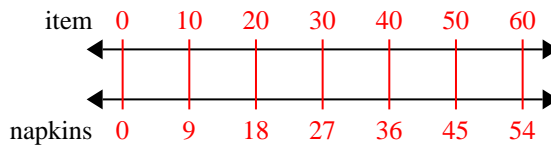
- 3) A movie theater put 5 cups of oil for every 4 batches of popcorn they made. After they had made 40 batches of popcorn, how much oil would they have used?



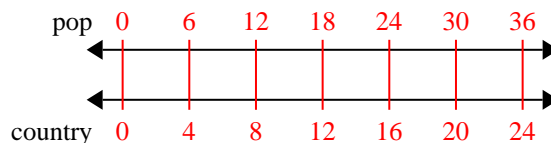
- 4) A builder could get 10 sheets of sheetrock for \$8. If he bought 50 sheets, how much money would he have spent?



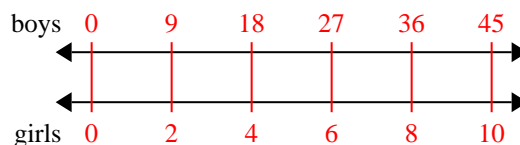
- 5) A sloppy joe restaurant gave 9 napkins for every 10 items ordered. If someone bought 60 items, how many napkins should they get?



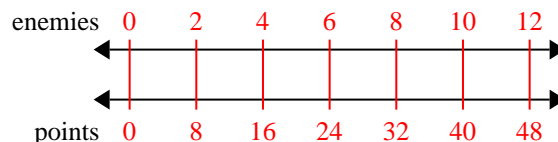
- 6) On her MP3 player for every 6 pop song Tiffany had she also had 4 country song. If she has 36 pop songs on her MP3 player, how many country songs does she have?



- 7) The ratio of boys to girls at the park was 9 to 2. If there were 45 boys, how many girls were there?



- 8) In a video game for every 2 enemies defeat, you earned 8 points. If you defeated 12 enemies, how many points would you have earned?

Answers1. **63**2. **32**3. **50**4. **40**5. **54**6. **24**7. **10**8. **48**