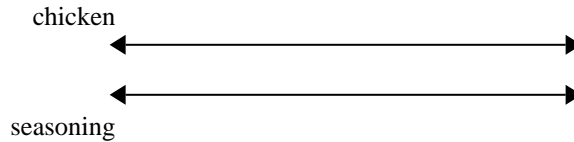




Use the double numberline to solve the problems.

Answers

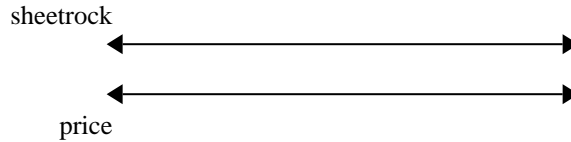
- 1) A recipe call for 6 teaspoons of seasoning for every 2 batches of chicken. If you have 14 batches of chicken, how many teaspoons of seasoning will you need?



1. _____

2. _____

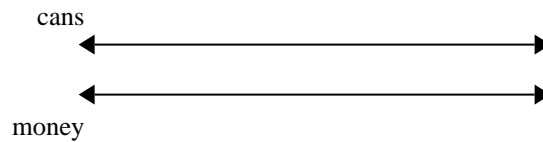
- 2) A builder could get 8 sheets of sheetrock for \$9. If he bought 48 sheets, how much money would he have spent?



3. _____

4. _____

- 3) For every 3 cans Ned collected for recycling he earned 8 cents. After he collected 18 cans, how much money would he have earned?

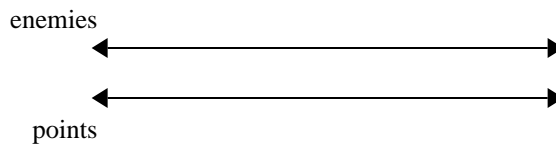


5. _____

6. _____

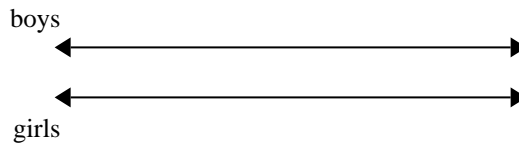
7. _____

- 4) In a video game for every 7 enemies defeat, you earned 4 points. If you defeated 56 enemies, how many points would you have earned?




8. _____

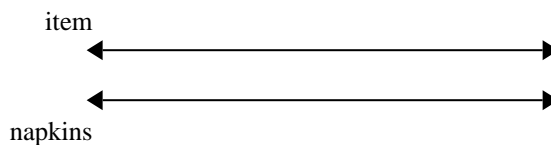
- 5) The ratio of boys to girls at the park was 4 to 3. If there were 16 boys, how many girls were there?




- 6) A movie theater put 6 cups of oil for every 4 batches of popcorn they made. After they had made 12 batches of popcorn, how much oil would they have used?



- 7) A sloppy joe restaurant gave 10 napkins for every 5 items ordered. If someone bought 35 items, how many napkins should they get?



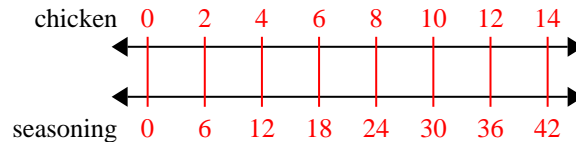
- 8) At a school fundraiser for every 10 boxes of chocolate sold you earn 4 points. If you were to sell 90 boxes, how many points would you have earned?



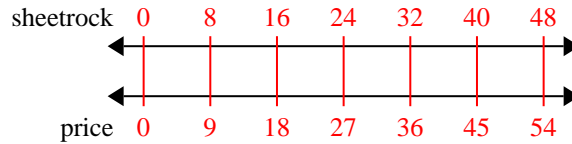


Use the double numberline to solve the problems.

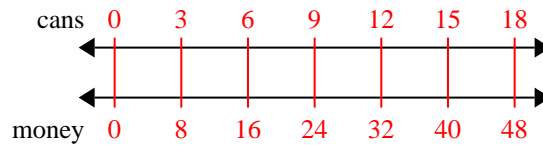
- 1) A recipe call for 6 teaspoons of seasoning for every 2 batches of chicken. If you have 14 batches of chicken, how many teaspoons of seasoning will you need?



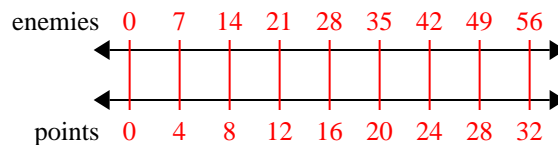
- 2) A builder could get 8 sheets of sheetrock for \$9. If he bought 48 sheets, how much money would he have spent?



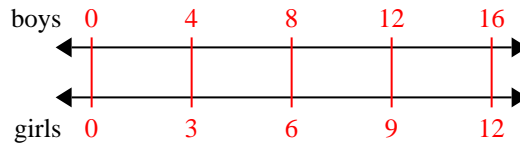
- 3) For every 3 cans Ned collected for recycling he earned 8 cents. After he collected 18 cans, how much money would he have earned?



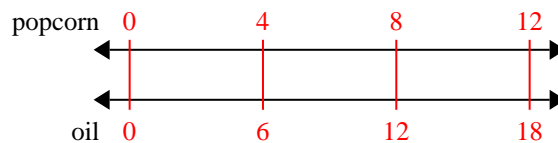
- 4) In a video game for every 7 enemies defeat, you earned 4 points. If you defeated 56 enemies, how many points would you have earned?



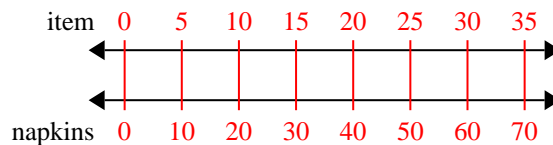
- 5) The ratio of boys to girls at the park was 4 to 3. If there were 16 boys, how many girls were there?



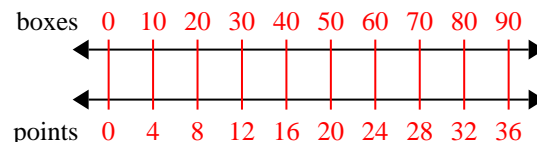
- 6) A movie theater put 6 cups of oil for every 4 batches of popcorn they made. After they had made 12 batches of popcorn, how much oil would they have used?



- 7) A sloppy joe restaurant gave 10 napkins for every 5 items ordered. If someone bought 35 items, how many napkins should they get?



- 8) At a school fundraiser for every 10 boxes of chocolate sold you earn 4 points. If you were to sell 90 boxes, how many points would you have earned?

Answers

1. 42
2. 54
3. 48
4. 32
5. 12
6. 18
7. 70
8. 36