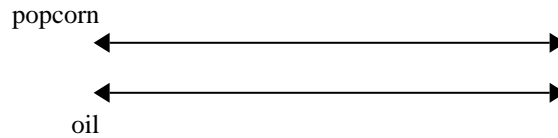




Use the double numberline to solve the problems.

Answers

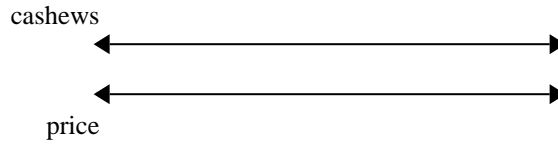
- 1) A movie theater put 4 cups of oil for every 2 batches of popcorn they made. After they had made 6 batches of popcorn, how much oil would they have used?



1. _____

2. _____

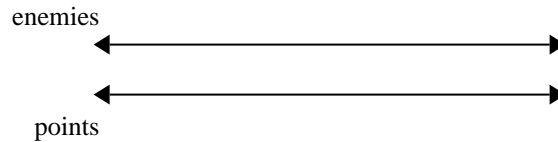
- 2) A store had a sale where you could get 6 bags of cashews for \$8. If you wanted to buy 60 bags, how much would it cost?



3. _____

4. _____

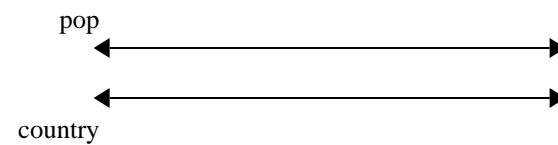
- 3) In a video game for every 7 enemies defeat, you earned 6 points. If you defeated 14 enemies, how many points would you have earned?



5. _____

6. _____

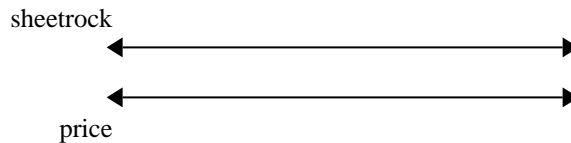
- 4) On her MP3 player for every 8 pop song Maria had she also had 10 country song. If she has 24 pop songs on her MP3 player, how many country songs does she have?



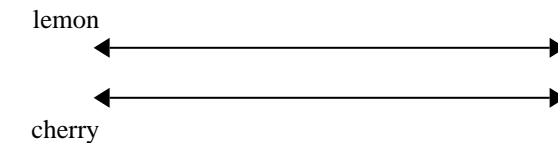
7. _____

8. _____

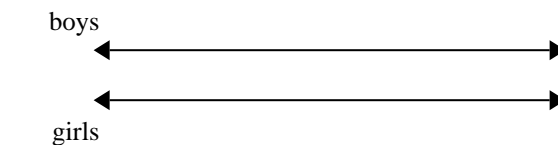
- 5) A builder could get 3 sheets of sheetrock for \$2. If he bought 15 sheets, how much money would he have spent?




- 6) A box of candy had 8 cherry pieces for every 3 lemon pieces. If the box had 30 lemon pieces, how many cherry pieces would there be?



- 7) The ratio of boys to girls at the park was 3 to 2. If there were 21 boys, how many girls were there?



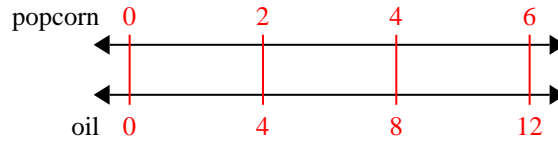
- 8) For every 7 cans Luke collected for recycling he earned 10 cents. After he collected 21 cans, how much money would he have earned?



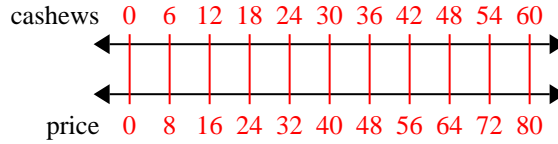


Use the double numberline to solve the problems.

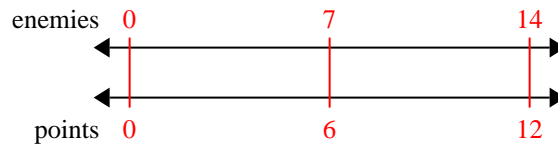
- 1) A movie theater put 4 cups of oil for every 2 batches of popcorn they made. After they had made 6 batches of popcorn, how much oil would they have used?



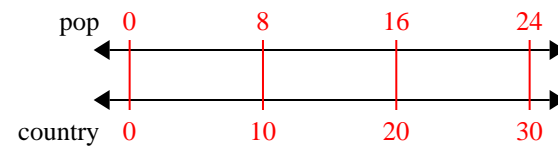
- 2) A store had a sale where you could get 6 bags of cashews for \$8. If you wanted to buy 60 bags, how much would it cost?



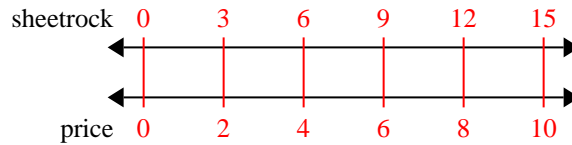
- 3) In a video game for every 7 enemies defeat, you earned 6 points. If you defeated 14 enemies, how many points would you have earned?



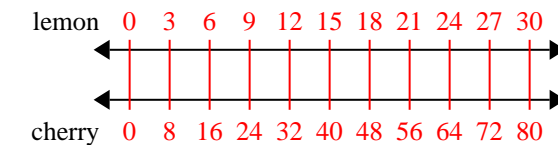
- 4) On her MP3 player for every 8 pop song Maria had she also had 10 country song. If she has 24 pop songs on her MP3 player, how many country songs does she have?



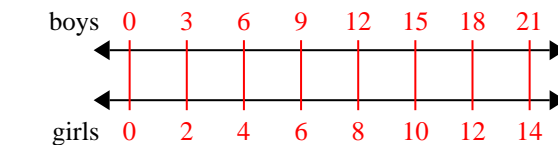
- 5) A builder could get 3 sheets of sheetrock for \$2. If he bought 15 sheets, how much money would he have spent?



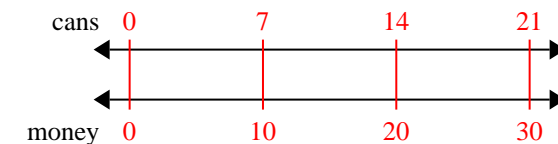
- 6) A box of candy had 8 cherry pieces for every 3 lemon pieces. If the box had 30 lemon pieces, how many cherry pieces would there be?



- 7) The ratio of boys to girls at the park was 3 to 2. If there were 21 boys, how many girls were there?



- 8) For every 7 cans Luke collected for recycling he earned 10 cents. After he collected 21 cans, how much money would he have earned?

**Answers**

1. 12
2. 80
3. 12
4. 30
5. 10
6. 80
7. 14
8. 30