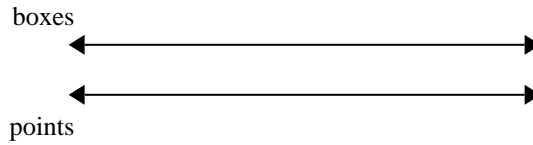




Use the double numberline to solve the problems.

Answers

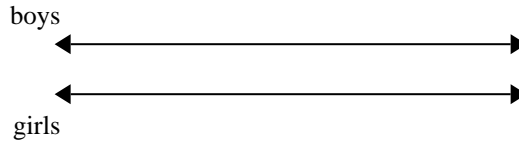
- 1) At a school fundraiser for every 3 boxes of chocolate sold you earn 7 points. If you were to sell 15 boxes, how many points would you have earned?



1. \_\_\_\_\_

2. \_\_\_\_\_

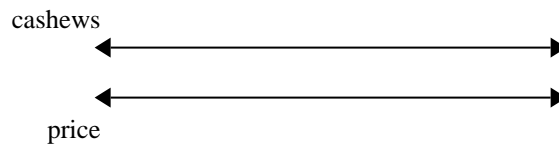
- 2) The ratio of boys to girls at the park was 10 to 6. If there were 100 boys, how many girls were there?



3. \_\_\_\_\_

4. \_\_\_\_\_

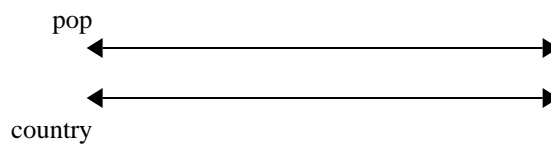
- 3) A store had a sale where you could get 4 bags of cashews for \$8. If you wanted to buy 20 bags, how much would it cost?



5. \_\_\_\_\_

6. \_\_\_\_\_

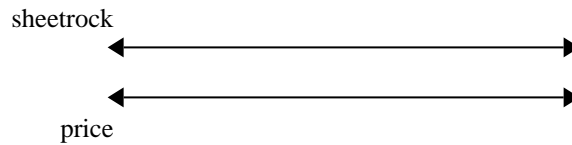
- 4) On her MP3 player for every 9 pop song Maria had she also had 10 country song. If she has 72 pop songs on her MP3 player, how many country songs does she have?



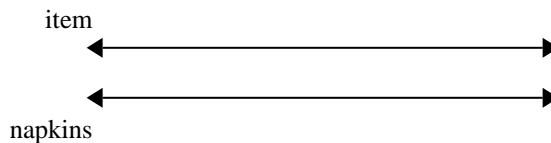
7. \_\_\_\_\_

8. \_\_\_\_\_

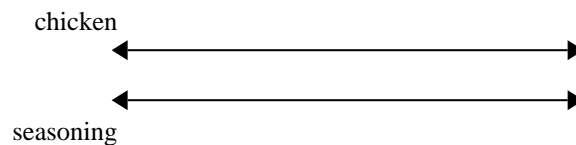
- 5) A builder could get 10 sheets of sheetrock for \$2. If he bought 50 sheets, how much money would he have spent?




- 6) A sloppy joe restaurant gave 7 napkins for every 9 items ordered. If someone bought 72 items, how many napkins should they get?



- 7) A recipe call for 5 teaspoons of seasoning for every 9 batches of chicken. If you have 81 batches of chicken, how many teaspoons of seasoning will you need?



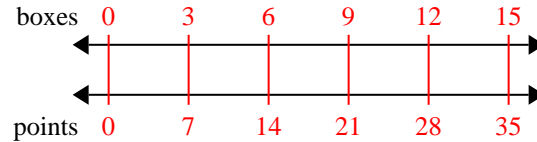
- 8) A box of candy had 3 cherry pieces for every 5 lemon pieces. If the box had 50 lemon pieces, how many cherry pieces would there be?



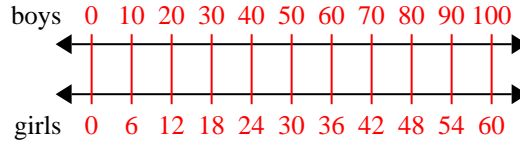


Use the double numberline to solve the problems.

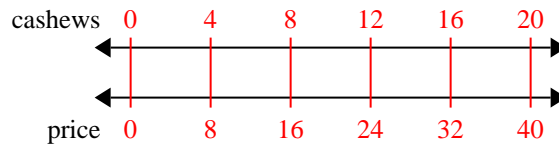
- 1) At a school fundraiser for every 3 boxes of chocolate sold you earn 7 points. If you were to sell 15 boxes, how many points would you have earned?



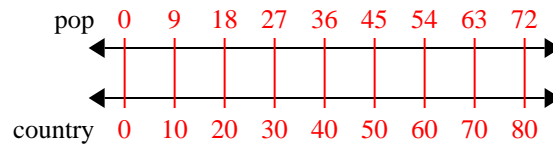
- 2) The ratio of boys to girls at the park was 10 to 6. If there were 100 boys, how many girls were there?



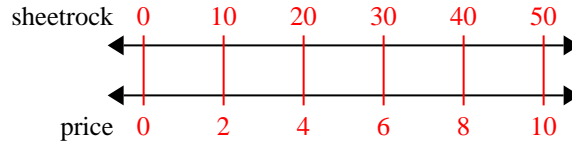
- 3) A store had a sale where you could get 4 bags of cashews for \$8. If you wanted to buy 20 bags, how much would it cost?



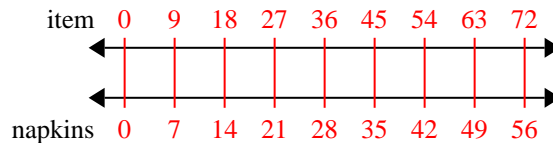
- 4) On her MP3 player for every 9 pop song Maria had she also had 10 country song. If she has 72 pop songs on her MP3 player, how many country songs does she have?



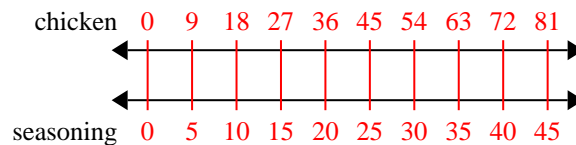
- 5) A builder could get 10 sheets of sheetrock for \$2. If he bought 50 sheets, how much money would he have spent?



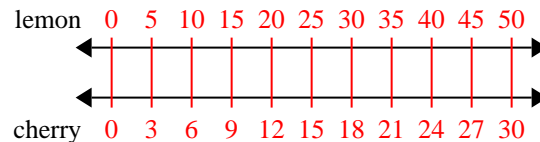
- 6) A sloppy joe restaurant gave 7 napkins for every 9 items ordered. If someone bought 72 items, how many napkins should they get?



- 7) A recipe call for 5 teaspoons of seasoning for every 9 batches of chicken. If you have 81 batches of chicken, how many teaspoons of seasoning will you need?



- 8) A box of candy had 3 cherry pieces for every 5 lemon pieces. If the box had 50 lemon pieces, how many cherry pieces would there be?

**Answers**

1. 35
2. 60
3. 40
4. 80
5. 10
6. 56
7. 45
8. 30