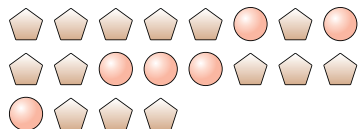


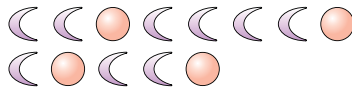


Solve each problem.

Ex) What is the ratio of circles to pentagons?



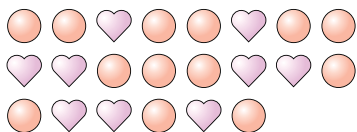
1) What is the ratio of circles to moons?



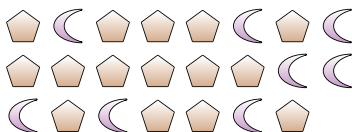
**Answers**

Ex. 6:14

2) What is the ratio of circles to hearts?



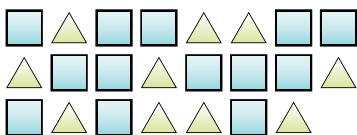
3) What is the ratio of moons to pentagons?



1. \_\_\_\_\_

2. \_\_\_\_\_

4) What is the ratio of squares to triangles?



5) What is the ratio of moons to stars?



3. \_\_\_\_\_

4. \_\_\_\_\_

5. \_\_\_\_\_

6) What is the ratio of hearts to stars?



7) What is the ratio of moons to stars?



6. \_\_\_\_\_

7. \_\_\_\_\_

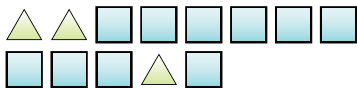
8. \_\_\_\_\_

9. \_\_\_\_\_


10. \_\_\_\_\_

11. \_\_\_\_\_

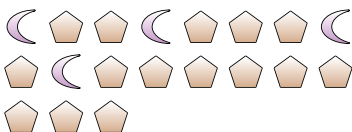
8) What is the ratio of squares to triangles?



9) What is the ratio of triangles to moons?



10) What is the ratio of pentagons to moons?



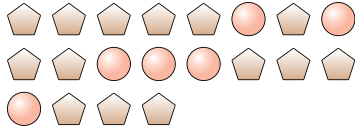
11) What is the ratio of stars to circles?



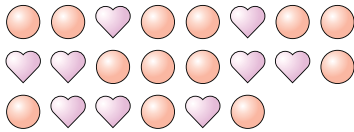


Solve each problem.

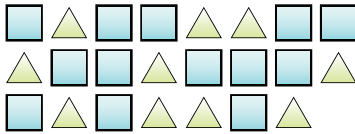
Ex) What is the ratio of circles to pentagons?



2) What is the ratio of circles to hearts?



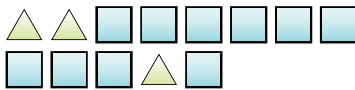
4) What is the ratio of squares to triangles?



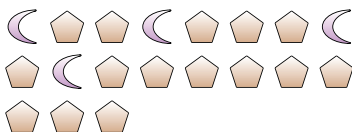
6) What is the ratio of hearts to stars?



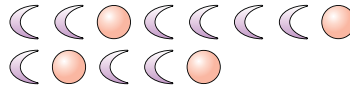
8) What is the ratio of squares to triangles?



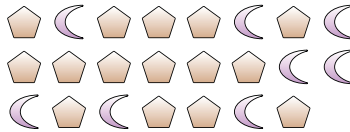
10) What is the ratio of pentagons to moons?



1) What is the ratio of circles to moons?



3) What is the ratio of moons to pentagons?




5) What is the ratio of moons to stars?



7) What is the ratio of moons to stars?



9) What is the ratio of triangles to moons?



11) What is the ratio of stars to circles?



Answers

Ex. 6:14

1. 4:9

2. 13:9

3. 8:15

4. 13:10

5. 13:12

6. 4:12

7. 13:3

8. 10:3

9. 14:6

10. 15:4

11. 9:3