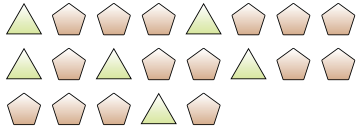


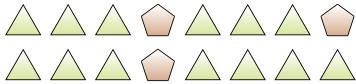


Solve each problem.

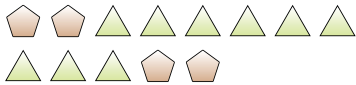
Ex) What is the ratio of pentagons to triangles?



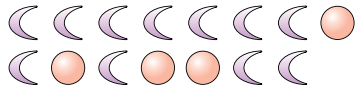
2) What is the ratio of triangles to pentagons?




4) What is the ratio of pentagons to triangles?



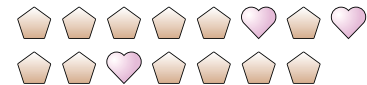
6) What is the ratio of moons to circles?




8) What is the ratio of circles to hearts?




10) What is the ratio of pentagons to hearts?



1) What is the ratio of circles to hearts?




3) What is the ratio of triangles to hearts?




5) What is the ratio of squares to stars?



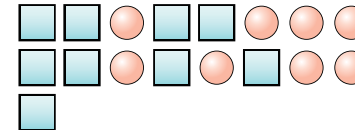
7) What is the ratio of hearts to pentagons?



9) What is the ratio of moons to triangles?



11) What is the ratio of squares to circles?



Answers

Ex. 15:6

1. _____

2. _____

3. _____

4. _____

5. _____

6. _____

7. _____

8. _____

9. _____

10. _____

11. _____

