



Solve each problem.

Ex) What is the ratio of hearts to stars?




1) What is the ratio of stars to moons?



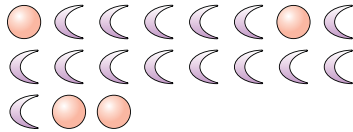
**Answers**

Ex. 15:7

2) What is the ratio of pentagons to hearts?



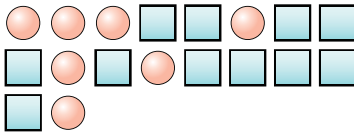
3) What is the ratio of circles to moons?



1. \_\_\_\_\_

2. \_\_\_\_\_

4) What is the ratio of squares to circles?



5) What is the ratio of moons to hearts?



3. \_\_\_\_\_


4. \_\_\_\_\_

5. \_\_\_\_\_

6) What is the ratio of triangles to hearts?



7) What is the ratio of triangles to hearts?

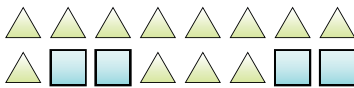


6. \_\_\_\_\_

7. \_\_\_\_\_

8. \_\_\_\_\_

8) What is the ratio of squares to triangles?



9) What is the ratio of squares to hearts?



9. \_\_\_\_\_


10. \_\_\_\_\_

11. \_\_\_\_\_

10) What is the ratio of triangles to hearts?



11) What is the ratio of pentagons to stars?





Solve each problem.


Ex) What is the ratio of hearts to stars?



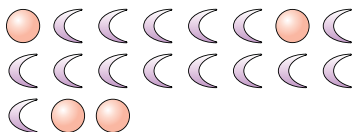
1) What is the ratio of stars to moons?



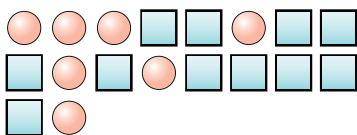
2) What is the ratio of pentagons to hearts?



3) What is the ratio of circles to moons?



4) What is the ratio of squares to circles?




5) What is the ratio of moons to hearts?



6) What is the ratio of triangles to hearts?



7) What is the ratio of triangles to hearts?



8) What is the ratio of squares to triangles?




9) What is the ratio of squares to hearts?



10) What is the ratio of triangles to hearts?



11) What is the ratio of pentagons to stars?



Answers

Ex. 15:7

1. 6:6

2. 6:9

3. 4:15

4. 11:7

5. 3:12

6. 2:10

7. 14:3

8. 4:12

9. 4:3

10. 8:3

11. 13:12