



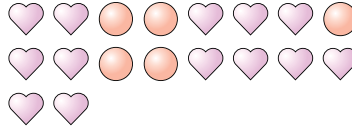


Solve each problem.

Ex) What is the ratio of squares to moons?



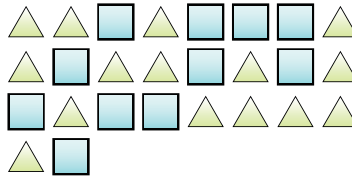
1) What is the ratio of circles to hearts?



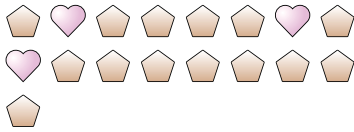
2) What is the ratio of triangles to stars?



3) What is the ratio of squares to triangles?




4) What is the ratio of pentagons to hearts?




5) What is the ratio of pentagons to stars?




6) What is the ratio of hearts to pentagons?



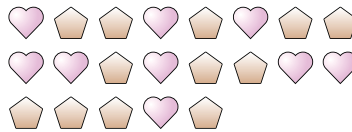
7) What is the ratio of squares to hearts?



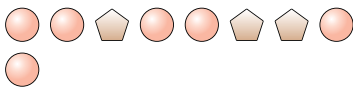
8) What is the ratio of stars to pentagons?



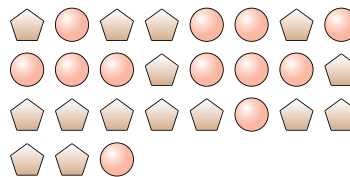
9) What is the ratio of hearts to pentagons?



10) What is the ratio of circles to pentagons?



11) What is the ratio of pentagons to circles?



Answers

Ex. 2:6

1. 5:13

2. 3:3

3. 11:15

4. 14:3

5. 7:9

6. 10:9

7. 14:11

8. 14:15

9. 9:12

10. 6:3

11. 15:12