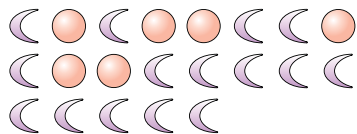






Solve each problem.


Ex) What is the ratio of moons to circles?




2) What is the ratio of triangles to stars?



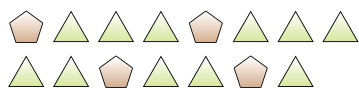
4) What is the ratio of triangles to stars?



6) What is the ratio of pentagons to hearts?



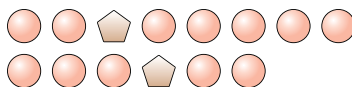
8) What is the ratio of pentagons to triangles?



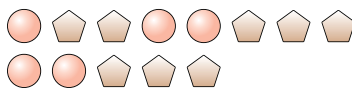
10) What is the ratio of hearts to stars?



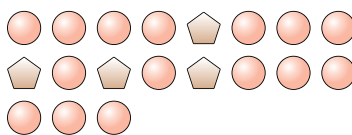
1) What is the ratio of pentagons to circles?



3) What is the ratio of pentagons to circles?




5) What is the ratio of circles to pentagons?



7) What is the ratio of hearts to moons?



9) What is the ratio of triangles to hearts?



11) What is the ratio of stars to moons?



Answers

Ex. 15:6

1. 2:12

2. 5:9

3. 8:5

4. 12:8

5. 15:4

6. 5:11

7. 12:2

8. 4:11

9. 11:6

10. 12:9

11. 11:2