



Determine which pictograph best represents the information in the chart.

**Answers**

1)

| Year | Snow Days |
|------|-----------|
| 1991 | 3         |
| 1992 | 6         |
| 1993 | 30        |
| 1994 | 27        |
| 1995 | 21        |

2)

| Year | Snow Days |
|------|-----------|
| 1991 | 15        |
| 1992 | 24        |
| 1993 | 12        |
| 1994 | 6         |
| 1995 | 27        |

3)

| Year | Snow Days |
|------|-----------|
| 1991 | 9         |
| 1992 | 15        |
| 1993 | 24        |
| 1994 | 18        |
| 1995 | 30        |

4)

| Year | Snow Days |
|------|-----------|
| 1991 | 18        |
| 1992 | 3         |
| 1993 | 6         |
| 1994 | 24        |
| 1995 | 9         |

5)






| Year | Snow Days |
|------|-----------|
| 1991 | 15        |
| 1992 | 3         |
| 1993 | 24        |
| 1994 | 21        |
| 1995 | 27        |


6)

| Year | Snow Days |
|------|-----------|
| 1991 | 3         |
| 1992 | 24        |
| 1993 | 12        |
| 1994 | 9         |
| 1995 | 18        |






1. \_\_\_\_\_
2. \_\_\_\_\_
3. \_\_\_\_\_
4. \_\_\_\_\_
5. \_\_\_\_\_
6. \_\_\_\_\_


A)

| Year | Snow Days   |
|------|---|
| 1991 |   |
| 1992 |  |
| 1993 |  |
| 1994 |  |
| 1995 |  |






Each  = 3 day of snow


B)

| Year | Snow Days  |
|------|--|
| 1991 |   |
| 1992 |  |
| 1993 |  |
| 1994 |  |
| 1995 |  |






Each  = 3 day of snow


C)

| Year | Snow Days   |
|------|---|
| 1991 |  |
| 1992 |  |
| 1993 |  |
| 1994 |  |
| 1995 |  |






Each  = 3 day of snow


D)

| Year | Snow Days  |
|------|--|
| 1991 |  |
| 1992 |   |
| 1993 |  |
| 1994 |  |
| 1995 |  |






Each  = 3 day of snow


E)

| Year | Snow Days   |
|------|---|
| 1991 |  |
| 1992 |  |
| 1993 |  |
| 1994 |  |
| 1995 |  |

Each  = 3 day of snow

F)

| Year | Snow Days  |
|------|--|
| 1991 |   |
| 1992 |  |
| 1993 |  |
| 1994 |  |
| 1995 |  |

Each  = 3 day of snow



Determine which pictograph best represents the information in the chart.

1)

| Year | Snow Days |
|------|-----------|
| 1991 | 3         |
| 1992 | 6         |
| 1993 | 30        |
| 1994 | 27        |
| 1995 | 21        |

2)

| Year | Snow Days |
|------|-----------|
| 1991 | 15        |
| 1992 | 24        |
| 1993 | 12        |
| 1994 | 6         |
| 1995 | 27        |

3)

| Year | Snow Days |
|------|-----------|
| 1991 | 9         |
| 1992 | 15        |
| 1993 | 24        |
| 1994 | 18        |
| 1995 | 30        |

4)

| Year | Snow Days |
|------|-----------|
| 1991 | 18        |
| 1992 | 3         |
| 1993 | 6         |
| 1994 | 24        |
| 1995 | 9         |

5)

| Year | Snow Days |
|------|-----------|
| 1991 | 15        |
| 1992 | 3         |
| 1993 | 24        |
| 1994 | 21        |
| 1995 | 27        |






6)


| Year | Snow Days |
|------|-----------|
| 1991 | 3         |
| 1992 | 24        |
| 1993 | 12        |
| 1994 | 9         |
| 1995 | 18        |

Answers






1.     **F**
2.     **C**
3.     **B**
4.     **A**
5.     **D**
6.     **E**


A)

| Year | Snow Days   |
|------|---|
| 1991 |   |
| 1992 |  |
| 1993 |  |
| 1994 |  |
| 1995 |  |






Each  = 3 day of snow


B)

| Year | Snow Days  |
|------|--|
| 1991 |   |
| 1992 |  |
| 1993 |  |
| 1994 |  |
| 1995 |  |






Each  = 3 day of snow


C)

| Year | Snow Days   |
|------|---|
| 1991 |  |
| 1992 |  |
| 1993 |  |
| 1994 |  |
| 1995 |  |






Each  = 3 day of snow


D)

| Year | Snow Days  |
|------|--|
| 1991 |  |
| 1992 |   |
| 1993 |  |
| 1994 |  |
| 1995 |  |






Each  = 3 day of snow


E)

| Year | Snow Days   |
|------|---|
| 1991 |  |
| 1992 |  |
| 1993 |  |
| 1994 |  |
| 1995 |  |

Each  = 3 day of snow

F)

| Year | Snow Days  |
|------|--|
| 1991 |   |
| 1992 |  |
| 1993 |  |
| 1994 |  |
| 1995 |  |

Each  = 3 day of snow