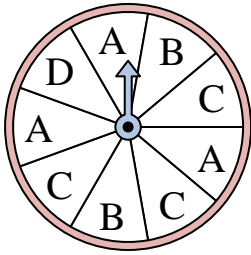




Solve each problem. Round your answer to the nearest tenth.


Answers

1)



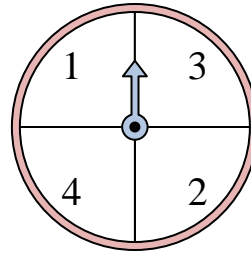
The spinner has a ____% chance of landing on a D.

2)



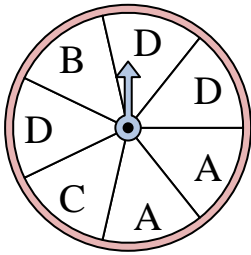
The spinner has a ____% chance of landing on a 4.

3)



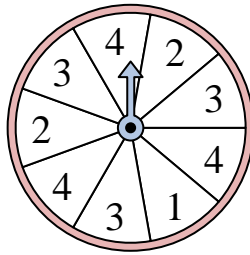
The spinner has a ____% chance of landing on a 1.

4)



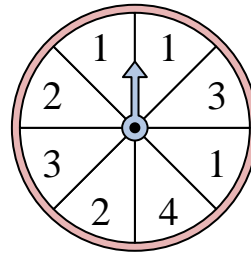
The spinner has a ____% chance of landing on a D.

5)




The spinner has a ____% chance of landing on a 4.

6)



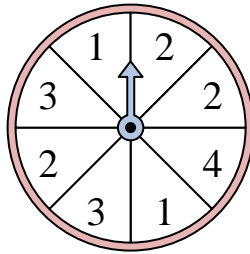
The spinner has a ____% chance of landing on a 2.

7)



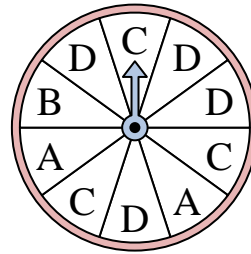
The spinner has a ____% chance of landing on a 4.

8)



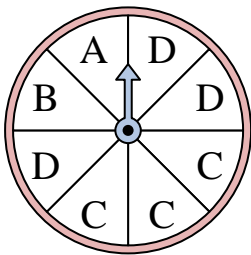
The spinner has a ____% chance of landing on a 1.

9)



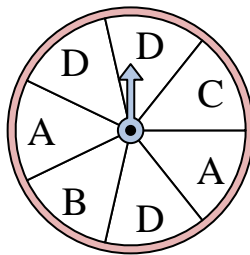
The spinner has a ____% chance of landing on a D.

10)



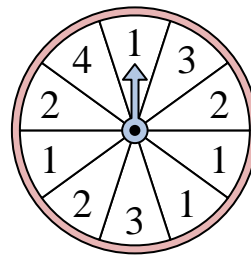
The spinner has a ____% chance of landing on a A.

11)



The spinner has a ____% chance of landing on a B.

12)



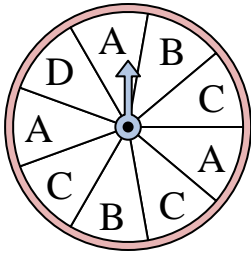
The spinner has a ____% chance of landing on a 1.

1. _____
2. _____
3. _____
4. _____
5. _____
6. _____
7. _____
8. _____
9. _____
10. _____
11. _____
12. _____




Solve each problem. Round your answer to the nearest tenth.

1)



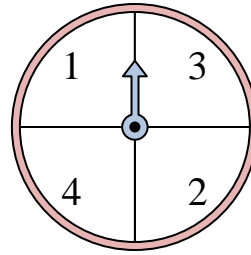
The spinner has a ____% chance of landing on a D.

2)



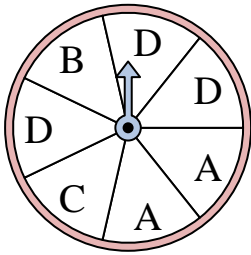
The spinner has a ____% chance of landing on a 4.

3)



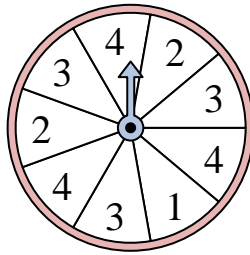
The spinner has a ____% chance of landing on a 1.

4)



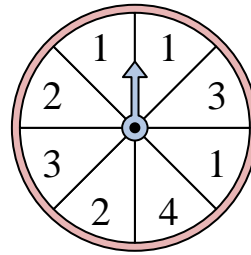
The spinner has a ____% chance of landing on a D.

5)




The spinner has a ____% chance of landing on a 4.

6)



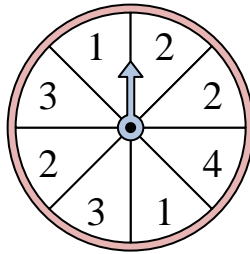
The spinner has a ____% chance of landing on a 2.

7)



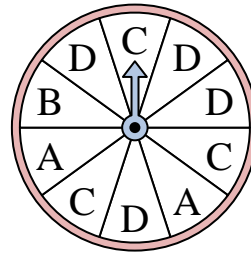
The spinner has a ____% chance of landing on a 4.

8)



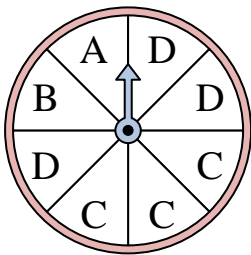
The spinner has a ____% chance of landing on a 1.

9)



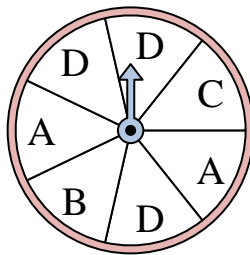
The spinner has a ____% chance of landing on a D.

10)



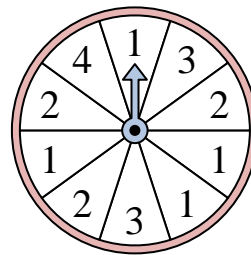
The spinner has a ____% chance of landing on a A.

11)



The spinner has a ____% chance of landing on a B.

12)



The spinner has a ____% chance of landing on a 1.

Answers

1. 11.1

2. 20

3. 25

4. 42.9

5. 33.3

6. 25

7. 10

8. 25

9. 40

10. 12.5

11. 14.3

12. 40