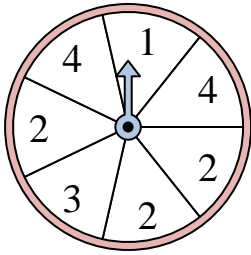




Solve each problem. Round your answer to the nearest tenth.

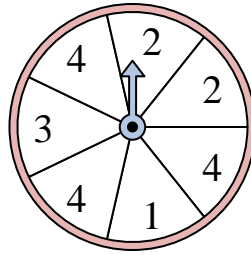
Answers

1)



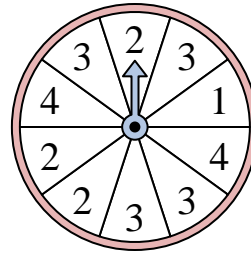
The spinner has a ____% chance of landing on a 2.

2)



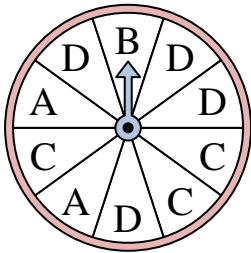
The spinner has a ____% chance of landing on a 4.

3)



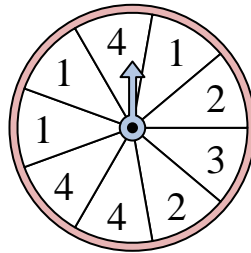
The spinner has a ____% chance of landing on a 4.

4)



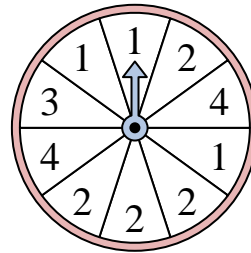
The spinner has a ____% chance of landing on a C.

5)



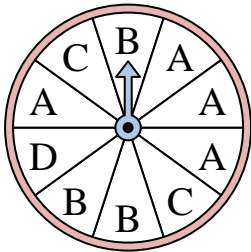
The spinner has a ____% chance of landing on a 1.

6)



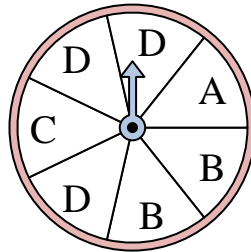
The spinner has a ____% chance of landing on a 1.

7)



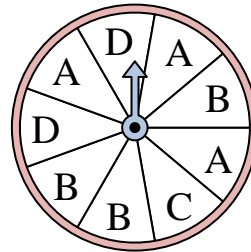
The spinner has a ____% chance of landing on a C.

8)



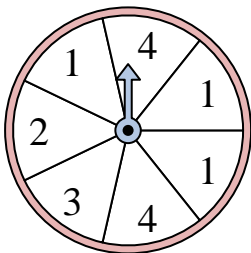
The spinner has a ____% chance of landing on a C.

9)



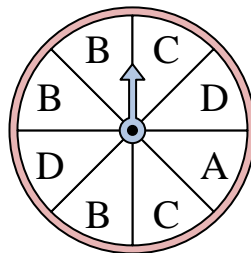
The spinner has a ____% chance of landing on a B.

10)



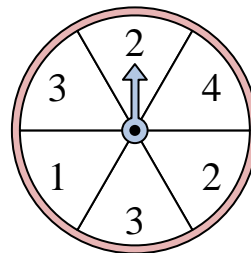
The spinner has a ____% chance of landing on a 4.

11)



The spinner has a ____% chance of landing on a D.

12)



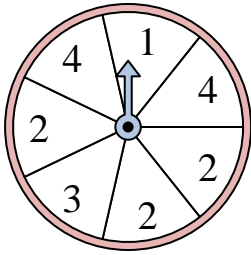
The spinner has a ____% chance of landing on a 3.

1. _____
2. _____
3. _____
4. _____
5. _____
6. _____
7. _____
8. _____
9. _____
10. _____
11. _____
12. _____



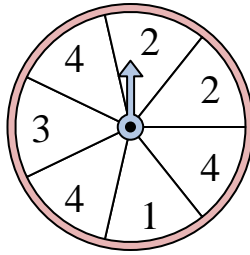
Solve each problem. Round your answer to the nearest tenth.

1)



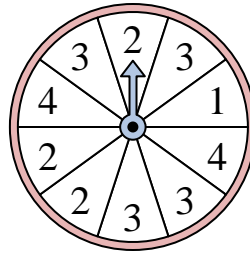
The spinner has a ____% chance of landing on a 2.

2)



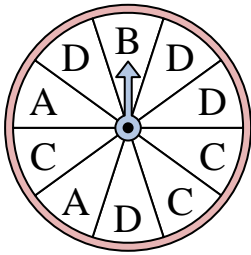
The spinner has a ____% chance of landing on a 4.

3)



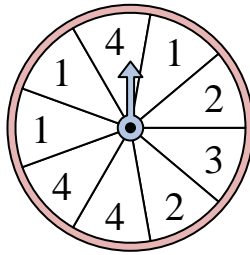
The spinner has a ____% chance of landing on a 4.

4)



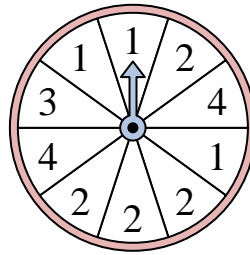
The spinner has a ____% chance of landing on a C.

5)



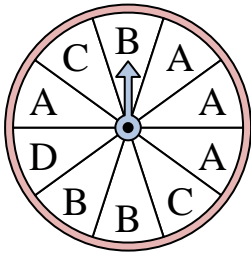
The spinner has a ____% chance of landing on a 1.

6)



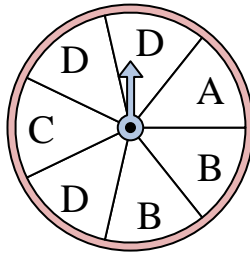
The spinner has a ____% chance of landing on a 1.

7)



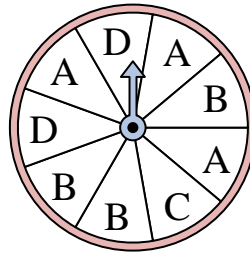
The spinner has a ____% chance of landing on a C.

8)



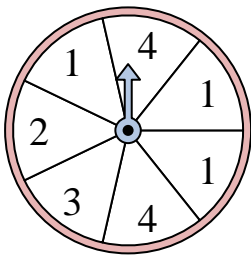
The spinner has a ____% chance of landing on a C.

9)



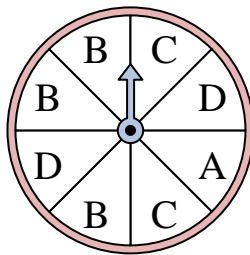
The spinner has a ____% chance of landing on a B.

10)



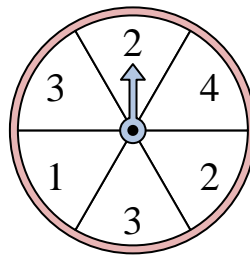
The spinner has a ____% chance of landing on a 4.

11)



The spinner has a ____% chance of landing on a D.

12)



The spinner has a ____% chance of landing on a 3.

Answers

1. 42.9

2. 42.9

3. 20

4. 30

5. 33.3

6. 30

7. 20

8. 14.3

9. 33.3

10. 28.6

11. 25

12. 33.3