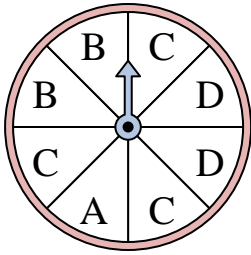




Solve each problem. Round your answer to the nearest tenth.

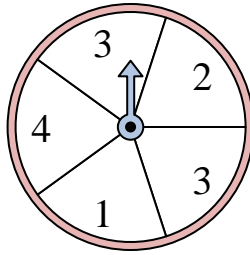
Answers

1)



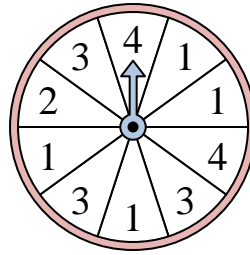
The spinner has a ____% chance of landing on a D.

2)



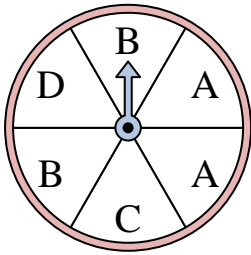
The spinner has a ____% chance of landing on a 4.

3)



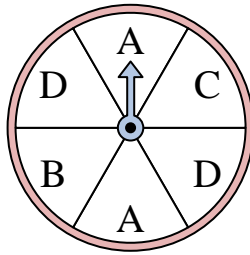
The spinner has a ____% chance of landing on a 4.

4)



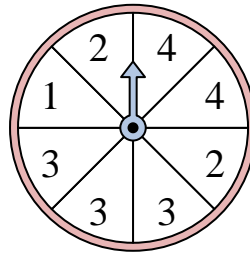
The spinner has a ____% chance of landing on a B.

5)




The spinner has a ____% chance of landing on a C.

6)



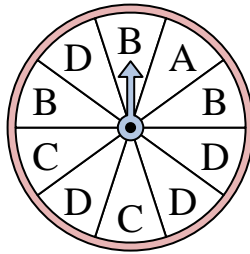
The spinner has a ____% chance of landing on a 2.

7)



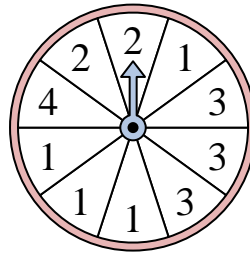
The spinner has a ____% chance of landing on a 2.

8)



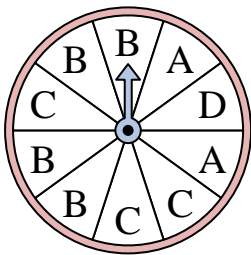
The spinner has a ____% chance of landing on a C.

9)



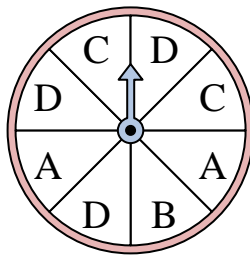
The spinner has a ____% chance of landing on a 1.

10)



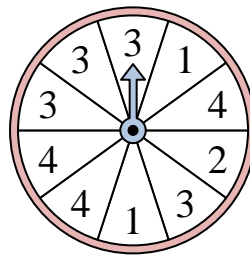
The spinner has a ____% chance of landing on a A.

11)



The spinner has a ____% chance of landing on a D.

12)



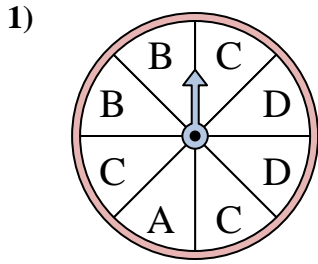
The spinner has a ____% chance of landing on a 1.

1. _____
2. _____
3. _____
4. _____
5. _____
6. _____
7. _____
8. _____
9. _____
10. _____
11. _____
12. _____

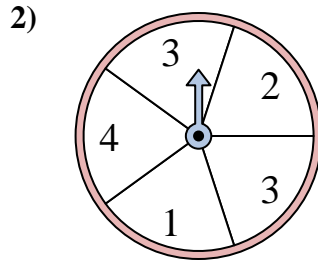


Solve each problem. Round your answer to the nearest tenth.

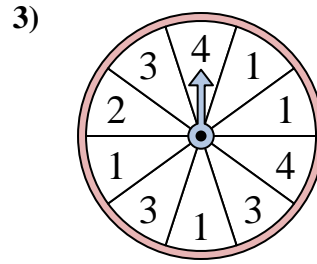
Answers



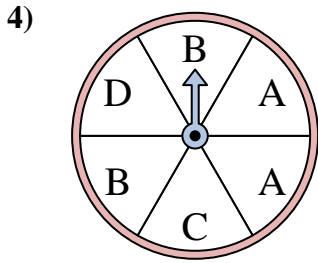
The spinner has a ____% chance of landing on a D.



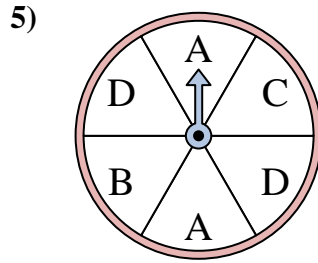
The spinner has a ____% chance of landing on a 4.



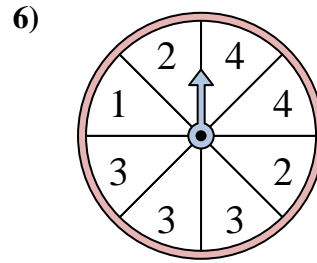
The spinner has a ____% chance of landing on a 4.



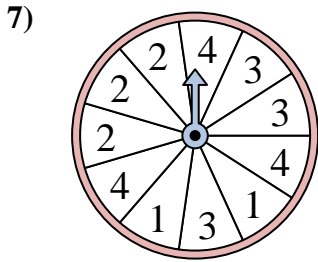
The spinner has a ____% chance of landing on a B.



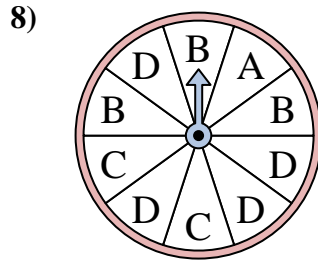
The spinner has a ____% chance of landing on a C.



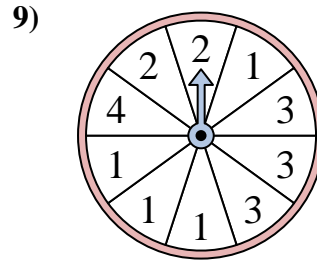
The spinner has a ____% chance of landing on a 2.



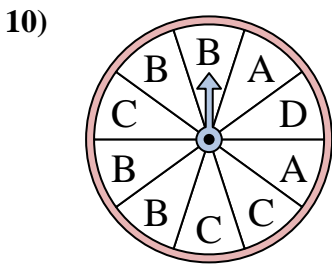
The spinner has a ____% chance of landing on a 2.



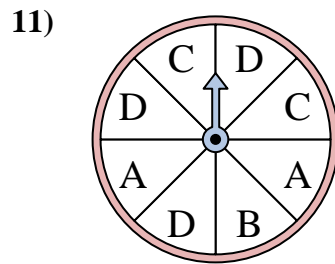
The spinner has a ____% chance of landing on a C.



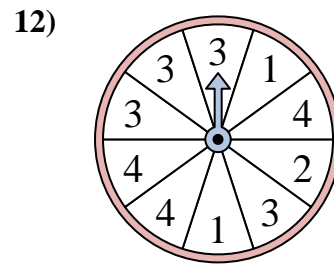
The spinner has a ____% chance of landing on a 1.



The spinner has a ____% chance of landing on a A.



The spinner has a ____% chance of landing on a D.



The spinner has a ____% chance of landing on a 1.

1. 25
2. 20
3. 20
4. 33.3
5. 16.7
6. 25
7. 27.3
8. 20
9. 40
10. 20
11. 37.5
12. 20