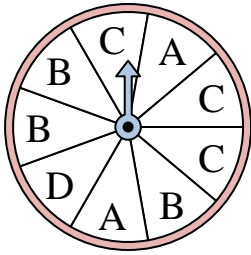




Solve each problem. Round your answer to the nearest tenth.

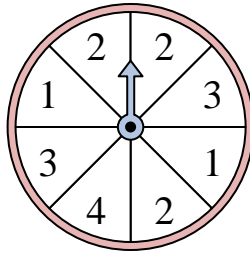
Answers

1)



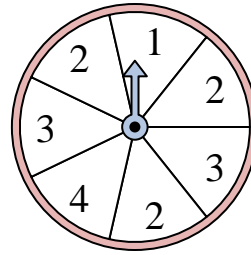
The spinner has a ____% chance of landing on a A.

2)



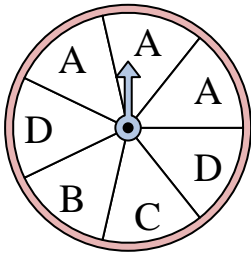
The spinner has a ____% chance of landing on a 2.

3)



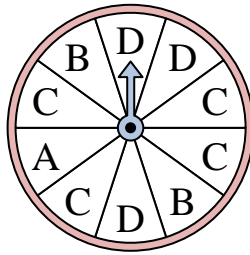
The spinner has a ____% chance of landing on a 4.

4)



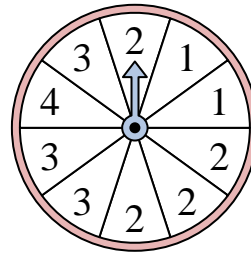
The spinner has a ____% chance of landing on a A.

5)



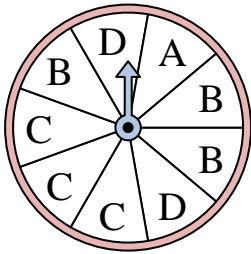
The spinner has a ____% chance of landing on a D.

6)



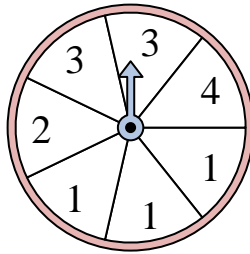
The spinner has a ____% chance of landing on a 1.

7)



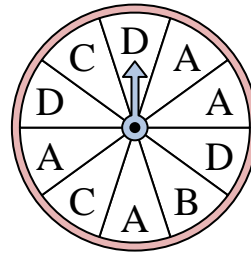
The spinner has a ____% chance of landing on a B.

8)



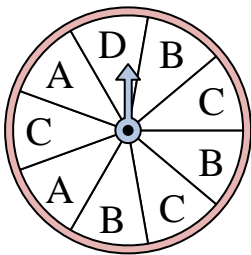
The spinner has a ____% chance of landing on a 2.

9)



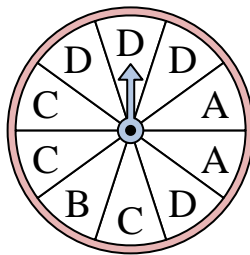
The spinner has a ____% chance of landing on a B.

10)



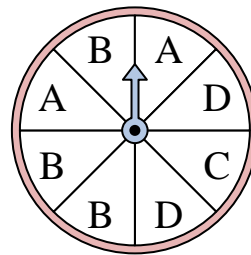
The spinner has a ____% chance of landing on a B.

11)



The spinner has a ____% chance of landing on a C.

12)



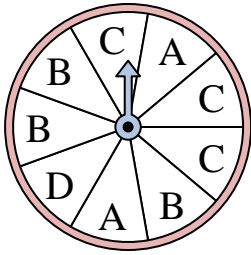
The spinner has a ____% chance of landing on a D.

1. _____
2. _____
3. _____
4. _____
5. _____
6. _____
7. _____
8. _____
9. _____
10. _____
11. _____
12. _____



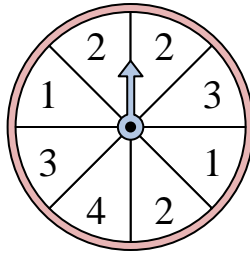
Solve each problem. Round your answer to the nearest tenth.

1)



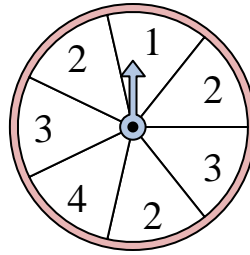
The spinner has a ____% chance of landing on a A.

2)



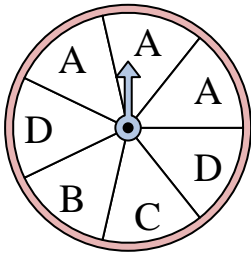
The spinner has a ____% chance of landing on a 2.

3)



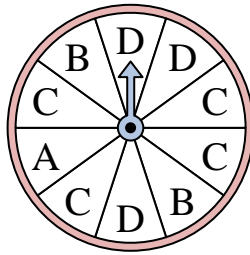
The spinner has a ____% chance of landing on a 4.

4)



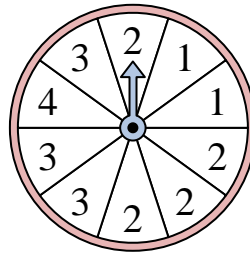
The spinner has a ____% chance of landing on a A.

5)



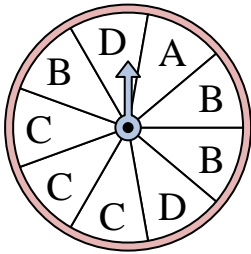
The spinner has a ____% chance of landing on a D.

6)



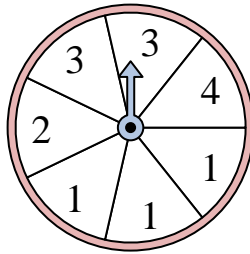
The spinner has a ____% chance of landing on a 1.

7)



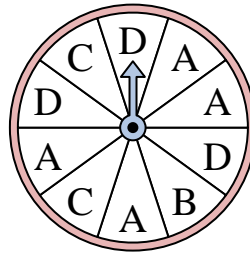
The spinner has a ____% chance of landing on a B.

8)



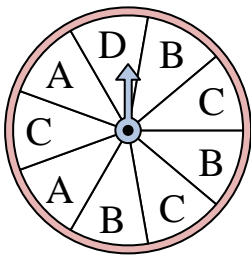
The spinner has a ____% chance of landing on a 2.

9)



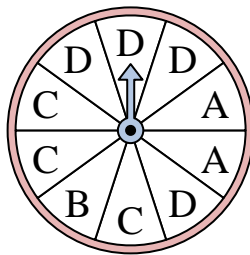
The spinner has a ____% chance of landing on a B.

10)



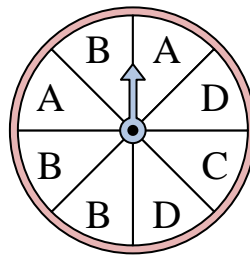
The spinner has a ____% chance of landing on a B.

11)



The spinner has a ____% chance of landing on a C.

12)



The spinner has a ____% chance of landing on a D.

Answers

1. 22.2
2. 37.5
3. 14.3
4. 42.9
5. 30
6. 20
7. 33.3
8. 14.3
9. 10
10. 33.3
11. 30
12. 25