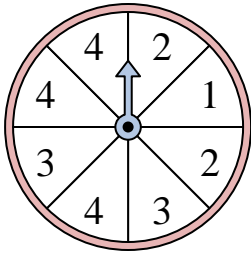




Solve each problem. Round your answer to the nearest tenth.

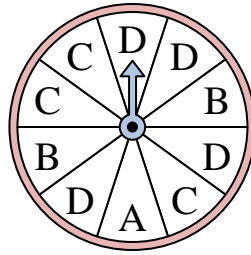
Answers

1)



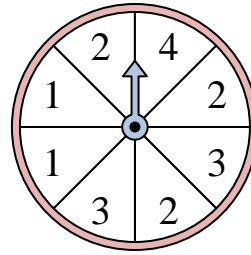
The spinner has a ____% chance of landing on a 4.

2)



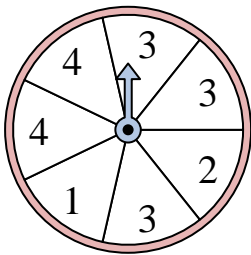
The spinner has a ____% chance of landing on a A.

3)



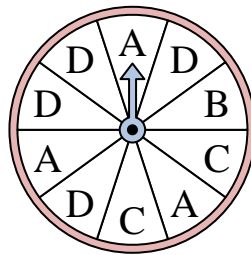
The spinner has a ____% chance of landing on a 1.

4)



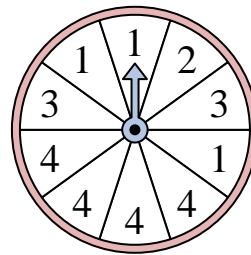
The spinner has a ____% chance of landing on a 3.

5)



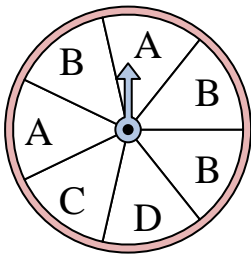
The spinner has a ____% chance of landing on a C.

6)



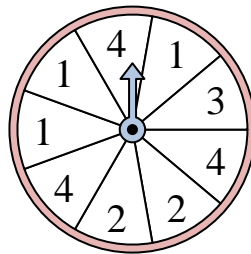
The spinner has a ____% chance of landing on a 2.

7)



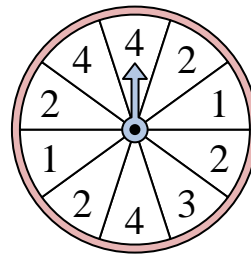
The spinner has a ____% chance of landing on a B.

8)




The spinner has a ____% chance of landing on a 1.

9)



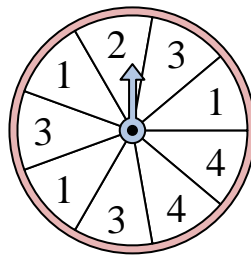
The spinner has a ____% chance of landing on a 2.

10)



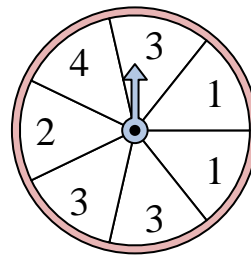
The spinner has a ____% chance of landing on a 3.

11)



The spinner has a ____% chance of landing on a 3.

12)

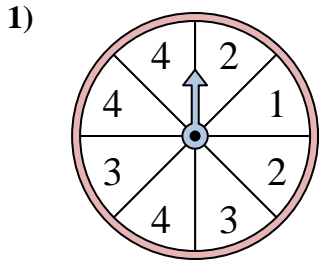


The spinner has a ____% chance of landing on a 3.

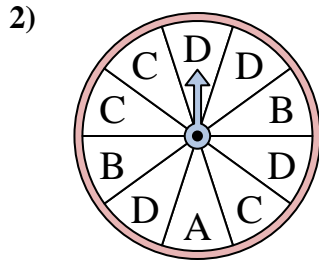
1. _____
2. _____
3. _____
4. _____
5. _____
6. _____
7. _____
8. _____
9. _____
10. _____
11. _____
12. _____



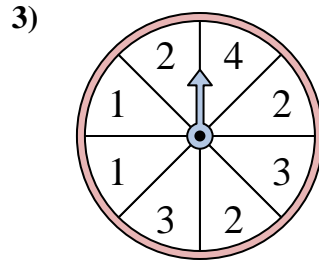
Solve each problem. Round your answer to the nearest tenth.



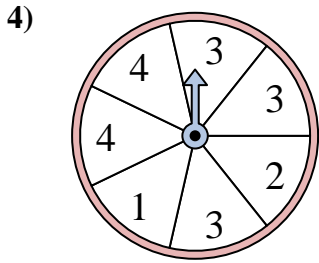
The spinner has a ____% chance of landing on a 4.



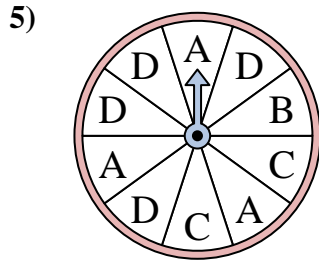
The spinner has a ____% chance of landing on a A.



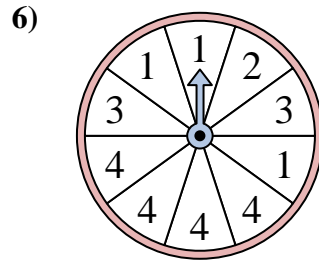
The spinner has a ____% chance of landing on a 1.



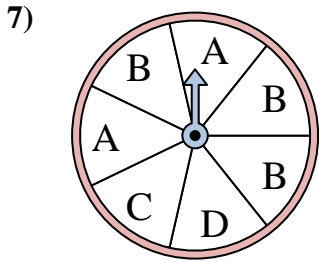
The spinner has a ____% chance of landing on a 3.



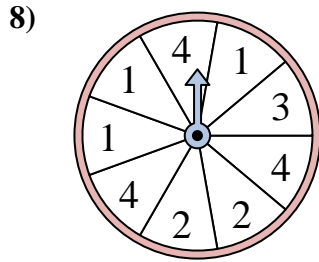
The spinner has a ____% chance of landing on a C.



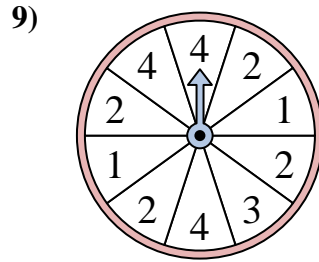
The spinner has a ____% chance of landing on a 2.



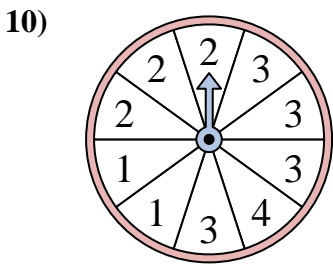
The spinner has a ____% chance of landing on a B.



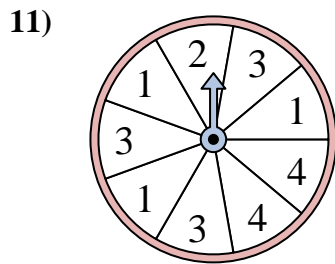
The spinner has a ____% chance of landing on a 1.



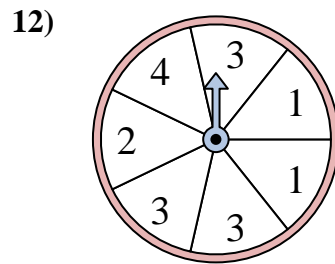
The spinner has a ____% chance of landing on a 2.



The spinner has a ____% chance of landing on a 3.



The spinner has a ____% chance of landing on a 3.



The spinner has a ____% chance of landing on a 3.

Answers

1. 37.5
2. 10
3. 25
4. 42.9
5. 20
6. 10
7. 42.9
8. 33.3
9. 40
10. 40
11. 33.3
12. 42.9