



Express each set as a multiplication problem.

Ex)

Answers

Ex. $7 \times 4 = 28$

1)

1. _____

2. _____

2)

3. _____

4. _____

5. _____

3)

6. _____

7. _____

4)

8. _____

5)


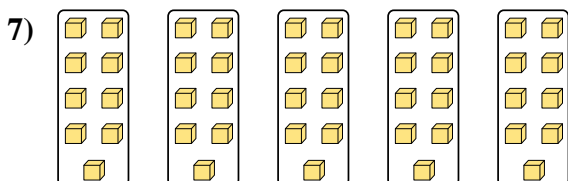
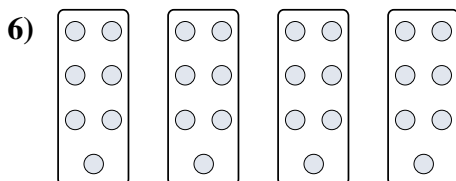


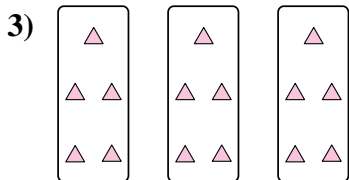
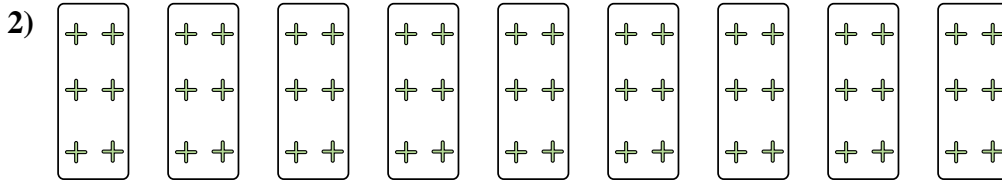
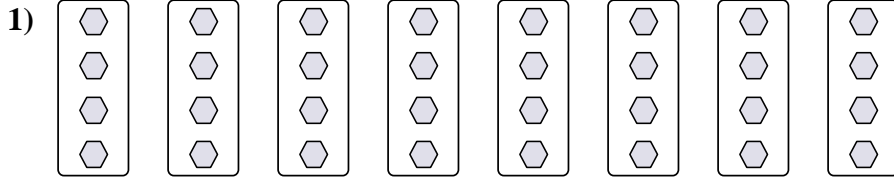

6)

7)

8)



Express each set as a multiplication problem.



Answers

Ex. $7 \times 4 = 28$

1. $8 \times 4 = 32$

2. $9 \times 6 = 54$

3. $3 \times 5 = 15$

4. $4 \times 10 = 40$

5. $5 \times 6 = 30$

6. $4 \times 7 = 28$

7. $5 \times 9 = 45$

8. $10 \times 10 = 100$