




Determine how you would express the groups shown as a multiplication problem.


Answers

Ex)



Ex. 9×5

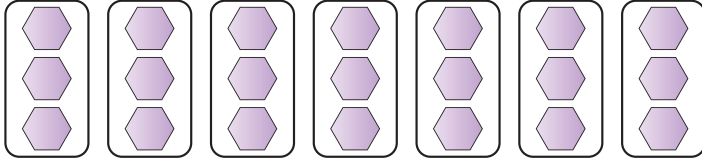
1)



1. _____

2. _____


2)



3. _____

4. _____

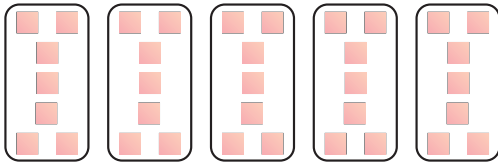
3)



5. _____

6. _____

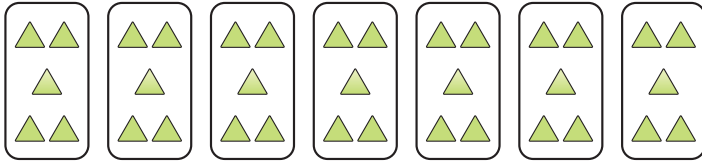
4)



7. _____

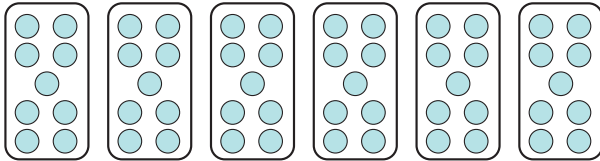
8. _____

5)




9. _____

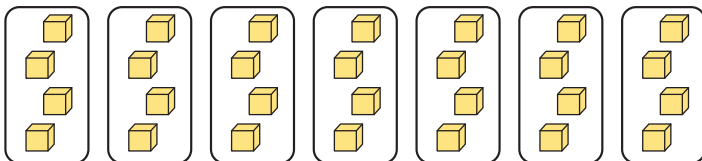
6)




7)



8)



9)





Determine how you would express the groups shown as a multiplication problem.

Answers

Ex)

Ex. 9×5

1)

1. 8×7

2)

2. 7×3

3)

3. 4×3

4)

4. 5×7

5)

5. 7×5

6)

6. 6×9

7)

7. 7×5

8)

8. 7×4

9)

9. 2×5



Determine how you would express the groups shown as a multiplication problem.

Answers

5×7

7×4

7×5

4×3

7×5

9×5

7×3

8×7

6×9

Ex. 9 × 5

1. _____

2. _____

3. _____

4. _____

5. _____

6. _____

7. _____

8. _____

Ex)

1)

2)

3)

4)

5)

6)

7)

8)