




Determine how you would express the groups shown as a multiplication problem.


Answers

Ex)



Ex. 9×3

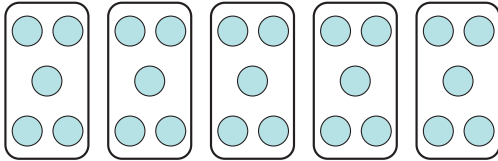
1)



1. _____

2. _____

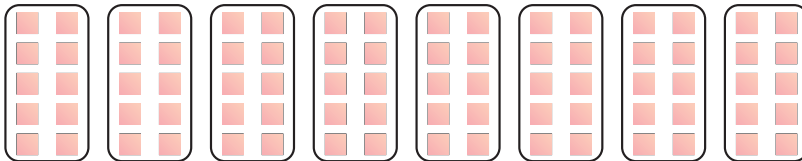
2)



3. _____

4. _____

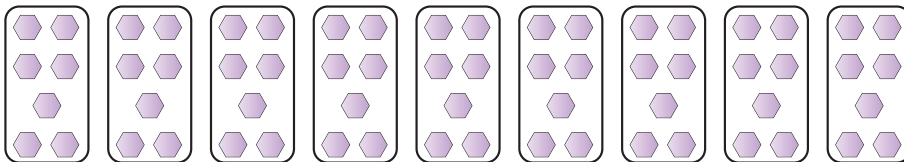
3)



5. _____

6. _____

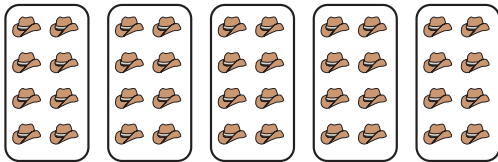
4)



7. _____


8. _____

5)




9. _____


6)



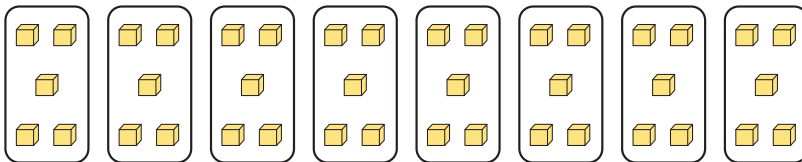
7)



8)



9)





Determine how you would express the groups shown as a multiplication problem.

Answers

Ex)

Ex. 9×3

1)

1. 8×6

2)

2. 5×5

3)

3. 8×10

4)

4. 9×7

5)

5. 5×8

6)

6. 6×6

7)

7. 2×4

8)

8. 2×10

9)

9. 8×5



Determine how you would express the groups shown as a multiplication problem.

Answers

8×6

8×10

9×7

2×4

2×10

9×3

5×5

6×6

5×8

Ex)

1)

2)

3)

4)

5)

6)

7)

8)

Ex. 9×3

1. _____

2. _____

3. _____

4. _____

5. _____

6. _____

7. _____

8. _____