




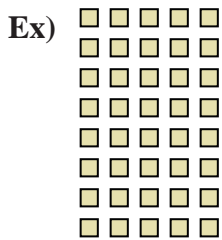






Write each array as a multiplication problem and solve.



Answers

Ex.  $8 \times 5 = 40$

1.  $6 \times 9 = 54$

2.  $5 \times 2 = 10$

3.  $2 \times 8 = 16$

4.  $7 \times 9 = 63$

5.  $6 \times 3 = 18$

6.  $10 \times 9 = 90$

7.  $10 \times 8 = 80$

8.  $3 \times 7 = 21$

9.  $4 \times 2 = 8$

10.  $10 \times 4 = 40$

11.  $3 \times 5 = 15$