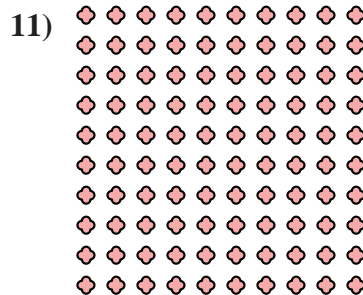




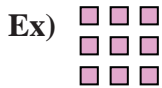




Write each array as a multiplication problem and solve.



Answers

Ex. $3 \times 3 = 9$

1. _____

2. _____

3. _____

4. _____

5. _____

6. _____

7. _____

8. _____

9. _____

10. _____

11. _____

