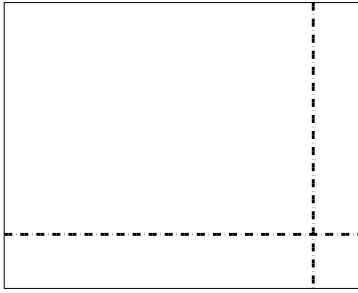





Use the array provided to solve each problem.


1)  $37 \times 46 =$



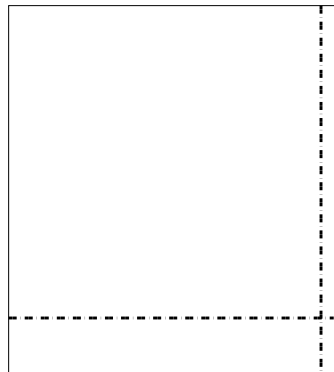
2)  $32 \times 29 =$




3)  $32 \times 53 =$




4)  $47 \times 43 =$



5)  $35 \times 14 =$



6)  $34 \times 17 =$



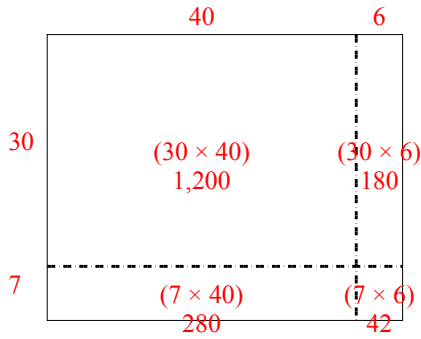
Answers

- 1. \_\_\_\_\_
- 2. \_\_\_\_\_
- 3. \_\_\_\_\_
- 4. \_\_\_\_\_
- 5. \_\_\_\_\_
- 6. \_\_\_\_\_

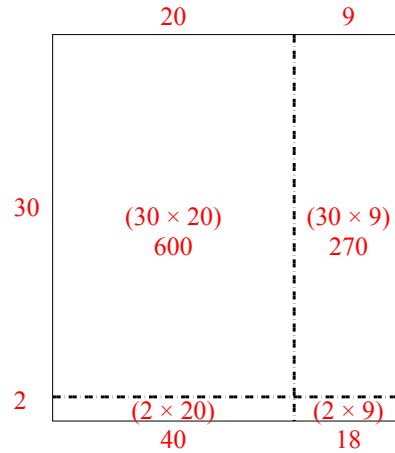


Use the array provided to solve each problem.

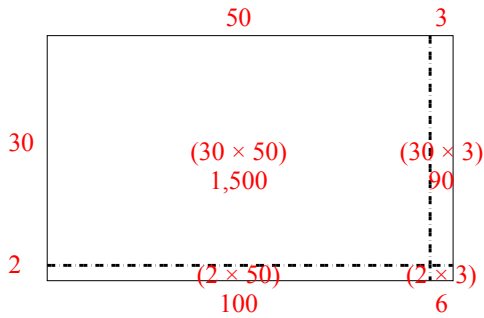
1)  $37 \times 46 =$



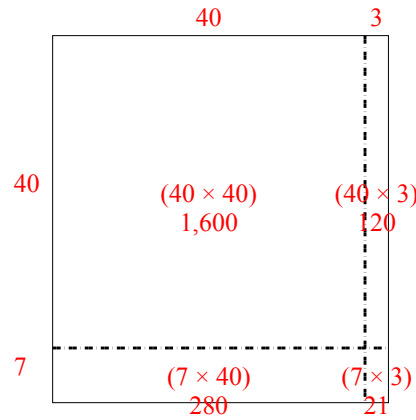
2)  $32 \times 29 =$



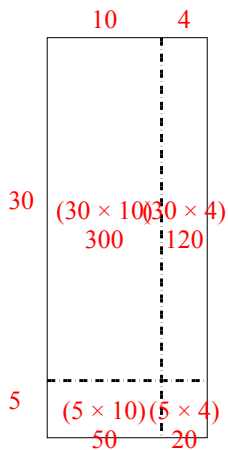
3)  $32 \times 53 =$



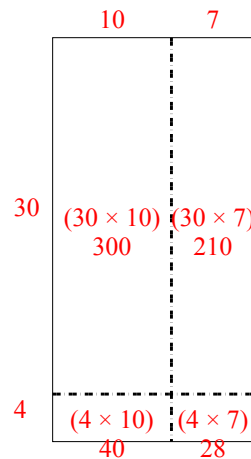
4)  $47 \times 43 =$



5)  $35 \times 14 =$



6)  $34 \times 17 =$



Answers

1. 1,702
2. 928
3. 1,696
4. 2,021
5. 490
6. 578