





Use the array provided to solve each problem.


1) $30 \times 26 =$




2) $37 \times 20 =$




3) $20 \times 22 =$




4) $25 \times 20 =$



5) $21 \times 20 =$



6) $20 \times 21 =$



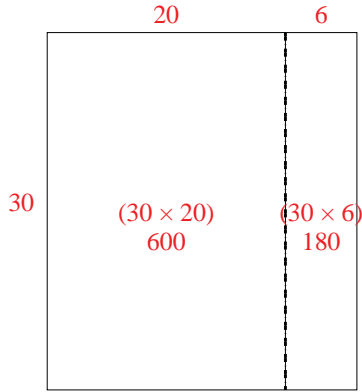
Answers

- 1. _____
- 2. _____
- 3. _____
- 4. _____
- 5. _____
- 6. _____

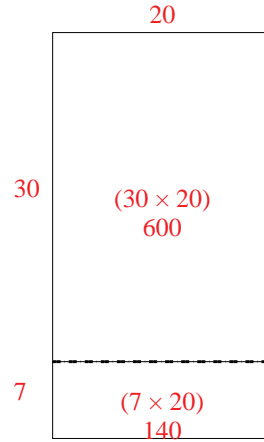


Use the array provided to solve each problem.

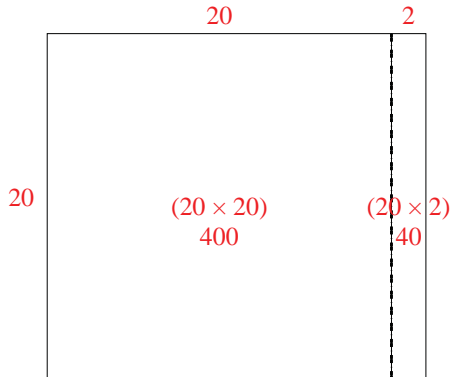
1) $30 \times 26 =$



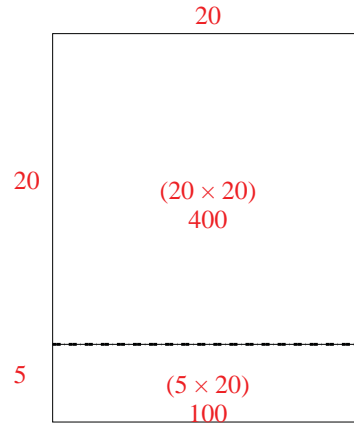
2) $37 \times 20 =$



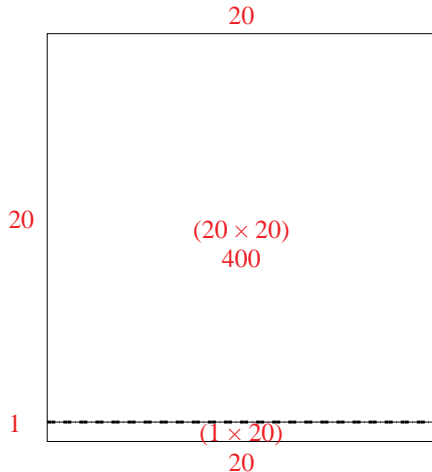
3) $20 \times 22 =$



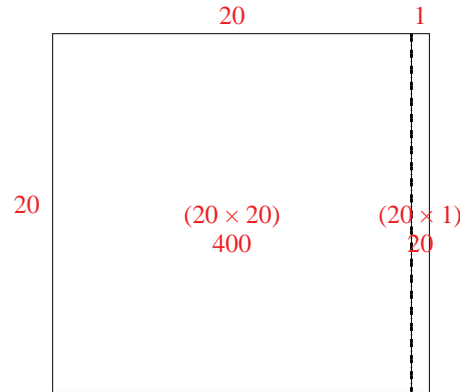
4) $25 \times 20 =$



5) $21 \times 20 =$



6) $20 \times 21 =$



Answers

1. 780
2. 740
3. 440
4. 500
5. 420
6. 420