





Use the array provided to solve each problem.


1)  $36 \times 30 =$




2)  $28 \times 30 =$




3)  $27 \times 20 =$




4)  $20 \times 28 =$



5)  $20 \times 29 =$



6)  $22 \times 20 =$



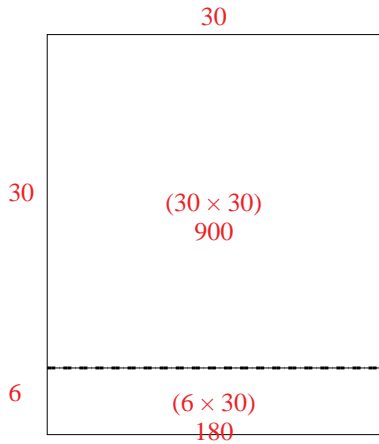
Answers

- 1. \_\_\_\_\_
- 2. \_\_\_\_\_
- 3. \_\_\_\_\_
- 4. \_\_\_\_\_
- 5. \_\_\_\_\_
- 6. \_\_\_\_\_

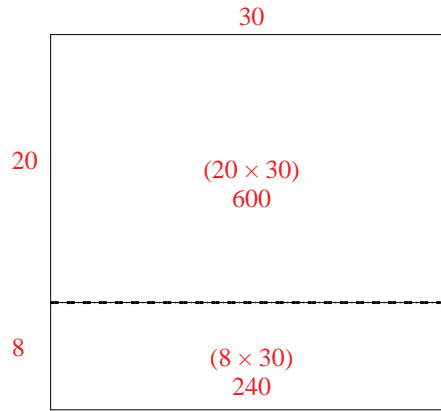


Use the array provided to solve each problem.

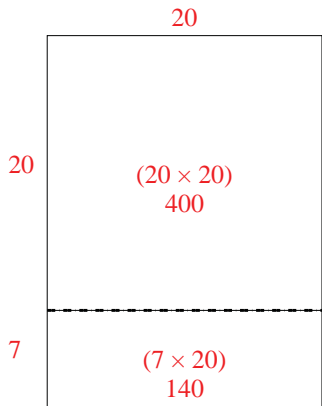
1)  $36 \times 30 =$



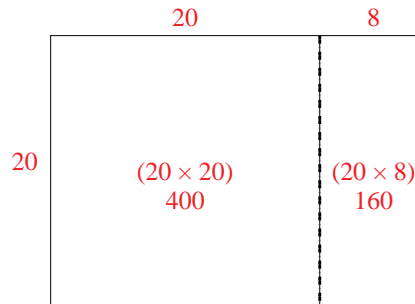
2)  $28 \times 30 =$



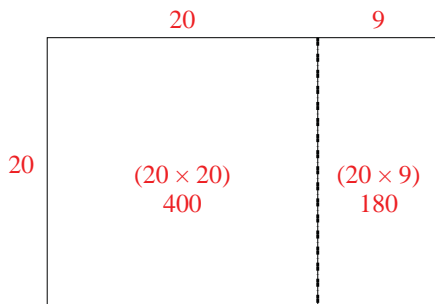
3)  $27 \times 20 =$



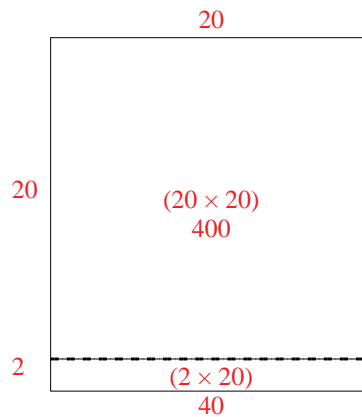
4)  $20 \times 28 =$



5)  $20 \times 29 =$



6)  $22 \times 20 =$



Answers

1. 1,080
2. 840
3. 540
4. 560
5. 580
6. 440