





Use the array provided to solve each problem.


1)  $30 \times 29 =$




2)  $28 \times 20 =$




3)  $24 \times 20 =$




4)  $25 \times 20 =$



5)  $26 \times 20 =$



6)  $21 \times 20 =$



Answers

1. \_\_\_\_\_

2. \_\_\_\_\_

3. \_\_\_\_\_

4. \_\_\_\_\_

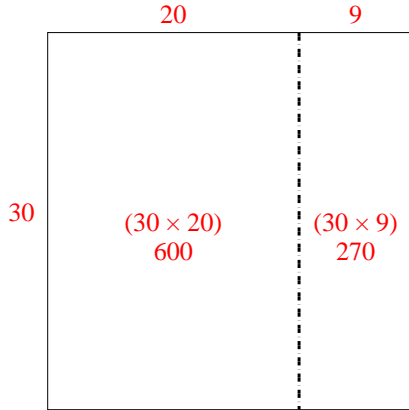
5. \_\_\_\_\_

6. \_\_\_\_\_

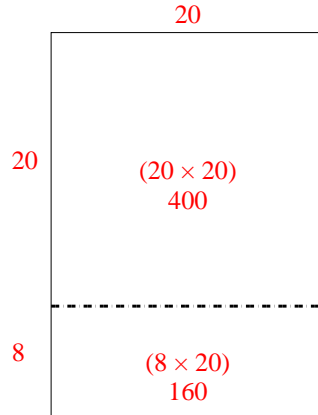


Use the array provided to solve each problem.

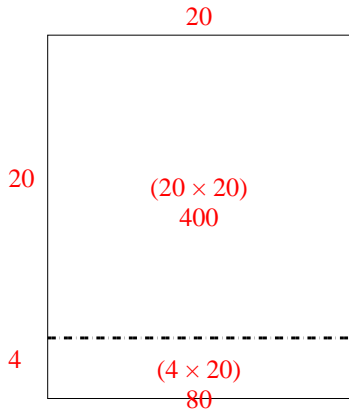
1)  $30 \times 29 =$



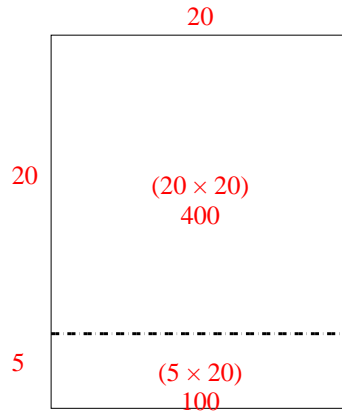
2)  $28 \times 20 =$



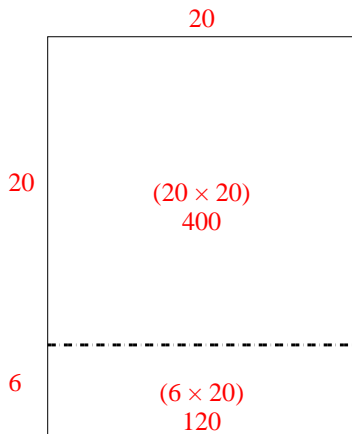
3)  $24 \times 20 =$



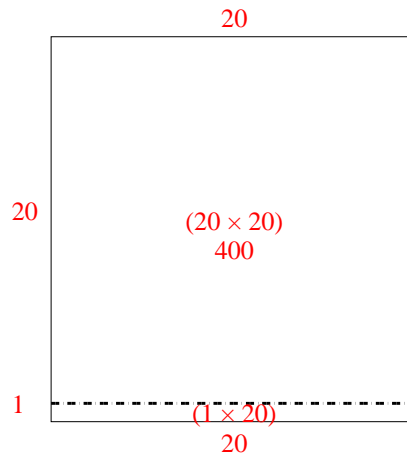
4)  $25 \times 20 =$



5)  $26 \times 20 =$



6)  $21 \times 20 =$



Answers

1. 870

2. 560

3. 480

4. 500

5. 520

6. 420