





Use the array provided to solve each problem.


1) $30 \times 22 =$




2) $20 \times 29 =$




3) $20 \times 22 =$




4) $24 \times 20 =$



5) $27 \times 20 =$



6) $20 \times 27 =$



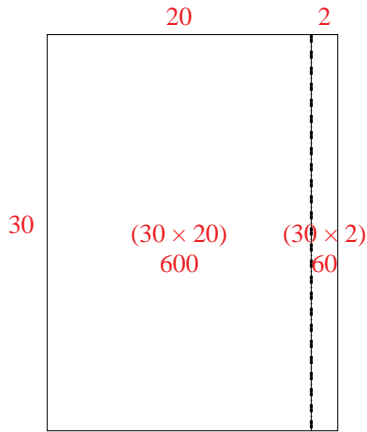
Answers

- 1. _____
- 2. _____
- 3. _____
- 4. _____
- 5. _____
- 6. _____

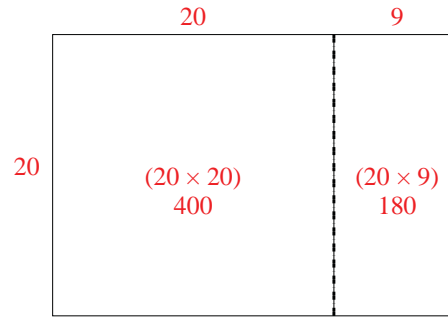


Use the array provided to solve each problem.

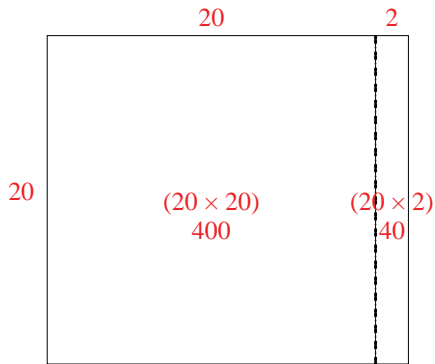
1) $30 \times 22 =$



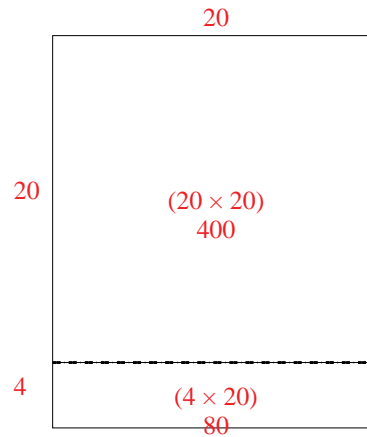
2) $20 \times 29 =$



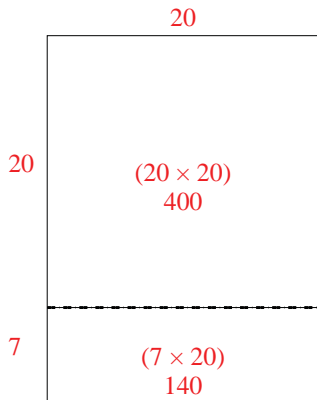
3) $20 \times 22 =$



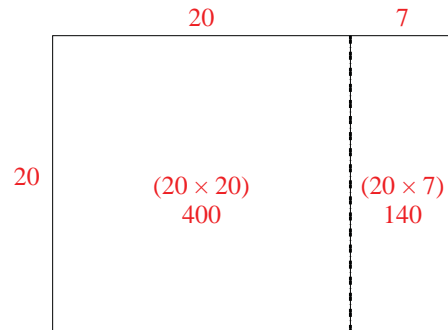
4) $24 \times 20 =$



5) $27 \times 20 =$



6) $20 \times 27 =$



Answers

1. 660
2. 580
3. 440
4. 480
5. 540
6. 540