





Use the array provided to solve each problem.


1) $28 \times 20 =$




2) $10 \times 11 =$




3) $16 \times 10 =$




4) $10 \times 14 =$



5) $10 \times 17 =$



6) $13 \times 10 =$



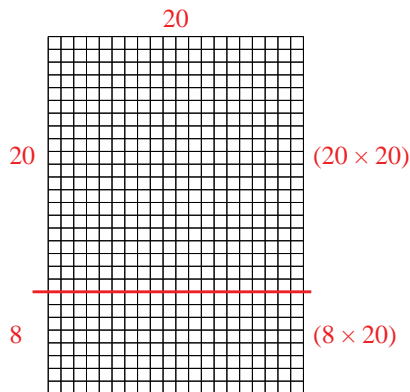
Answers

- 1. _____
- 2. _____
- 3. _____
- 4. _____
- 5. _____
- 6. _____

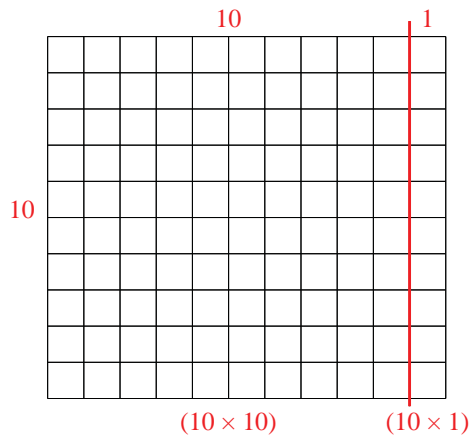


Use the array provided to solve each problem.

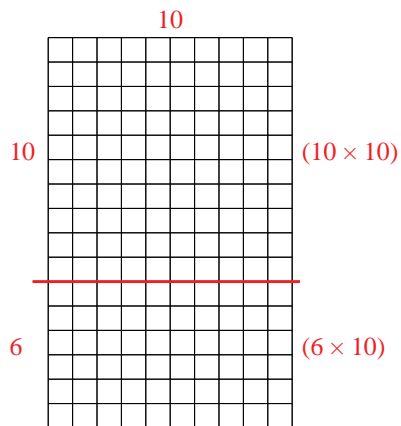
1) $28 \times 20 =$



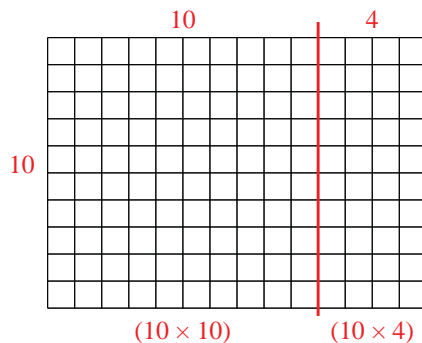
2) $10 \times 11 =$



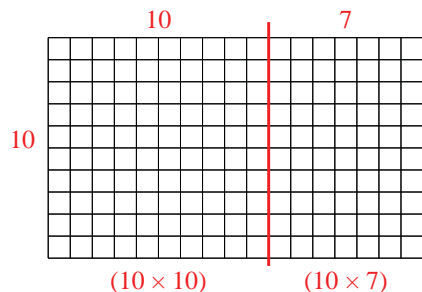
3) $16 \times 10 =$



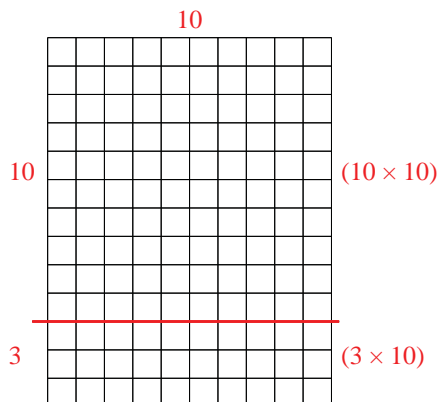
4) $10 \times 14 =$



5) $10 \times 17 =$



6) $13 \times 10 =$



Answers

1. 560
2. 110
3. 160
4. 140
5. 170
6. 130