


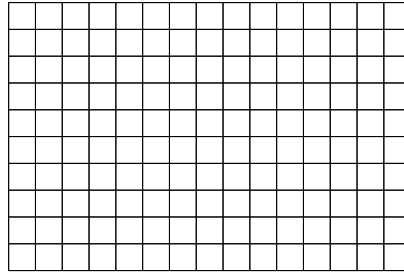


Use the array provided to solve each problem.


1) $20 \times 18 =$




2) $10 \times 15 =$




3) $19 \times 10 =$




4) $10 \times 11 =$



5) $17 \times 10 =$



6) $10 \times 14 =$



Answers

1. _____

2. _____

3. _____

4. _____

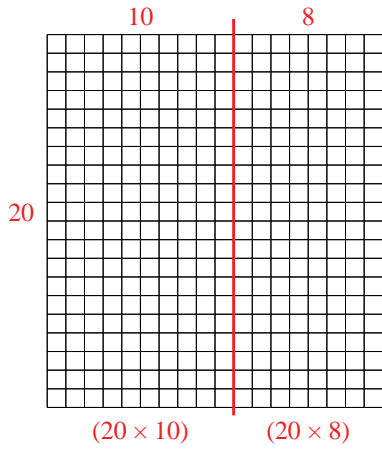
5. _____

6. _____

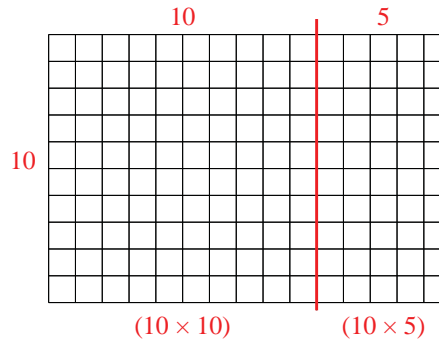


Use the array provided to solve each problem.

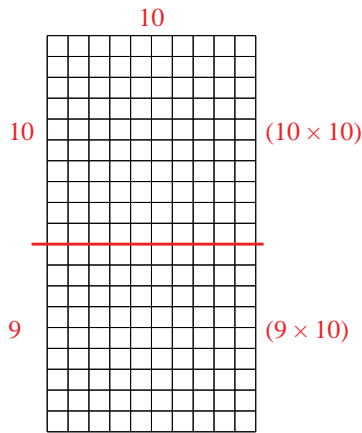
1) $20 \times 18 =$



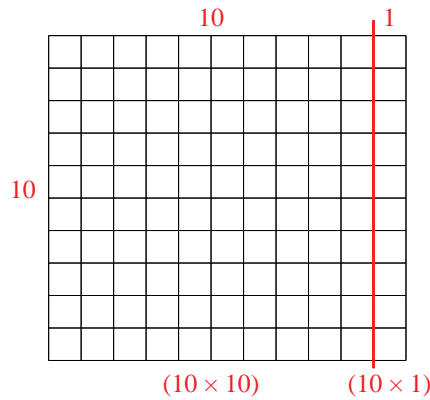
2) $10 \times 15 =$



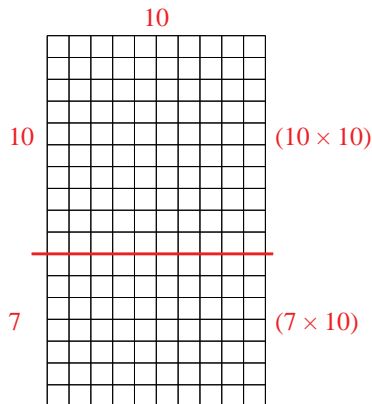
3) $19 \times 10 =$



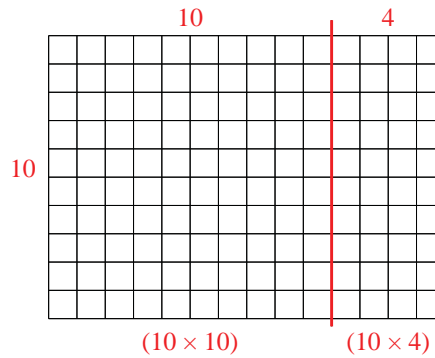
4) $10 \times 11 =$



5) $17 \times 10 =$



6) $10 \times 14 =$



Answers

1. 360
2. 150
3. 190
4. 110
5. 170
6. 140