





Use the array provided to solve each problem.


1) $10 \times 29 =$




2) $15 \times 10 =$




3) $10 \times 14 =$




4) $10 \times 19 =$



5) $10 \times 17 =$



6) $12 \times 10 =$



Answers

1. _____

2. _____

3. _____

4. _____

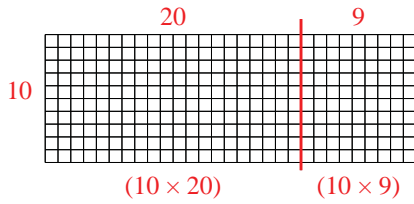
5. _____

6. _____

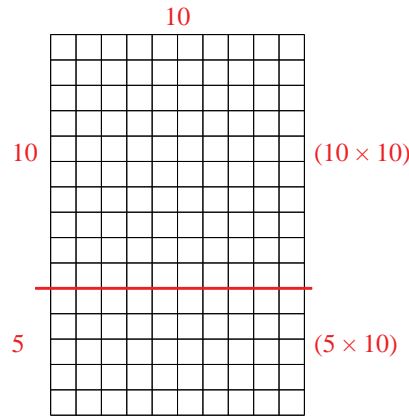


Use the array provided to solve each problem.

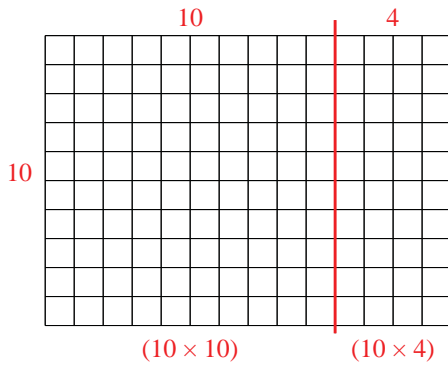
1) $10 \times 29 =$



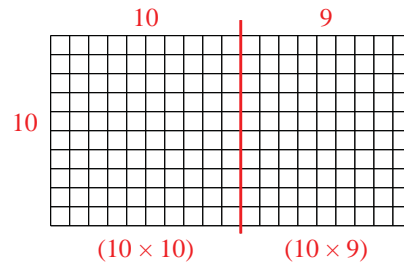
2) $15 \times 10 =$



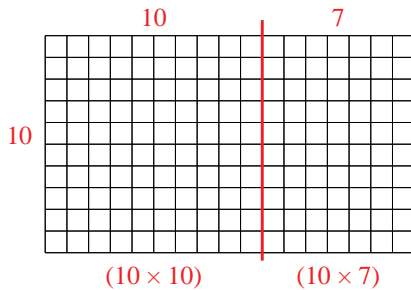
3) $10 \times 14 =$



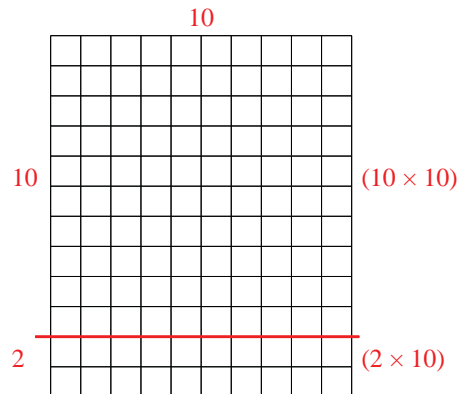
4) $10 \times 19 =$



5) $10 \times 17 =$



6) $12 \times 10 =$



Answers

1. 290
2. 150
3. 140
4. 190
5. 170
6. 120