





Use the array provided to solve each problem.


1) $11 \times 20 =$




2) $15 \times 10 =$




3) $10 \times 11 =$




4) $13 \times 10 =$



5) $18 \times 10 =$



6) $19 \times 10 =$



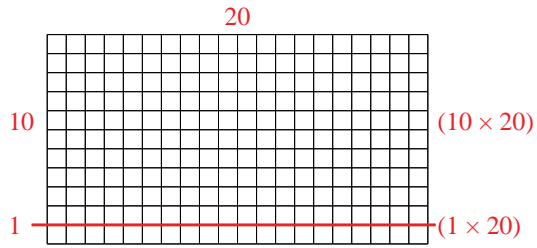
Answers

- 1. _____
- 2. _____
- 3. _____
- 4. _____
- 5. _____
- 6. _____

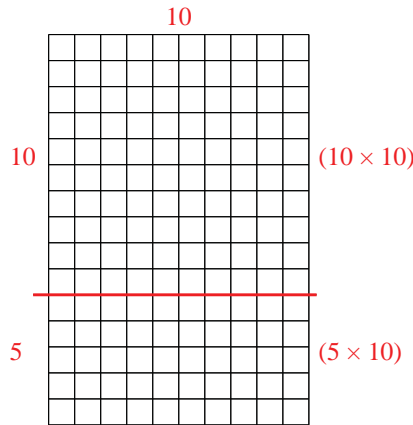


Use the array provided to solve each problem.

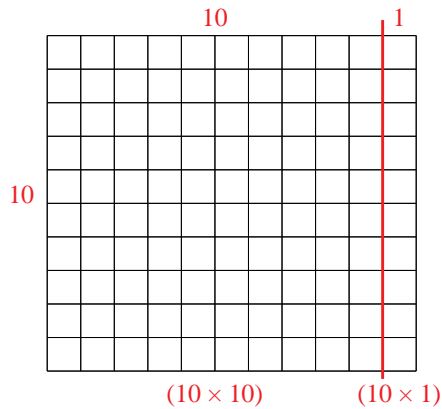
1) $11 \times 20 =$



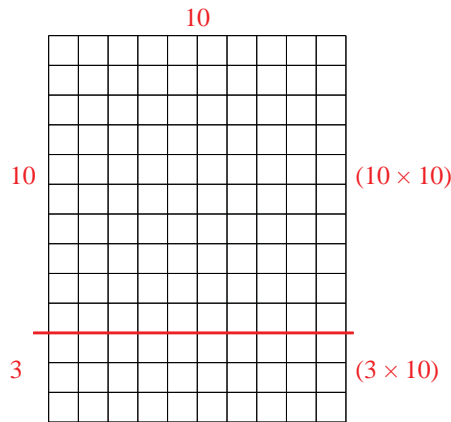
2) $15 \times 10 =$



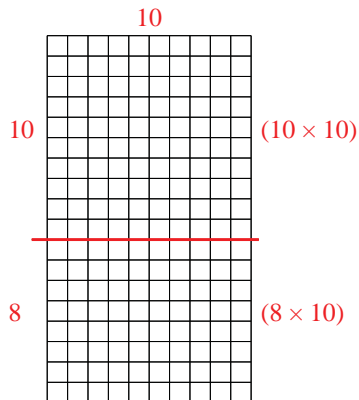
3) $10 \times 11 =$



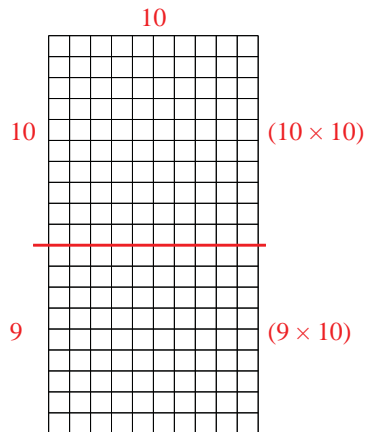
4) $13 \times 10 =$



5) $18 \times 10 =$



6) $19 \times 10 =$



Answers

1. 220

2. 150

3. 110

4. 130

5. 180

6. 190