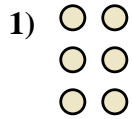
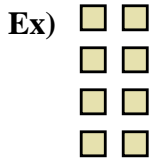




Write each array as an addition problem and solve.



Answers

Ex. $2+2+2+2=8$

1. _____

2. _____

3. _____

4. _____

5. _____

6. _____

7. _____

8. _____

9. _____




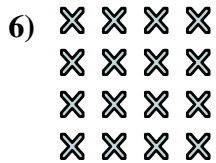
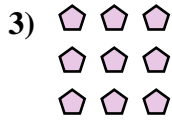
10. _____

11. _____

12. _____


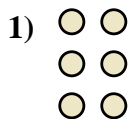
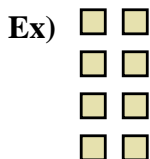
13. _____

14. _____





Write each array as an addition problem and solve.



Answers

Ex. $2+2+2+2=8$

1. $2+2+2=6$

2. $3+3+3+3=15$

3. $3+3+3=9$

4. $5+5+5+5=20$

5. $5+5+5=15$

6. $4+4+4+4=16$

7. $4+4=8$

8. $2+2+2+2+2=10$

9. $3+3=6$

10. $2+2=4$

11. $3+3+3+3=12$

12. $5+5=10$

13. $4+4+4=12$

14. $5+5+5+5+5=25$

